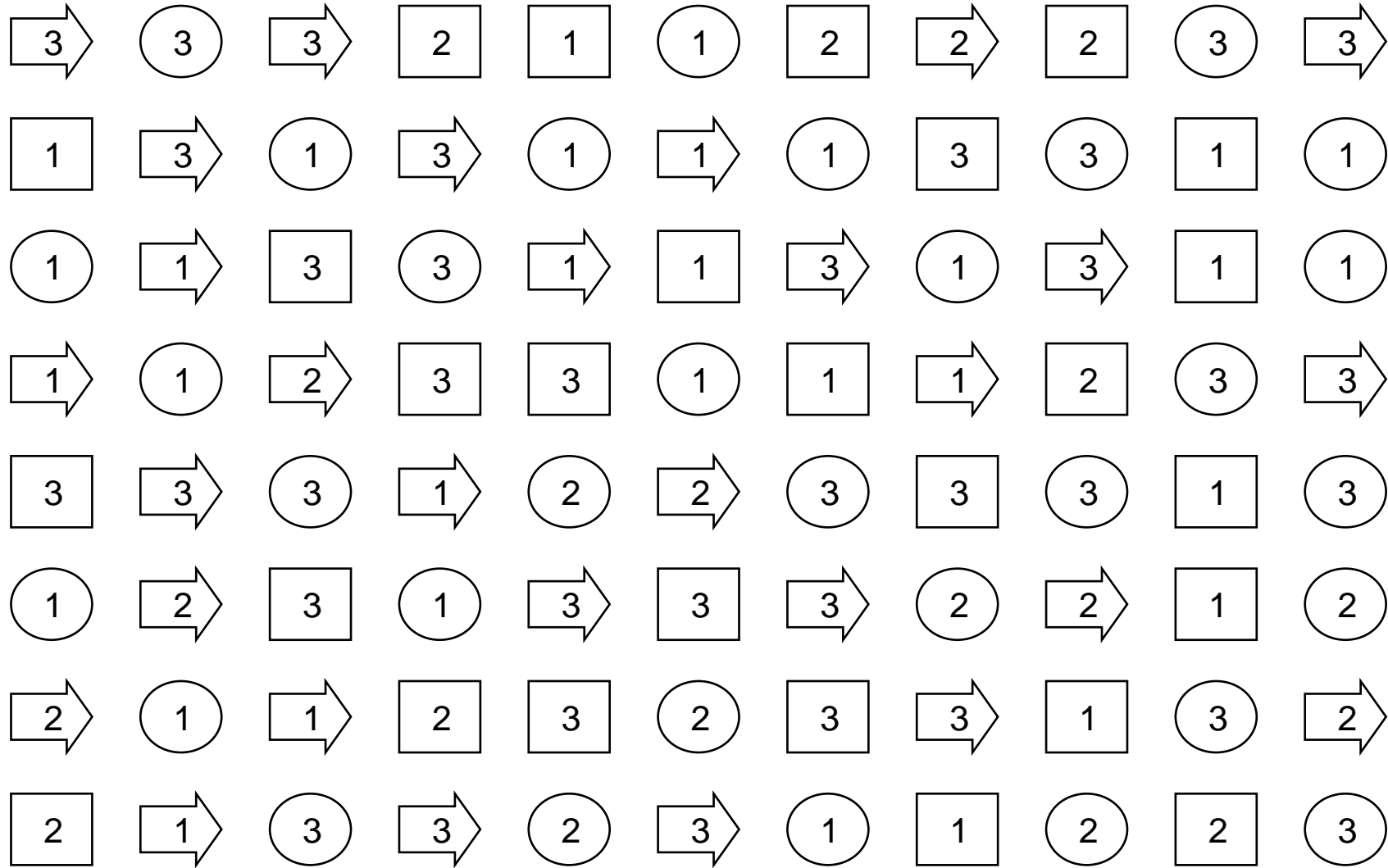
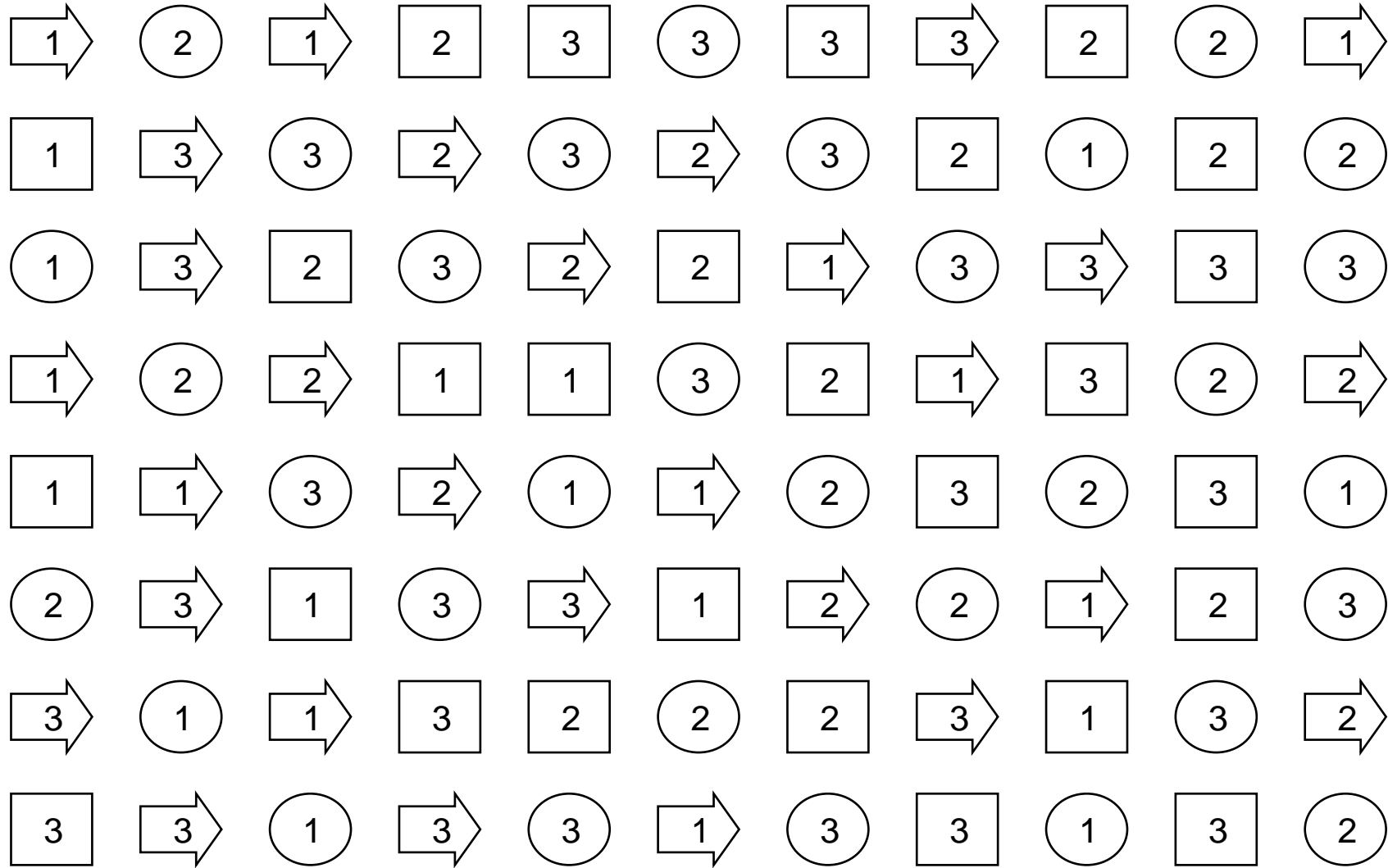


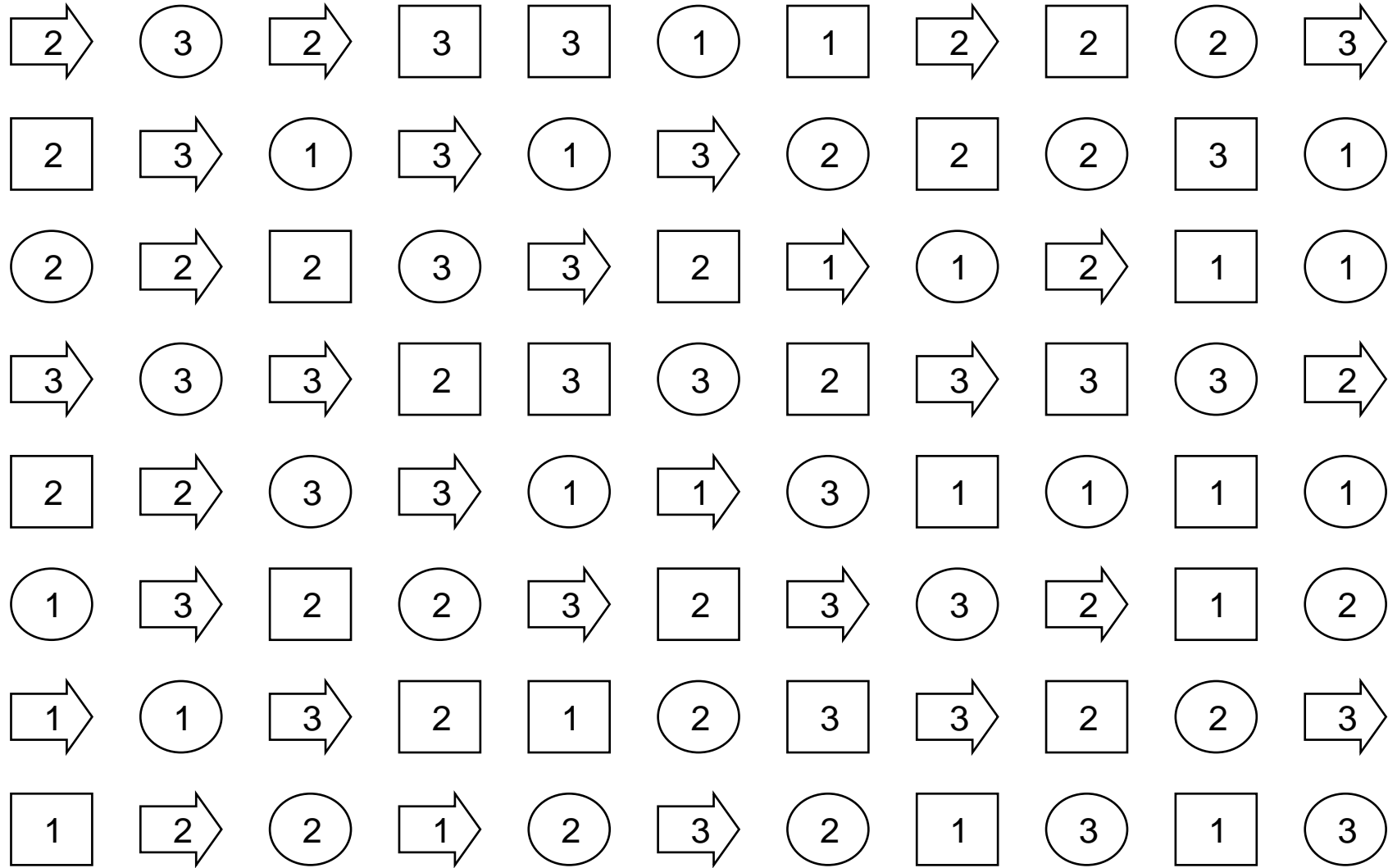
Colorea todos los cuadrados que tengan un 3 dentro de un círculo



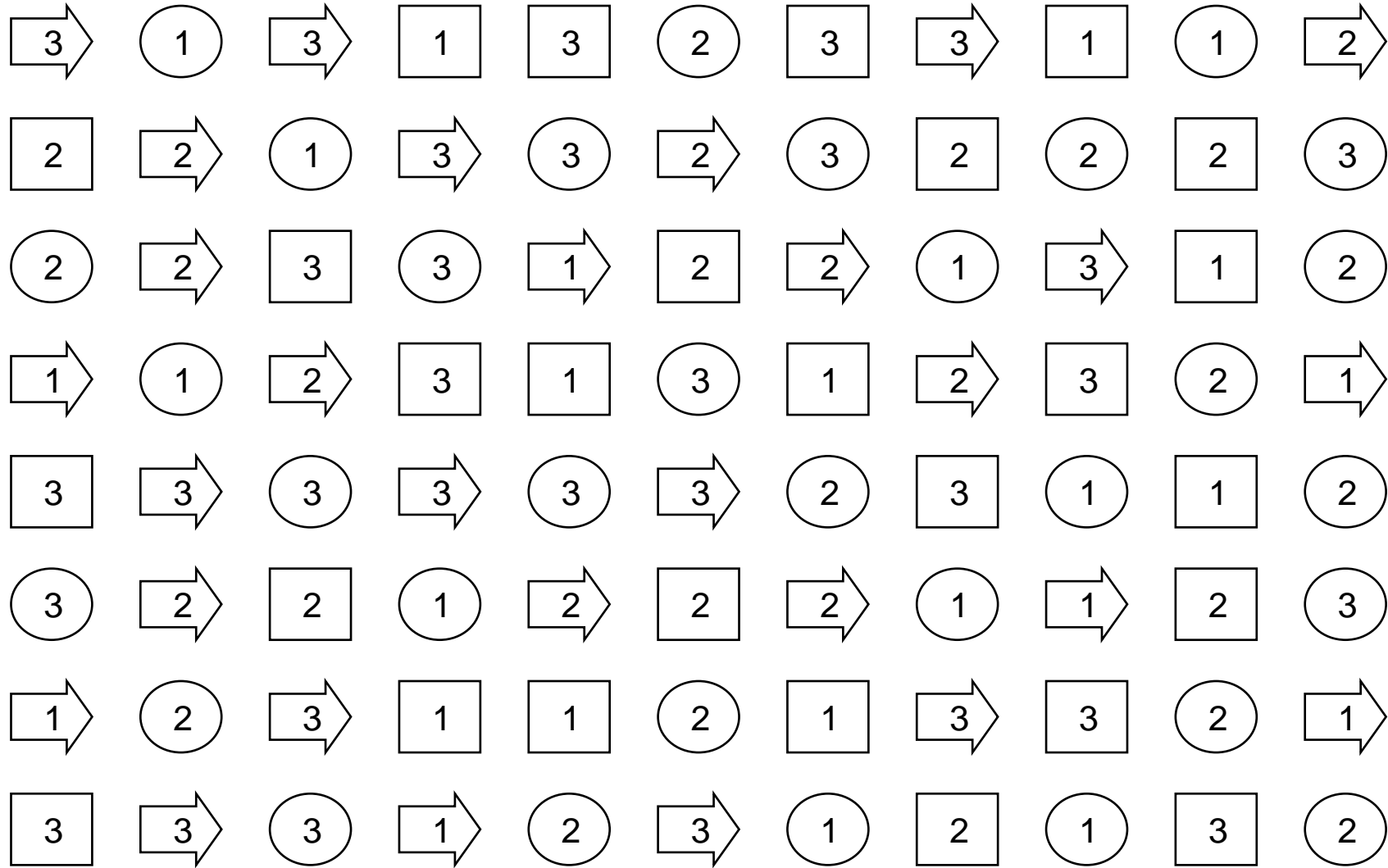
Colorea todos los cuadrados que tengan un 2 dentro de un cuadrado



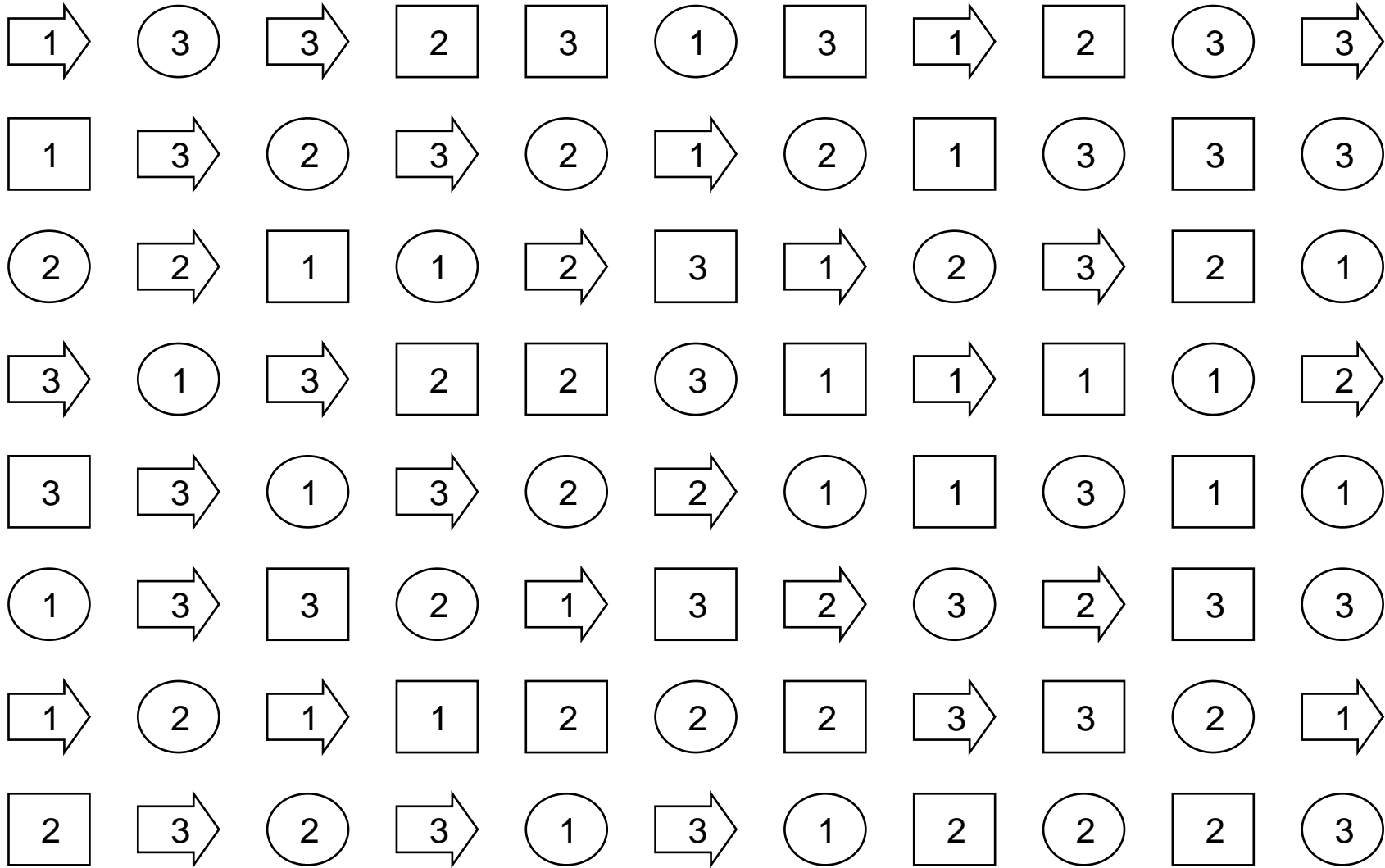
Colorea todos los cuadrados que tengan un 1 dentro de una flecha



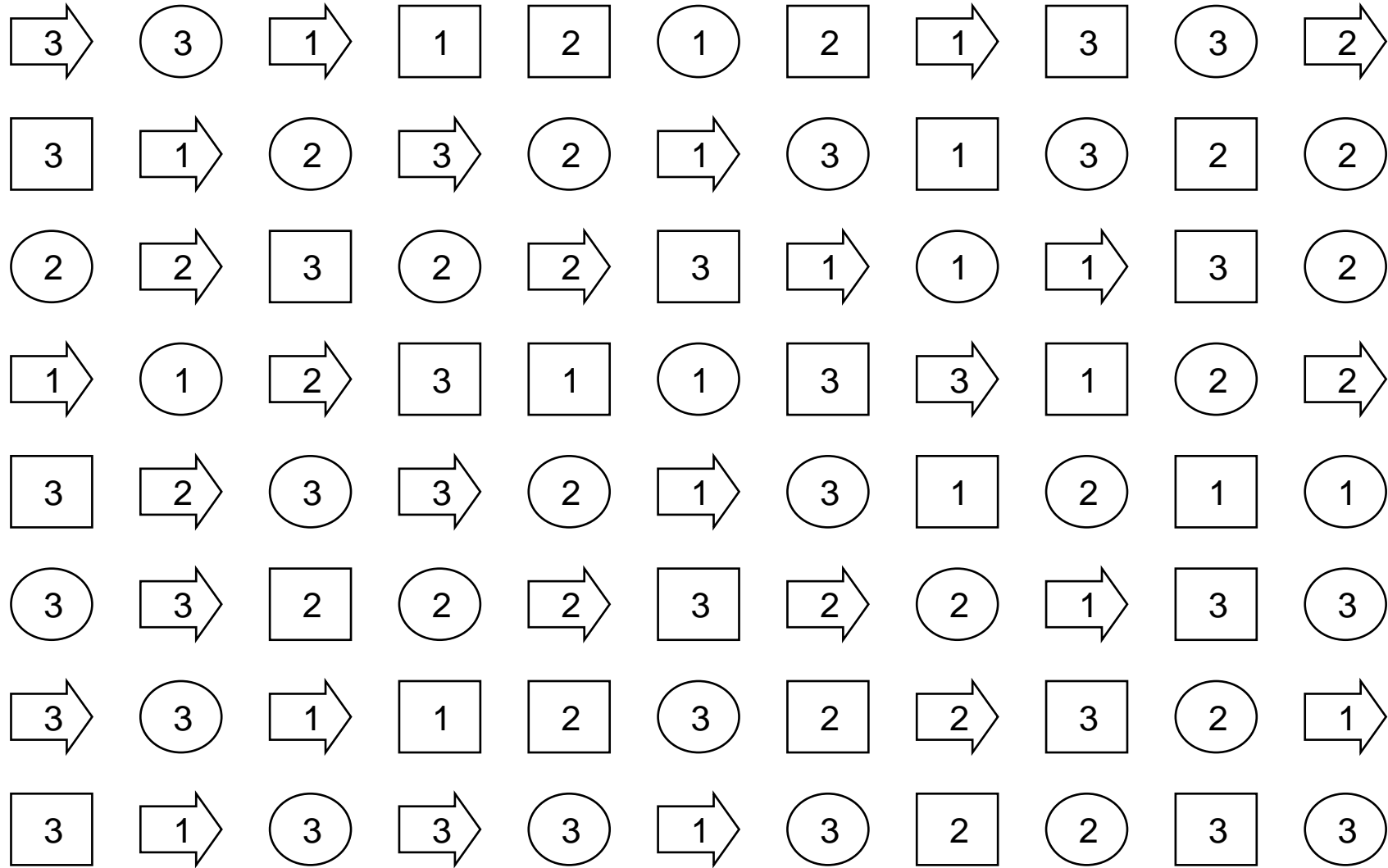
Colorea todos los cuadrados que tengan un 3 dentro de un círculo



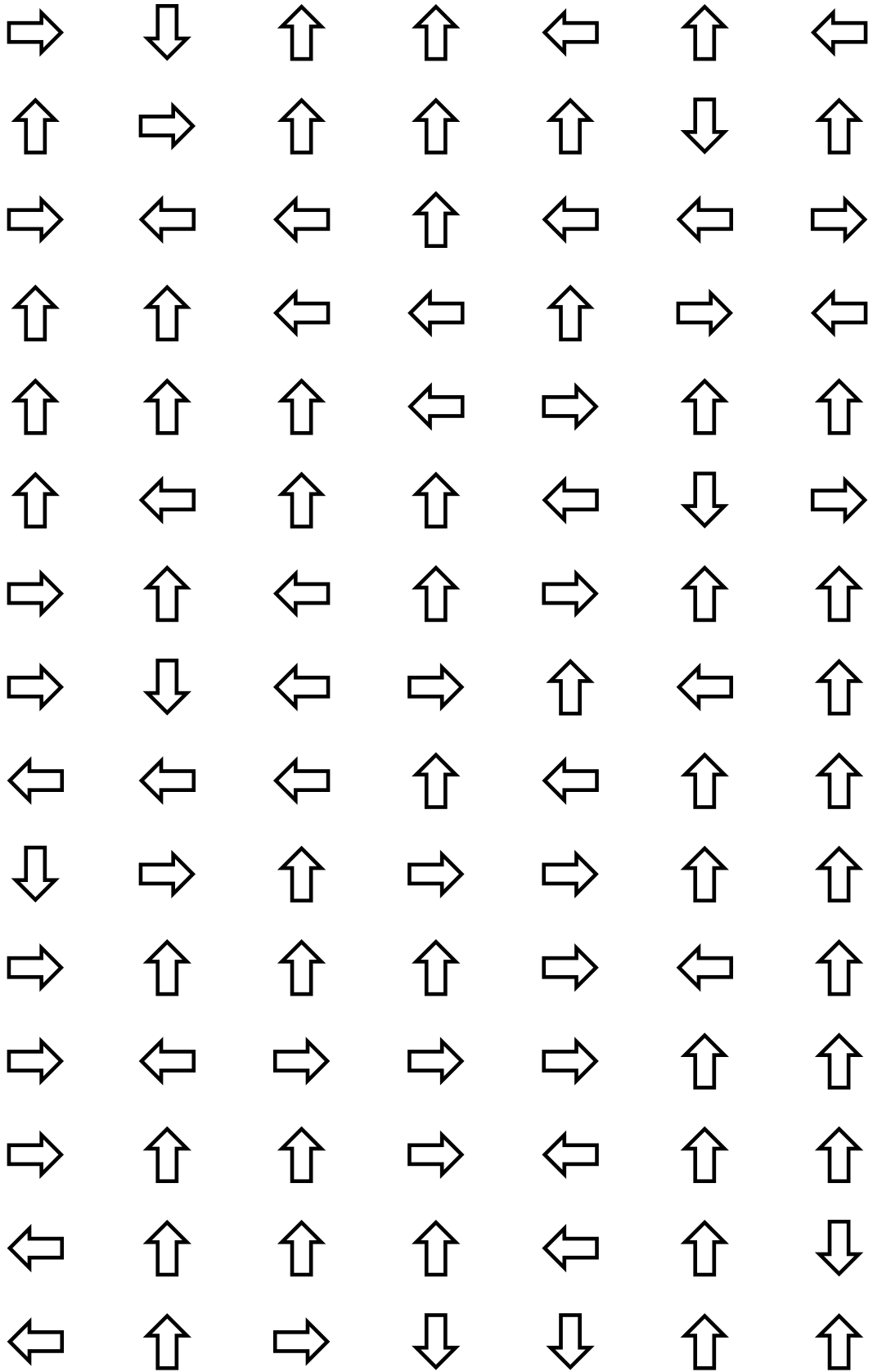
Colorea todos los cuadrados que tengan un 2 dentro de un cuadrado



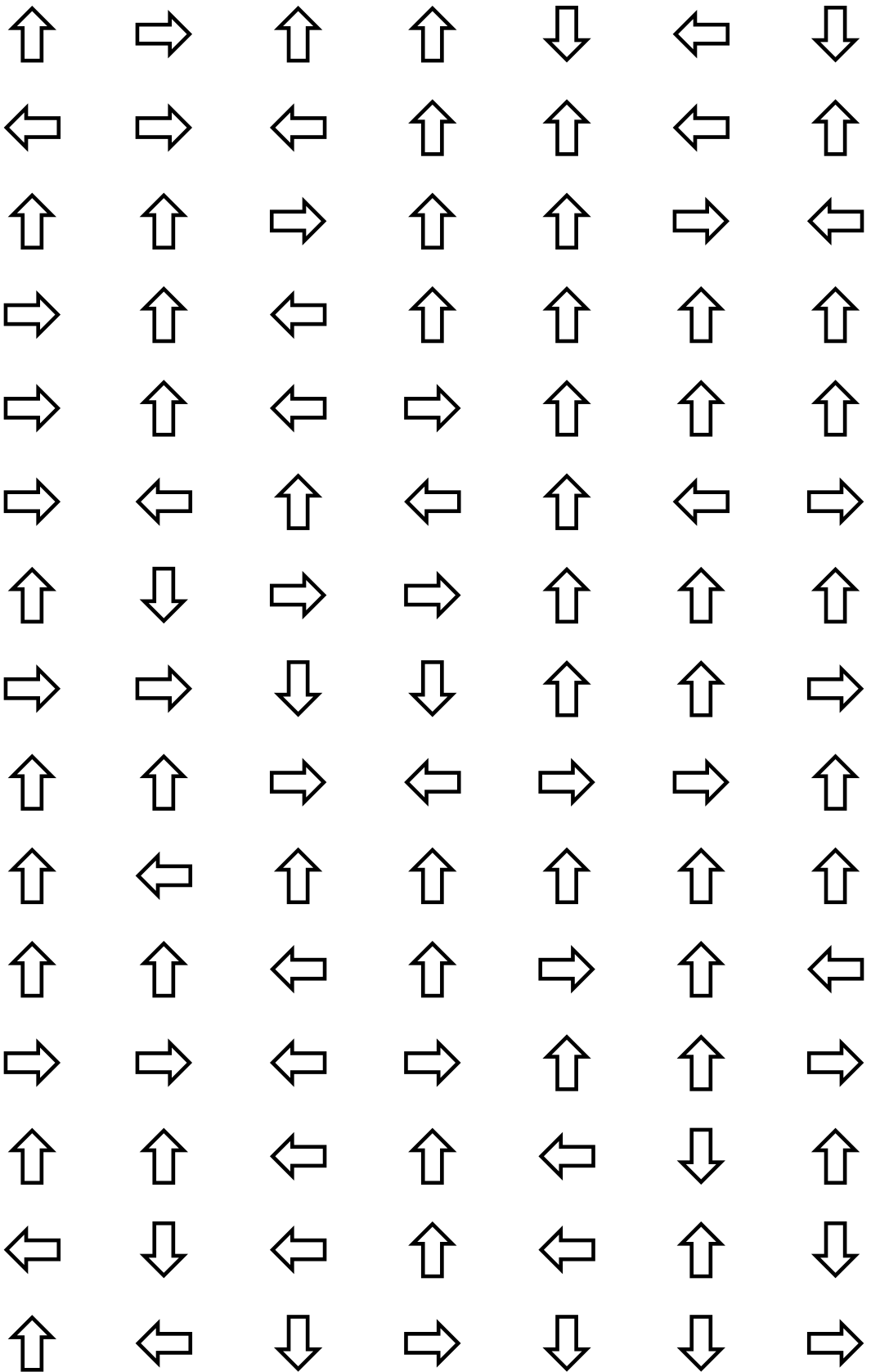
Colorea todos los cuadrados que tengan un 1 dentro de una flecha



Colorea las flechas que sean como ésta:

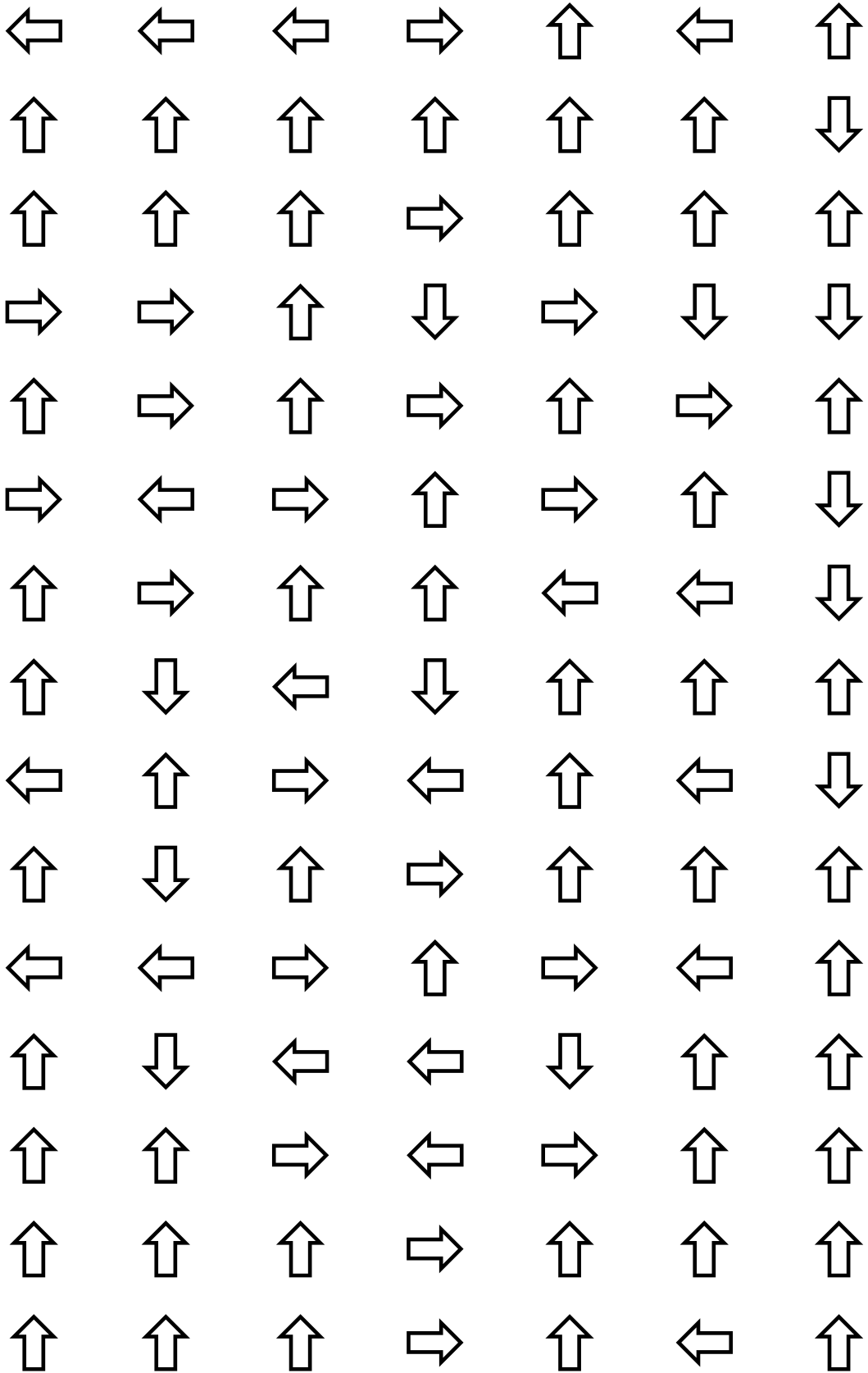


Colorea las flechas que sean como ésta:

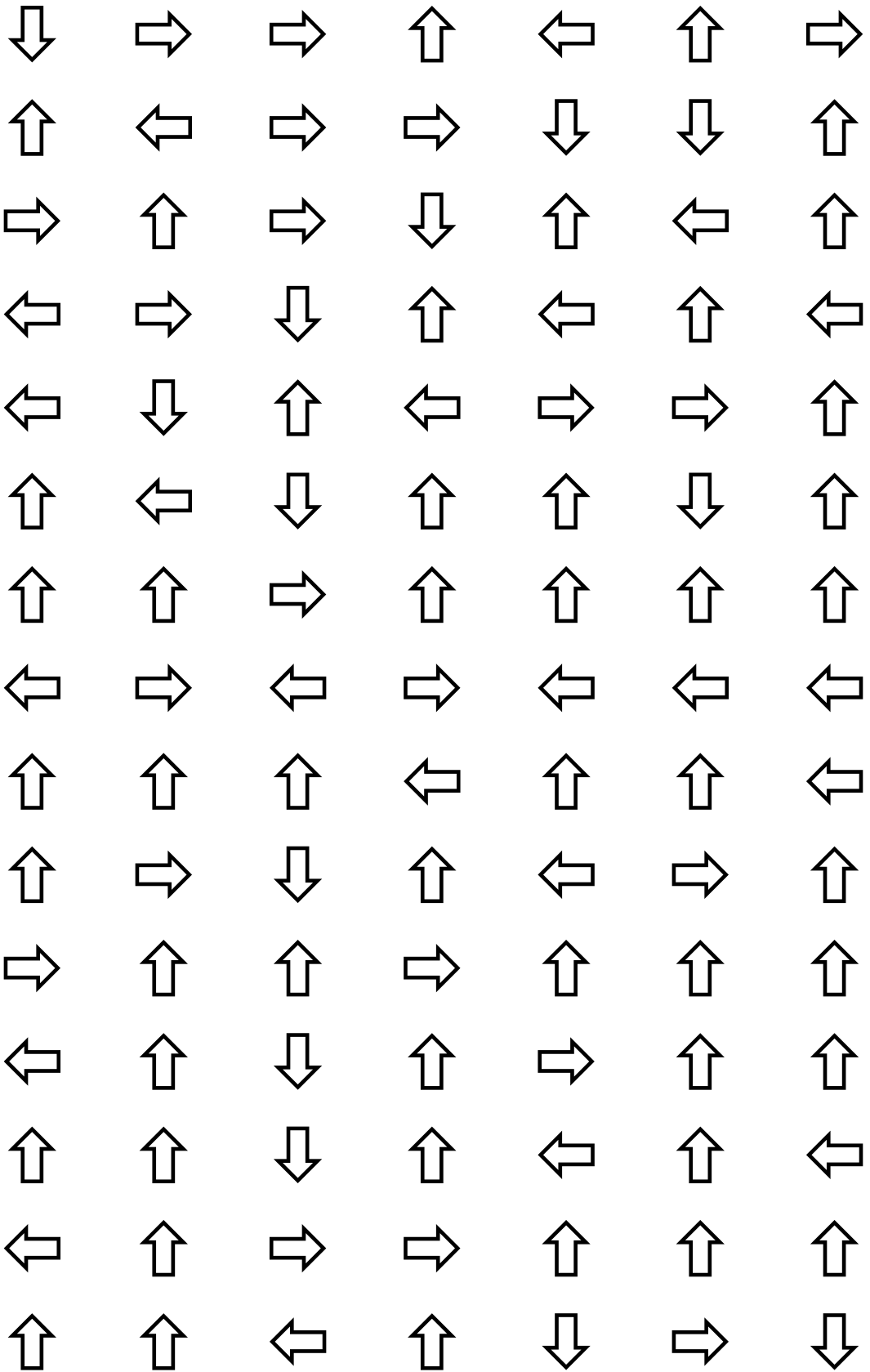




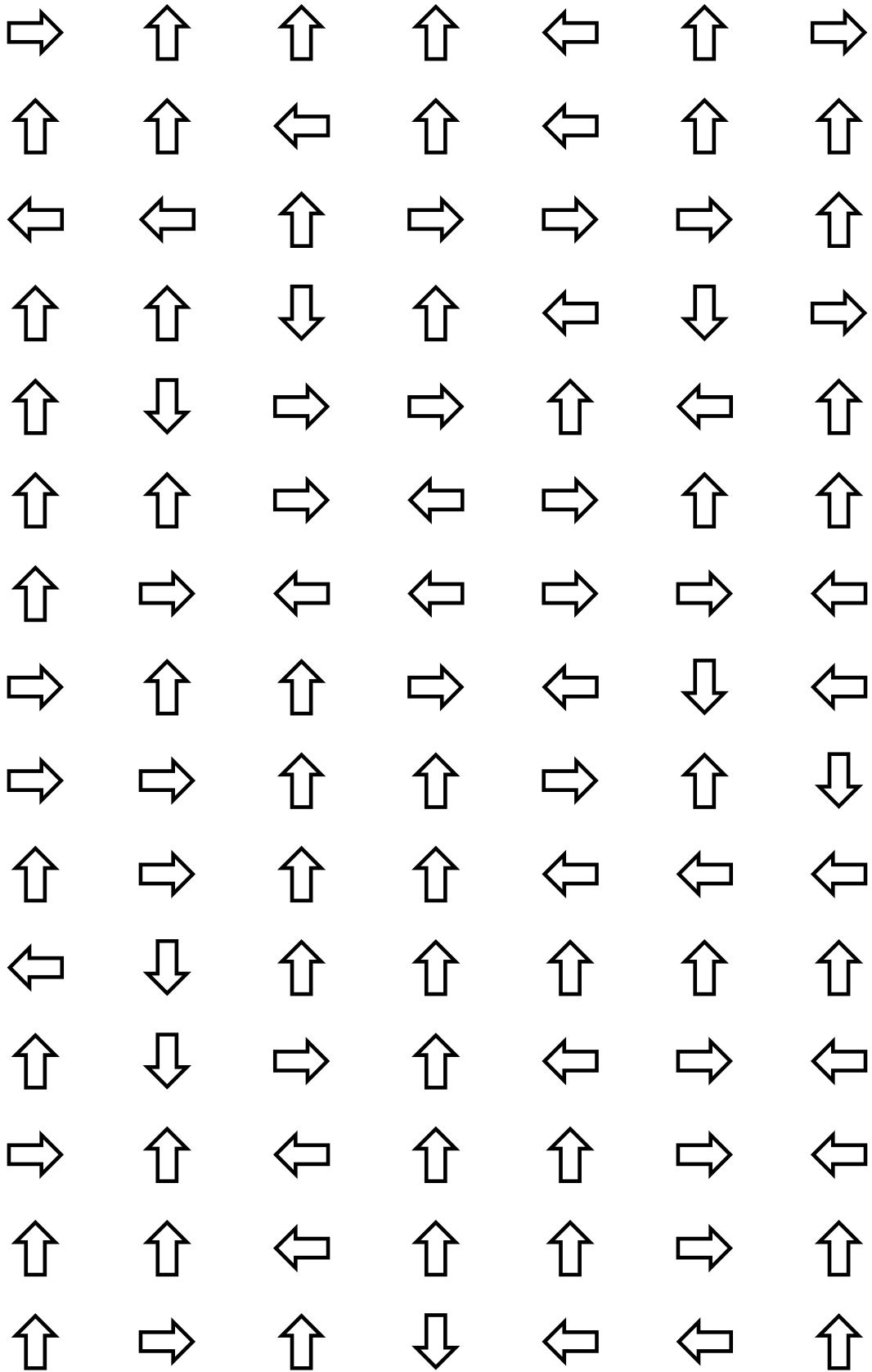
Colorea las flechas que sean como ésta:




Colorea las flechas que sean como ésta:




Colorea las flechas que sean como ésta:




Colorea todos los círculos que lleven dentro una 'a'




Colorea todos los cuadrados que lleven dentro una 'c'




Colorea todos los círculos que lleven dentro una 'a'




Colorea todos los rombos que lleven dentro una 'b'




Colorea todos los círculos que lleven dentro una 'b'




Colorea todos los cuadrados que lleven dentro una 'b'




Colorea todos los círculos que lleven dentro una 'b'




Colorea todos los rombos que lleven dentro una 'b'



Colorea todos los círculos que lleven dentro una 'b'



Colorea todos los cuadrados que lleven dentro una 'a'





4	1	9	7	6	5	7	1	7	2	5	1
8	1	4	0	5	3	2	2	5	6	4	7
7	8	7	6	7	8	7	2	0	8	9	6
9	7	7	5	2	2	7	1	9	8	4	3
0	1	2	3	8	9	1	0	0	1	0	9
5	2	5	8	6	7	3	7	1	1	8	6
8	1	8	5	2	8	3	0	9	0	0	2

¿Cuántas veces aparece el 0? .....

¿Cuántas veces aparece el 1? .....

¿Cuántas veces aparece el 2? .....

¿Cuántas veces aparece el 3? .....

¿Cuántas veces aparece el 4? .....

¿Cuántas veces aparece el 5? .....

¿Cuántas veces aparece el 6? .....

¿Cuántas veces aparece el 7? .....

¿Cuántas veces aparece el 8? .....

¿Cuántas veces aparece el 9? .....

3	8	6	0	1	0	9	6	3	0	9	4
7	0	1	2	7	7	5	9	3	3	0	4
8	7	9	5	8	6	6	3	5	1	6	5
6	6	0	7	9	3	1	9	9	5	5	4
9	4	4	7	3	6	7	1	1	9	7	8
8	8	3	1	0	6	1	1	7	9	9	8
9	2	8	0	7	9	9	6	1	4	1	0

¿Cuántas veces aparece el 0? .....

¿Cuántas veces aparece el 1? .....

¿Cuántas veces aparece el 2? .....

¿Cuántas veces aparece el 3? .....

¿Cuántas veces aparece el 4? .....

¿Cuántas veces aparece el 5? .....

¿Cuántas veces aparece el 6? .....

¿Cuántas veces aparece el 7? .....

¿Cuántas veces aparece el 8? .....

¿Cuántas veces aparece el 9? .....

5	3	5	3	4	4	7	0	0	1	1	2
1	6	1	0	2	7	0	7	0	5	6	2
0	4	7	2	9	4	2	8	9	5	4	4
5	5	3	9	3	9	4	4	6	0	2	2
3	5	7	1	5	6	2	7	7	5	3	9
3	1	6	3	4	2	8	4	6	2	9	4
2	1	5	6	1	8	6	1	8	6	2	3

¿Cuántas veces aparece el 0? .....

¿Cuántas veces aparece el 1? .....

¿Cuántas veces aparece el 2? .....

¿Cuántas veces aparece el 3? .....

¿Cuántas veces aparece el 4? .....

¿Cuántas veces aparece el 5? .....

¿Cuántas veces aparece el 6? .....

¿Cuántas veces aparece el 7? .....

¿Cuántas veces aparece el 8? .....

¿Cuántas veces aparece el 9? .....

1	7	7	3	5	8	5	9	3	4	8	4
0	9	9	8	3	4	6	6	7	5	0	5
2	1	4	7	7	5	3	4	2	1	4	5
4	0	6	5	0	0	9	3	5	0	3	5
2	9	7	9	4	5	9	9	3	7	0	5
9	7	2	1	7	0	8	7	0	7	7	7
5	5	2	9	0	9	3	0	6	7	4	0

¿Cuántas veces aparece el 0? .....

¿Cuántas veces aparece el 1? .....

¿Cuántas veces aparece el 2? .....

¿Cuántas veces aparece el 3? .....

¿Cuántas veces aparece el 4? .....

¿Cuántas veces aparece el 5? .....

¿Cuántas veces aparece el 6? .....

¿Cuántas veces aparece el 7? .....

¿Cuántas veces aparece el 8? .....

¿Cuántas veces aparece el 9? .....

5	4	9	9	6	9	6	8	4	6	3	9
9	4	9	3	6	9	1	7	0	4	1	3
2	8	6	5	8	5	4	8	7	7	9	0
5	9	1	7	7	7	9	7	1	4	9	3
5	2	4	4	0	7	3	8	7	1	3	8
3	9	0	8	5	1	5	2	3	5	4	2
7	0	6	8	1	5	0	7	3	8	7	2

¿Cuántas veces aparece el 0? .....

¿Cuántas veces aparece el 1? .....

¿Cuántas veces aparece el 2? .....

¿Cuántas veces aparece el 3? .....

¿Cuántas veces aparece el 4? .....

¿Cuántas veces aparece el 5? .....

¿Cuántas veces aparece el 6? .....

¿Cuántas veces aparece el 7? .....

¿Cuántas veces aparece el 8? .....

¿Cuántas veces aparece el 9? .....

Copia el modelo de la izquierda en la cuadrícula de la derecha

↓	↓	↓	↓	↑	□
○	↓	↓	○	○	↓
□	↑	↑	→	↓	○
→	□	↓	↓	□	□
□	○	↑	↓	↓	○


↑	↑	↑	↑	↓	○
○	↓	↓	↓	□	↓
↓	□	↑	↓	↑	↓
↓	↓	↓	↑	○	↓
→	↓	○	□	□	□


□	□	○	→	↓	↑
□	↓	↓	→	○	↑
↓	↓	↓	↓	↓	↑
↑	→	○	↑	→	□
○	→	○	↓	□	□


Copia el modelo de la izquierda en la cuadrícula de la derecha

○	○	→	↑	□	○
○	↓	↓	↓	↓	○
↓	↓	□	→	○	○
□	○	□	□	○	□
→	□	○	□	↓	□


○	□	↑	→	↓	□
○	↑	↑	→	→	→
□	↓	↓	□	→	□
□	□	→	↓	↑	→
□	○	↑	→	↓	→


↑	□	□	○	→	○
↑	□	○	○	↓	↓
○	↓	□	↓	↓	□
↑	↓	□	↓	○	↓
○	□	□	○	○	↑


Copia el modelo de la izquierda en la cuadrícula de la derecha

○	□	↓	↓	↑	↓
○	□	↓	○	→	↓
→	↑	↓	→	○	↓
○	↑	↓	→	○	↓
○	↓	□	○	○	↑


↓	↑	□	↓	○	○
↓	↓	○	↑	↓	↑
↓	○	○	↓	↓	↓
↓	↑	□	○	○	↓
□	↓	○	↓	□	○


↓	○	↑	□	○	□
→	○	□	□	○	□
↓	↓	↓	↓	↓	↓
○	○	□	→	↓	↓
↑	□	↑	↓	□	□




Copia el modelo de la izquierda en la cuadrícula de la derecha

↓	↓	↓	○	↓	○
○	↓	↓	○	↓	↓
↓	→	○	○	□	↓
↓	□	○	↑	↑	↓
○	○	□	↑	→	□


□	□	→	↓	□	○
□	↑	↑	↓	↓	↓
↓	→	□	→	○	○
↓	↓	↓	↓	→	○
↓	→	□	→	↓	↑


○	○	↓	↓	↓	○
○	○	↓	□	○	○
□	○	○	○	↓	↑
○	↓	↓	○	↓	→
○	→	○	□	○	→


Copia el modelo de la izquierda en la cuadrícula de la derecha

↓	↓	↓	↓	□	□
→	○	↓	□	↓	□
○	↓	↓	↑	↓	→
↓	↓	○	○	↓	□
↓	→	□	→	○	○


○	□	↓	→	→	□
↓	↑	□	□	→	□
↓	↓	□	□	↓	○
↑	↑	○	→	○	↓
□	↓	↓	↓	□	↓


□	↑	→	→	○	↓
↓	↓	○	□	□	↓
↓	↑	↑	□	○	○
○	□	→	○	□	↓
→	□	□	→	↓	□


Completa la tabla de abajo como la de arriba

d	g	c	g	i	j	h	j	c	d	i	g
c	c	a	e	d	h	g	b	a	j	d	g
c	e	e	i	g	e	c	j	g	h	i	d
j	h	b	e	h	h	h	a	e	a	f	a

d		c		i	j		j	c		i	
	c		e	d		g		a	j		g
c	e	e			e	c	j			i	
		b	e	h			a	e	a		a

Completa la tabla de abajo como la de arriba

d	b	d	j	e	h	c	b	a	j	e	a
h	e	a	a	f	i	e	a	b	g	a	f
h	i	d	c	c	d	f	a	d	e	d	b
c	e	d	g	f	a	j	d	a	d	g	a

d		d		e	h		b	a		e	
	e		a	f		e		b	g		f
h	i	d			d	f	a			d	
		d	g	f			d	a	d		a

Completa la tabla de abajo como la de arriba

b	i	d	f	g	a	e	a	c	a	d	g
a	i	g	a	h	g	f	b	c	c	i	e
f	g	d	h	i	b	b	f	e	h	g	e
h	h	f	j	e	a	h	i	g	g	d	h

b		d		g	a		a	c		d	
	i		a	h		f		c	c		e
f	g	d			b	b	f			g	
		f	j	e			i	g	g		h

Completa la tabla de abajo como la de arriba

g	a	e	i	e	c	d	i	j	c	i	a
b	e	f	e	c	f	b	g	c	h	i	j
f	g	c	g	g	e	c	b	e	j	e	c
f	a	a	j	b	e	d	d	e	e	d	g

g		e		e	c		i	j		i	
	e		e	c		b		c	h		j
f	g	c			e	c	b			e	
		a	j	b			d	e	e		g

Completa la tabla de abajo como la de arriba

e	b	f	b	a	j	d	d	g	a	i	i
a	i	a	j	j	j	i	f	g	c	h	g
a	j	a	d	j	j	d	c	f	i	j	b
h	d	j	c	g	e	c	a	a	b	a	e

e		f		a	j		d	g		i	
	i		j	j		i		g	c		g
a	j	a			j	d	c			j	
		j	c	g			a	a	b		e

Completa la tabla de abajo como la de arriba

g	b	d	f	i	e	c	e	h	e	g	g
c	d	d	e	c	e	a	j	j	c	i	e
a	g	b	h	i	h	a	j	a	g	a	f
j	e	f	h	a	a	g	i	h	h	f	c

g		d		i	e		e	h		g	
	d		e	c		a		j	c		e
a	g	b			h	a	j			a	
		f	h	a			i	h	h		c

Completa la tabla de abajo como la de arriba

j	b	e	f	e	a	d	i	e	c	f	a
h	e	g	g	d	b	c	c	c	a	c	c
g	d	i	e	b	j	j	f	j	i	h	i
c	i	b	j	b	b	f	i	g	j	b	b

j		e		e	a		i	e		f	
	e		g	d		c		c	a		c
g	d	i			j	j	f			h	
		b	j	b			i	g	j		b

Completa la tabla de abajo como la de arriba

i	e	e	c	i	i	c	b	a	e	d	d
d	a	i	j	b	e	b	e	g	h	a	i
b	i	b	j	d	f	a	e	a	i	e	g
e	e	f	c	d	c	c	a	a	h	h	f

i		e		i	i		b	a		d	
	a		j	b		b		g	h		i
b	i	b			f	a	e			e	
		f	c	d			a	a	h		f

Completa la tabla de abajo como la de arriba

e	e	d	i	a	e	f	i	h	d	i	e
c	i	a	j	b	g	e	a	a	i	g	e
h	e	e	j	h	i	h	j	h	c	c	j
h	g	d	a	g	a	i	j	g	b	g	i

e		d		a	e		i	h		i	
	i		j	b		e		a	i		e
h	e	e			i	h	j			c	
		d	a	g			j	g	b		i

Completa la tabla de abajo como la de arriba

g	f	h	i	b	f	b	i	g	j	f	f
g	f	f	c	g	d	c	c	j	j	g	h
a	a	a	c	b	b	h	e	c	j	g	g
b	h	g	g	e	d	i	h	i	a	i	f

g		h		b	f		i	g		f	
	f		c	g		c		j	j		h
a	a	a			b	h	e			g	
		g	g	e			h	i	a		f

Completa la tabla de abajo como la de arriba

1	0	5	7	3	0	4	6	5	6	8	6
2	4	3	6	6	3	6	2	8	8	1	0
4	3	1	7	2	9	6	8	4	0	5	8
0	5	3	8	1	7	3	1	8	7	7	5

1		5		3	0		6	5		8	
	4		6	6		6		8	8		0
4	3	1			9	6	8			5	
		3	8	1			1	8	7		5

Completa la tabla de abajo como la de arriba

6	6	4	5	7	3	1	0	8	7	5	0
2	2	7	8	4	0	4	5	6	4	9	4
2	9	3	4	3	1	3	4	5	4	0	6
9	9	0	7	7	9	0	9	9	5	9	7

6		4		7	3		0	8		5	
	2		8	4		4		6	4		4
2	9	3			1	3	4			0	
		0	7	7			9	9	5		7



Completa la tabla de abajo como la de arriba

3	3	4	0	7	9	3	4	6	8	2	7
1	0	3	7	2	6	1	0	3	6	2	2
3	1	2	0	8	7	8	7	5	7	5	7
6	5	6	7	6	2	0	4	9	9	3	4

3		4		7	9		4	6		2	
	0		7	2		1		3	6		2
3	1	2			7	8	7			5	
		6	7	6			4	9	9		4

Completa la tabla de abajo como la de arriba

9	9	3	1	8	9	2	0	4	4	4	5
9	6	8	5	0	9	1	6	6	5	6	0
8	3	5	1	3	9	6	8	6	7	7	2
6	5	5	0	7	1	7	6	1	9	1	0

9		3		8	9		0	4		4	
	6		5	0		1		6	5		0
8	3	5			9	6	8			7	
		5	0	7			6	1	9		0

Completa la tabla de abajo como la de arriba

4	9	2	4	2	8	7	5	3	1	0	2
6	7	0	7	2	7	5	8	0	6	9	2
6	5	5	1	2	3	4	3	8	0	4	1
0	5	7	8	3	6	4	0	3	0	9	8

4		2		2	8		5	3		0	
	7		7	2		5		0	6		2
6	5	5			3	4	3			4	
		7	8	3			0	3	0		8

Completa la tabla de abajo como la de arriba

5	5	3	2	2	4	4	4	9	9	3	3
8	9	0	2	1	6	8	4	0	7	5	8
7	8	5	4	7	8	3	3	7	2	0	9
8	1	7	2	6	3	2	1	1	8	0	6

5		3		2	4		4	9		3	
	9		2	1		8		0	7		8
7	8	5			8	3	3			0	
		7	2	6			1	1	8		6

Completa la tabla de abajo como la de arriba

1	8	6	1	7	4	6	9	7	0	4	5
9	8	9	2	5	6	5	9	7	0	3	7
8	0	9	5	0	3	5	7	1	2	5	4
5	6	4	8	7	5	0	1	4	0	0	1

1		6		7	4		9	7		4	
	8		2	5		5		7	0		7
8	0	9			3	5	7			5	
		4	8	7			1	4	0		1

Completa la tabla de abajo como la de arriba

3	7	0	7	7	2	2	8	4	1	2	5
1	3	5	3	3	8	9	3	1	8	1	8
6	0	2	9	6	5	1	0	3	7	3	8
5	0	6	7	9	4	0	2	7	5	5	4

3		0		7	2		8	4		2	
	3		3	3		9		1	8		8
6	0	2			5	1	0			3	
		6	7	9			2	7	5		4

Completa la tabla de abajo como la de arriba

0	4	2	1	0	0	0	4	0	1	6	7
1	7	2	4	4	7	7	9	2	2	7	1
7	9	9	8	1	8	8	3	5	6	3	2
2	8	0	1	0	4	9	2	4	2	4	5

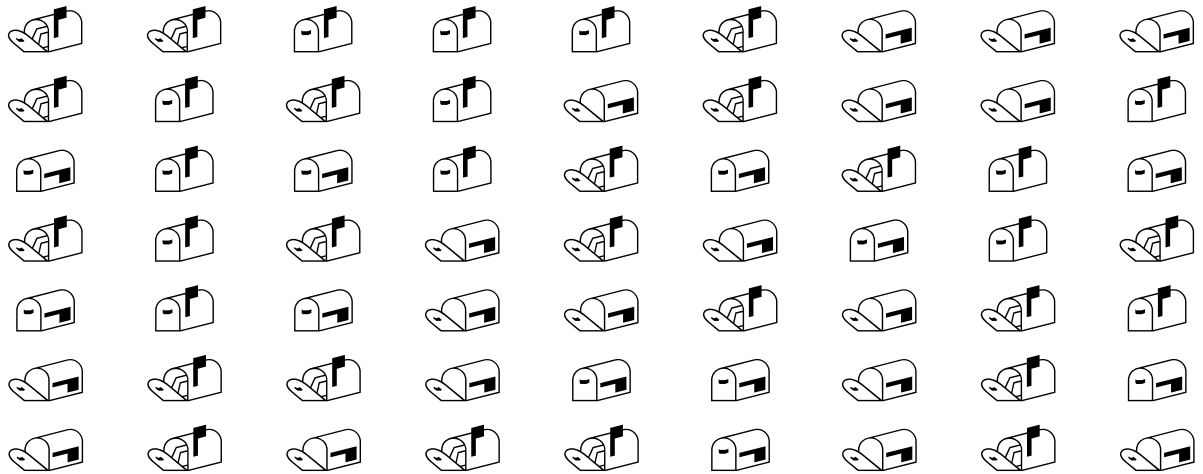
0		2		0	0		4	0		6	
	7		4	4		7		2	2		1
7	9	9			8	8	3			3	
		0	1	0			2	4	2		5

Completa la tabla de abajo como la de arriba

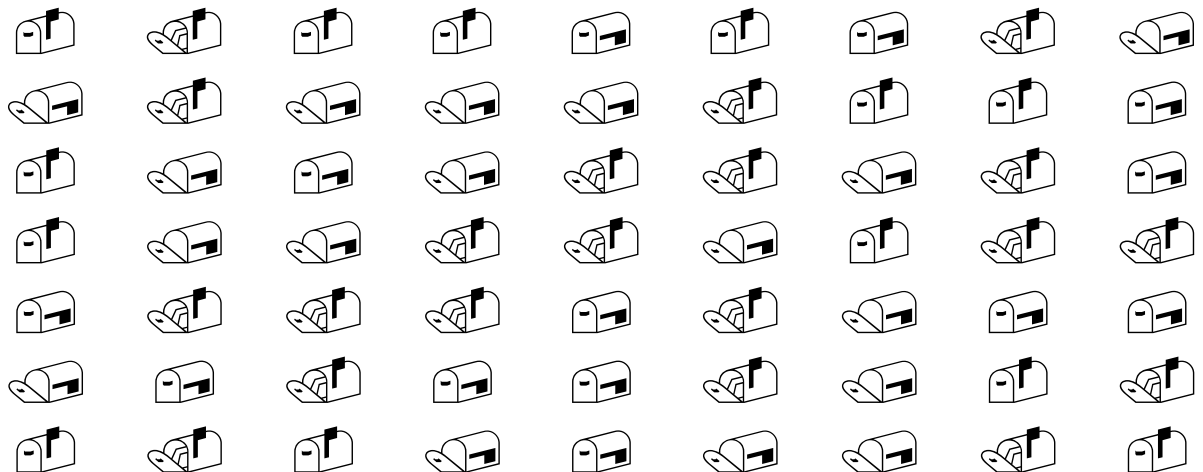
1	0	7	0	3	8	2	3	3	5	0	9
5	3	1	7	6	8	1	1	4	6	7	2
8	7	8	5	7	8	8	2	8	6	1	8
3	6	5	9	6	2	0	2	8	6	5	6

1		7		3	8		3	3		0	
	3		7	6		1		4	6		2
8	7	8			8	8	2			1	
		5	9	6			2	8	6		6

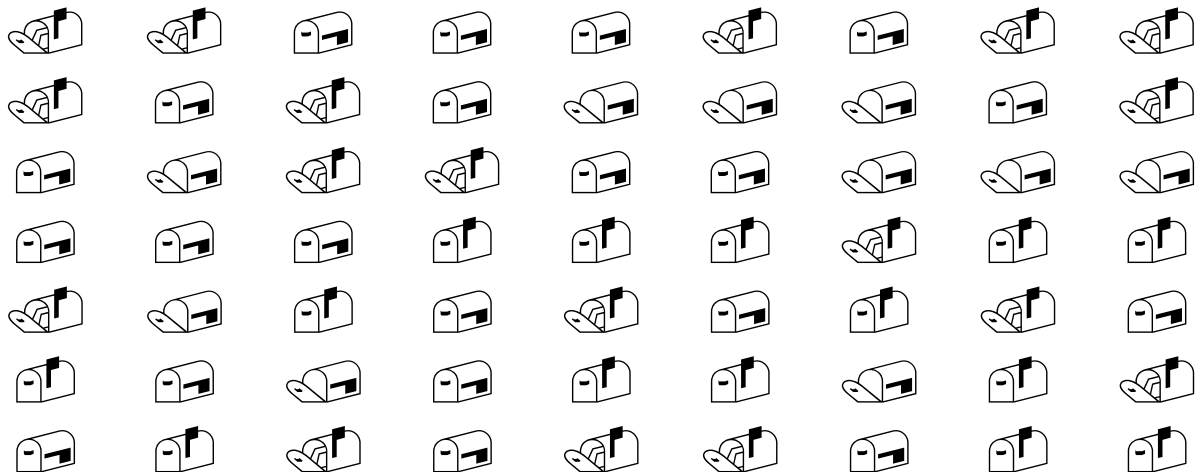
Tacha todas las figuras iguales que la siguiente siguiente:



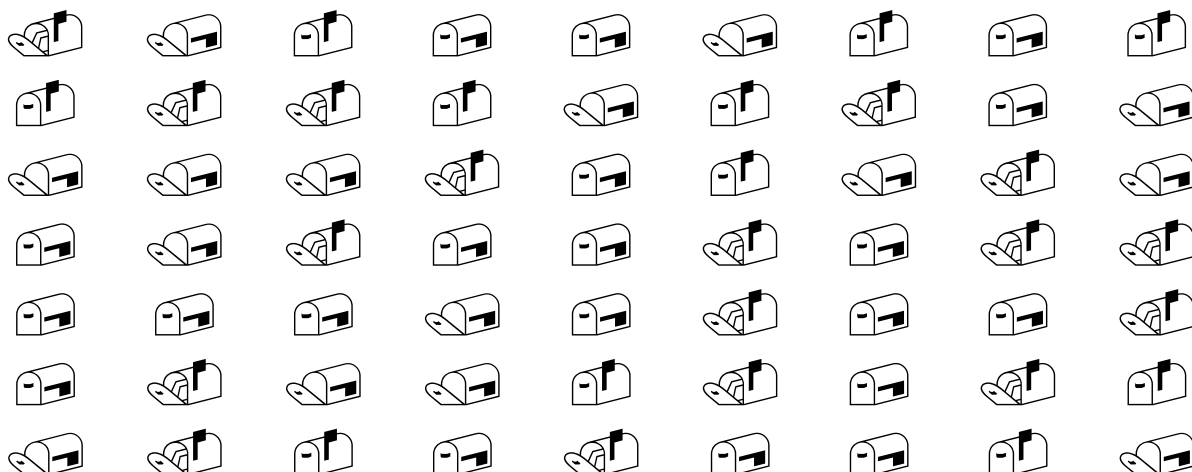
Tacha todas las figuras iguales que la siguiente siguiente:



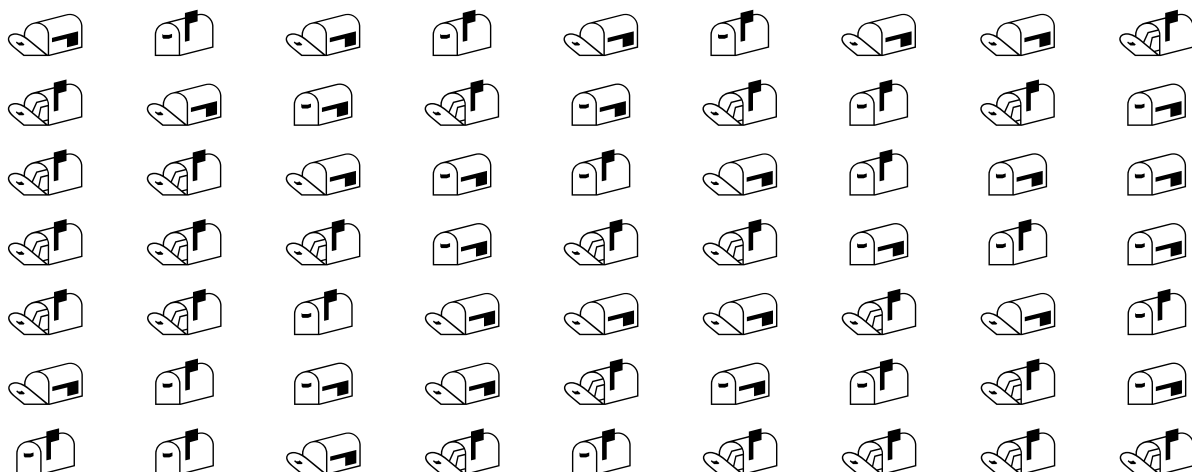
Tacha todas las figuras iguales que la siguiente siguiente:



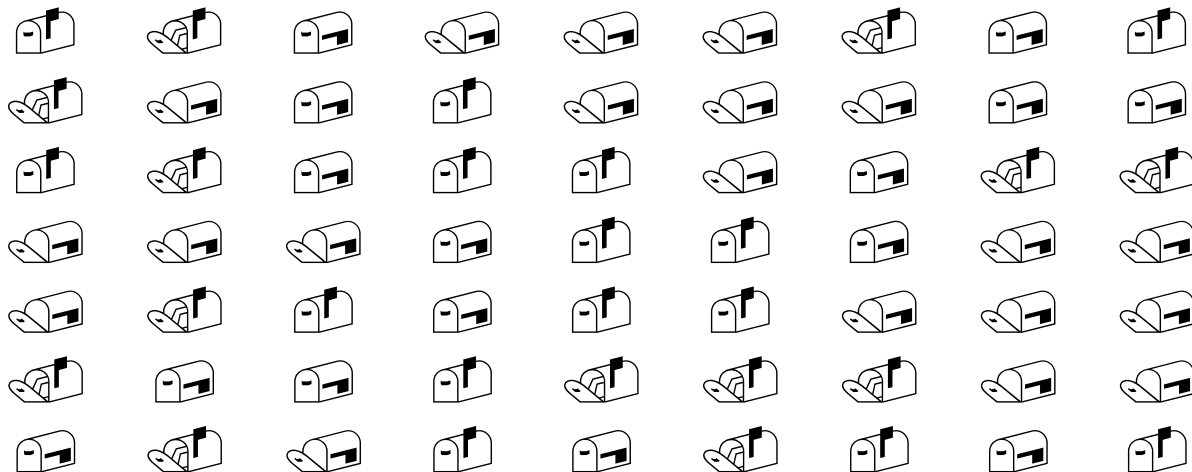
Tacha todas las figuras iguales que la siguiente siguiente:



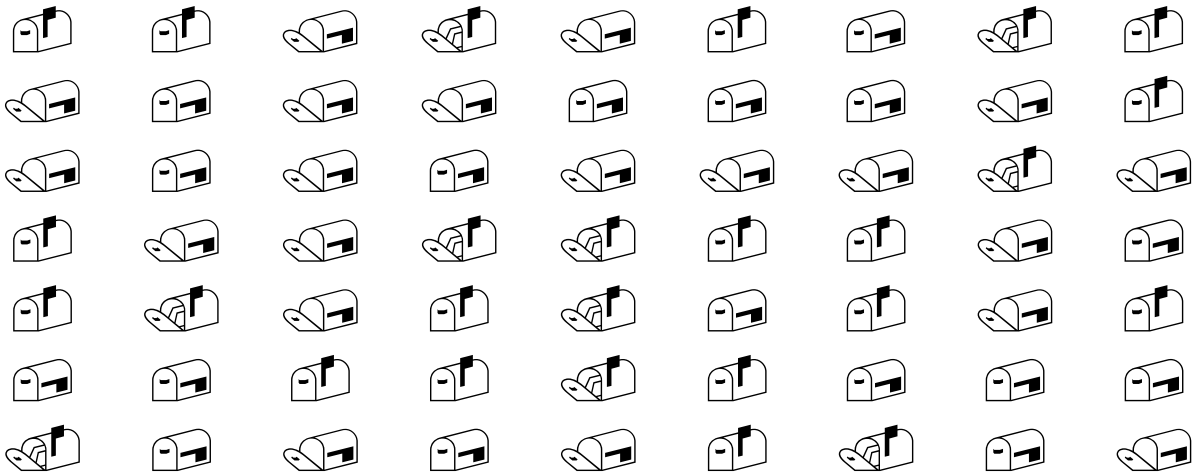
Tacha todas las figuras iguales que la siguiente siguiente:



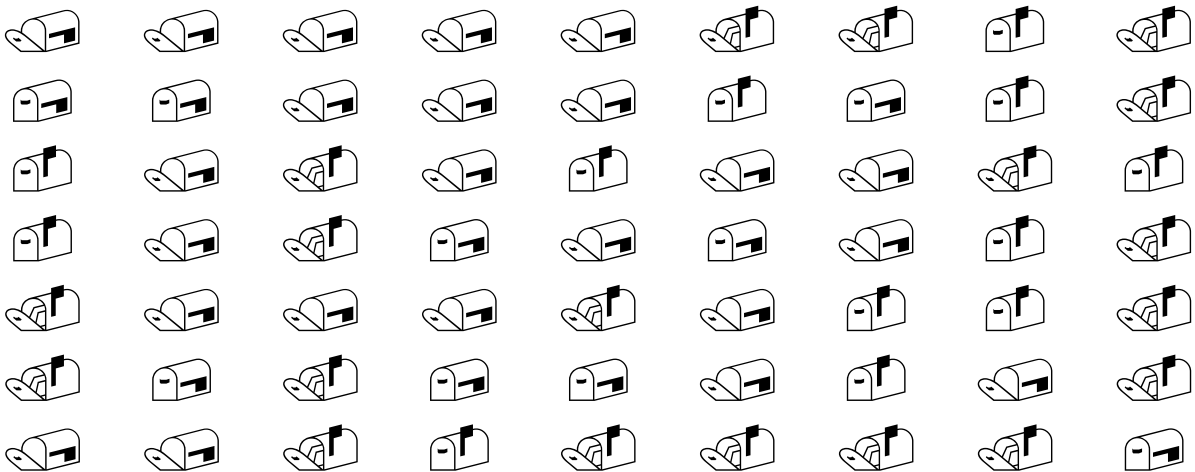
Tacha todas las figuras iguales que la siguiente siguiente:



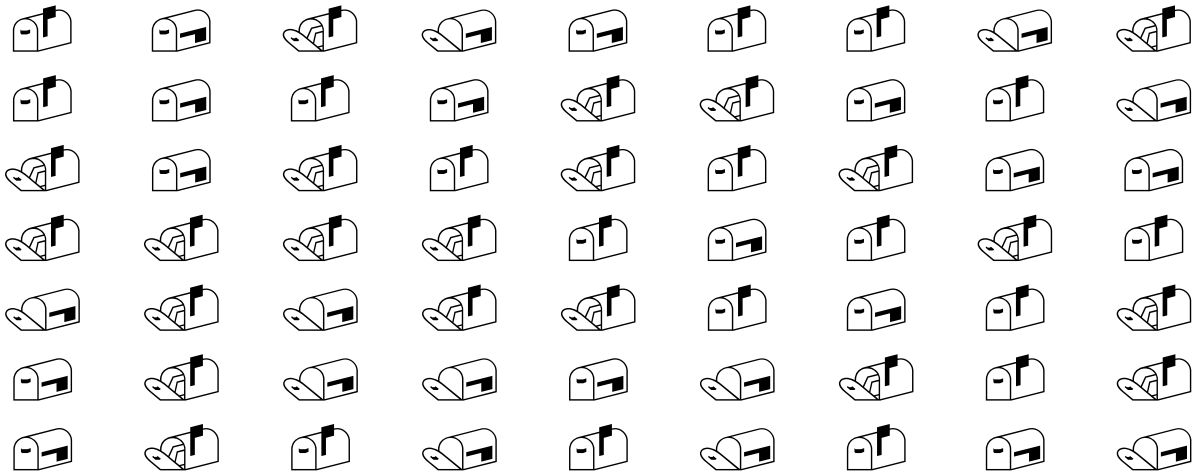
Tacha todas las figuras iguales que la siguiente siguiente:



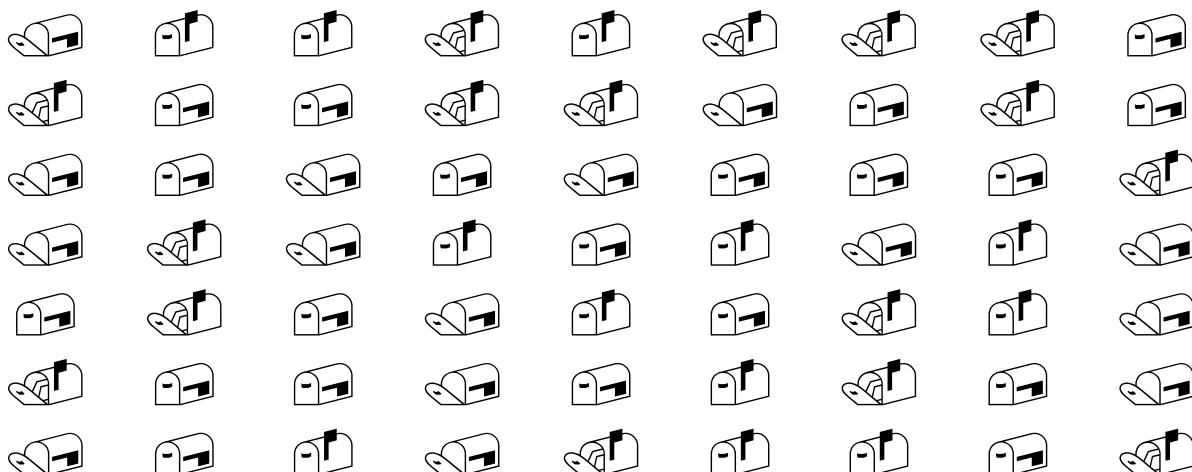
Tacha todas las figuras iguales que la siguiente siguiente:



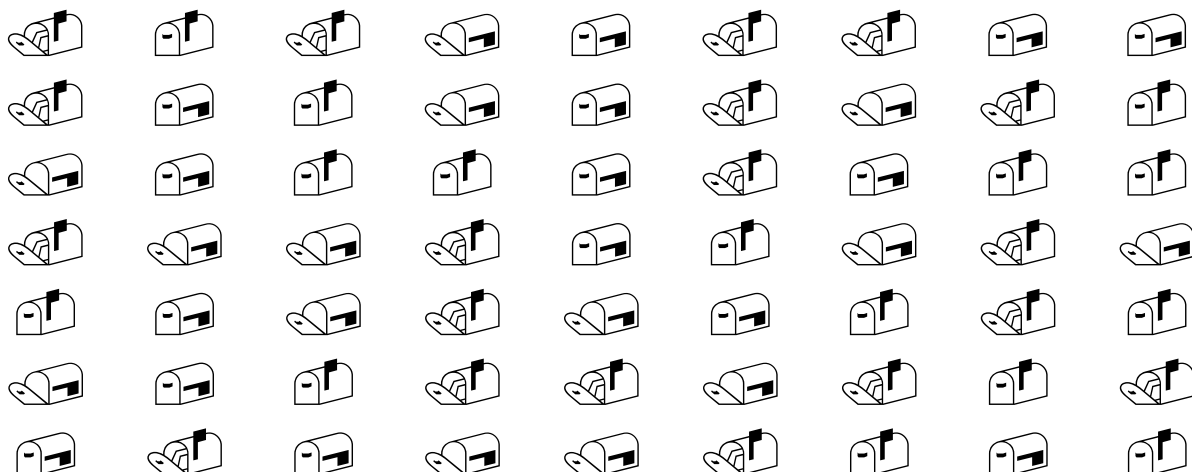
Tacha todas las figuras iguales que la siguiente siguiente:



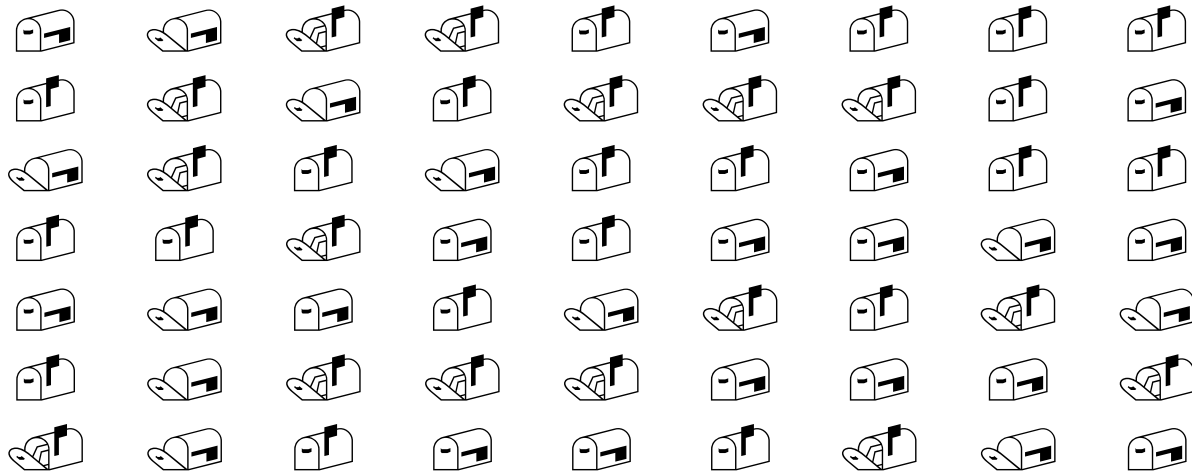
Tacha todas las figuras iguales que la siguiente siguiente:



Tacha todas las figuras iguales que la siguiente siguiente:

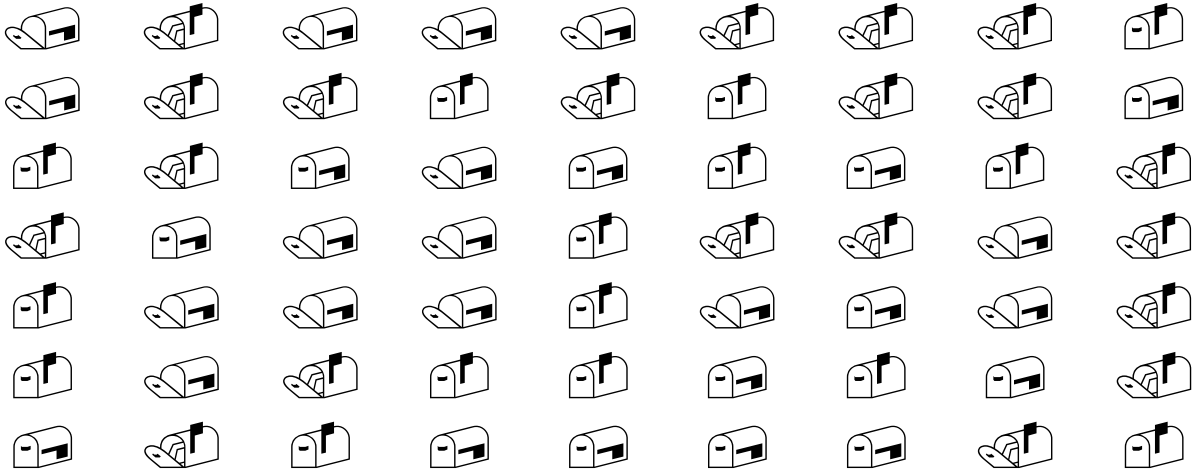


Tacha todas las figuras iguales que la siguiente siguiente:

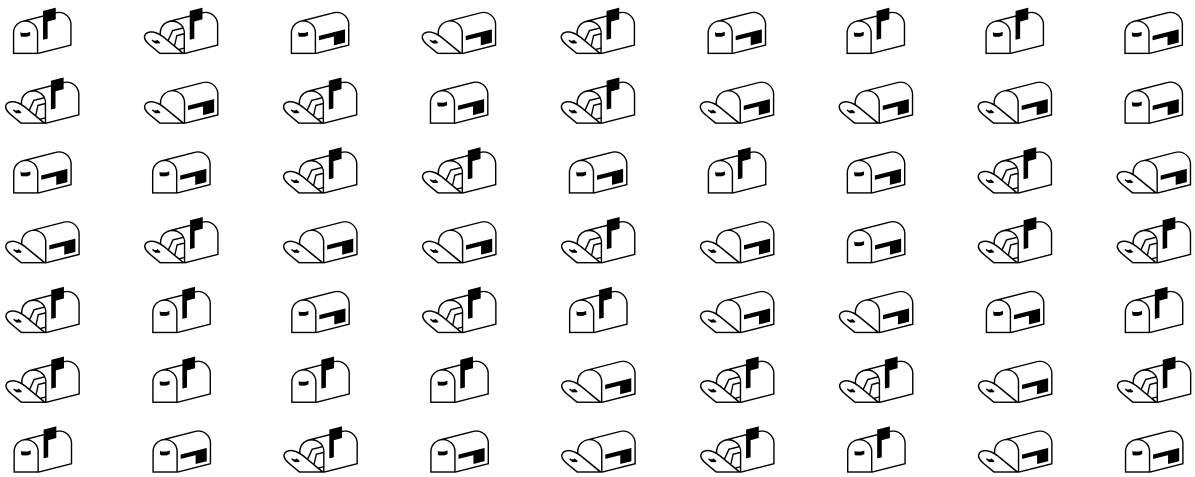




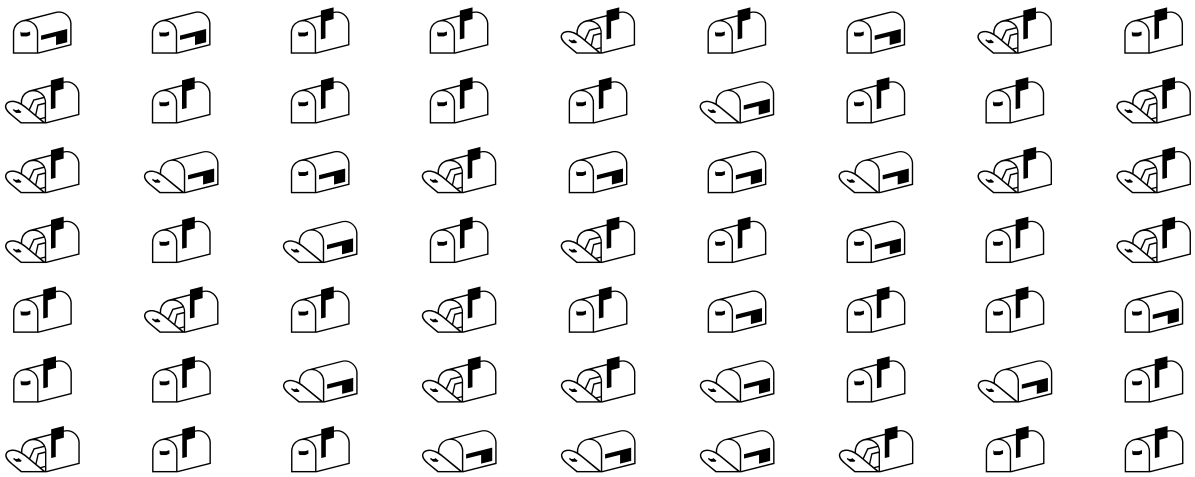
Tacha todas las figuras iguales que la siguiente siguiente:



Tacha todas las figuras iguales que la siguiente siguiente:



Tacha todas las figuras iguales que la siguiente siguiente:



Marca con una cruz los dibujos iguales al modelo


Marca con una cruz los dibujos iguales al modelo


Marca con una cruz los dibujos iguales al modelo


Marca con una cruz los dibujos iguales al modelo


Marca con una cruz los dibujos iguales al modelo


Rodea con un círculo todas las:

**e**

j	k	l	l	e	l	h	h	h	e	h
e	k	i	i	i	f	i	m	f	l	f
i	f	f	j	j	h	g	i	e	i	f
g	n	g	i	m	e	h	l	i	g	i
i	l	f	n	j	n	h	h	j	h	e
k	h	j	j	m	j	m	k	g	i	g
k	n	k	m	n	k	j	n	m	d	f
l	l	i	n	m	h	h	i	h	k	j
g	d	f	l	n	n	f	f	j	k	k
d	k	k	k	j	g	l	d	g	l	g

Rodea con un círculo todas las:

**f**

d	l	h	j	j	g	m	d	k	g	g
l	n	k	h	g	f	e	g	h	e	i
i	e	j	e	g	j	m	i	n	j	g
e	d	g	k	k	g	i	l	l	m	d
i	d	n	j	j	l	k	j	d	h	j
e	d	l	k	f	f	j	j	d	i	h
l	e	f	d	n	f	j	d	i	e	m
m	k	d	d	n	d	m	m	l	l	m
i	e	i	l	g	j	d	k	i	m	l
d	i	g	j	f	e	g	m	e	i	i

Rodea con un círculo todas las:

**g**

h e l k j m d j j j i  
f e i i l k k j h m j  
k g i f i j f i g n j  
l d g e e g n l l h n  
h d f h e m f l e j e  
e d j e j f e g n n h  
n n h k i k i k g f f  
g g g e m f n f n m l  
d k i e j k l l d d j  
d h m k e f e h l h l

Rodea con un círculo todas las:

**h**

j d f i g k m m d f m  
d f m k e f g f h d k  
h j n d f k j e e d n  
h j f k n k h f l e g  
n j m k l n e e j h k  
f g i g h g g m n j n  
f m e g g n m h f j e  
g k n n k f j h m m f  
m e i i k i k i m m e  
f d k l l g m h d m f



Rodea con un círculo todas las:

**i**

j k f l d h l j j l l  
m h d e m i j j h n h  
m g h j g i k l m h m  
k j m f f k j l g j d  
m n h i d m j l n h f  
l f f d l e d g n i i  
j m g k d e h h l g g  
d n l n i j m g i n d  
h g h i f n h e k f j  
i h l h k d m d l f j

Rodea con un círculo todas las:

**j**

n e g h m d i g j n h  
m k l j i g e j d g m  
d m m i i i f g d l m  
m j e f n f d g h i i  
g m h j g l k h j j n  
l k j j i l m d m i j  
l f k e h g f i f j k  
j i m k j e h f g g k  
f i k e n l h e f g f  
f g l n g k e k e j d

Rodea con un círculo todas las:

**k**

g	d	e	f	n	g	m	g	i	j	d
e	i	j	k	e	k	m	g	n	f	d
i	i	e	k	l	e	n	h	f	l	i
j	i	e	h	e	i	k	d	m	k	k
j	j	i	g	h	m	h	e	l	n	j
g	n	f	f	n	h	m	e	f	m	h
n	d	d	f	f	g	j	n	j	n	d
f	i	k	k	j	i	d	n	f	l	f
h	l	k	g	d	g	l	g	f	m	j
j	d	j	l	d	j	e	f	h	d	n

Rodea con un círculo todas las:

**l**

e	j	h	d	h	j	j	i	<b>l</b>	n	m
<b>l</b>	i	m	e	h	h	m	f	g	i	j
<b>l</b>	m	j	j	<b>l</b>	e	k	h	g	<b>l</b>	h
f	e	h	d	k	f	k	<b>l</b>	e	e	i
j	m	h	e	f	h	m	m	j	n	<b>l</b>
g	h	k	n	h	g	h	m	d	n	e
k	k	g	d	e	k	g	h	f	h	k
g	<b>l</b>	k	g	e	e	f	k	d	i	<b>l</b>
m	i	g	d	m	h	k	n	m	f	d
n	h	j	g	h	g	g	f	j	<b>l</b>	j

Rodea con un círculo todas las:

**m**

n	e	f	g	f	j	k	g	m	i	f
e	h	i	l	k	j	m	h	i	k	l
m	n	d	j	l	k	m	n	m	l	k
j	g	n	d	h	h	e	k	g	n	i
m	e	g	d	h	k	k	i	g	f	g
j	l	l	h	f	d	h	i	e	g	d
m	g	n	j	j	g	n	l	j	n	j
g	k	e	f	l	n	k	i	n	n	d
d	g	g	e	k	n	d	k	h	n	h
k	d	f	n	k	k	h	i	i	h	e

Rodea con un círculo todas las:

**n**

h	e	<u>n</u>	l	d	i	d	d	h	g	<u>n</u>
j	l	l	l	e	g	m	k	g	l	i
g	l	<u>n</u>	g	k	k	k	k	l	h	k
m	l	k	j	h	h	l	k	e	l	<u>n</u>
d	j	h	i	h	g	l	l	h	<u>n</u>	e
h	<u>n</u>	d	m	k	i	k	j	h	h	d
g	e	m	l	d	f	m	k	<u>n</u>	k	<u>n</u>
i	m	j	f	e	l	j	f	k	e	h
g	f	f	d	f	h	e	l	f	g	l
e	l	k	j	h	e	f	m	f	h	e

Escribe una X encima de cada cuadrado que tenga un 3

	2		2		3		4		1		3		2		1		4		4
		3		3		2		3		1		1		1		4		3	
	4		2		2		4		2		3		4		4		3		4
		2		1		1		2		2		4		2		1		3	
	2		3		3		1		3		2		3		4		2		2
		1		4		3		4		2		1		4		1		4	
	1		3		1		3		1		2		4		3		4		4
		4		3		3		4		2		1		3		2		2	
	3		1		3		2		3		4		2		2		1		3

Escribe una X debajo de cada cuadrado que tenga un 2

	2		2		2		1		4		4		3		3		3		3
		4		3		1		2		4		1		1		4		1	
	4		1		3		1		1		1		3		2		2		1
		4		3		2		3		3		4		3		2		2	
	2		3		4		3		1		2		2		4		4		4
		3		3		3		2		4		2		3		1		2	
	3		1		4		3		3		3		3		1		3		3
		3		2		3		2		4		1		3		2		1	
	3		2		1		4		3		1		1		2		4		4

Escribe una X a la derecha de cada cuadrado que tenga un 1

	2		2		3		3		4		1		4		4		2		3
		3		2		1		2		2		4		3		1		3	
	2		2		2		3		2		4		1		1		1		4
		2		3		1		1		3		1		1		3		1	
	2		2		1		3		4		3		4		1		1		1
		2		1		3		4		3		4		1		4		4	
	3		2		2		3		1		1		4		3		3		2
		1		1		3		4		3		1		4		2		1	
	2		4		4		2		1		4		2		1		1		2

Escribe una X a la derecha de cada cuadrado que tenga un 3

	4		1		2		3		2		2		2		1		4		3
		2		3		1		3		2		2		1		4		2	
	4		1		3		3		4		2		2		2		4		1
		3		2		1		4		3		1		1		4		3	
	4		1		2		3		3		3		4		3		4		2
		1		1		2		2		3		2		1		2		1	
	2		4		2		4		4		2		2		2		1		1
		2		3		3		1		2		3		1		4		3	
	2		1		4		1		2		3		2		1		3		4

Escribe una X a la izquierda de cada cuadrado que tenga un 2

	2		2		3		1		3		4		1		2		3		3
		2		2		2		2		3		2		2		3		4	
	4		4		4		1		3		2		1		2		1		3
		4		2		1		4		4		4		3		2		4	
	2		4		2		4		1		2		4		1		4		1
		4		4		4		4		3		1		1		4		2	
	2		3		3		3		2		3		4		3		4		3
		1		4		2		3		2		1		1		3		3	
	4		1		1		3		3		3		4		2		3		2

Escribe una X encima de cada cuadrado que tenga un 1

	4		3		3		4		2		2		1		2		1		3
		2		3		3		3		2		2		1		4		3	
	1		4		2		3		3		4		1		2		2		3
		1		4		1		2		2		4		4		2		3	
	3		4		4		2		4		3		1		4		2		4
		1		3		3		1		3		3		1		4		1	
	1		3		1		1		1		3		3		4		4		2
		4		4		1		3		3		4		1		4		3	
	2		4		1		3		2		1		3		4		1		4

Escribe una X encima de cada cuadrito que tenga un 3

	3		2		4		4		3		1		1		4		3		4
		4		3		4		1		4		3		2		2		2	
	1		4		3		2		4		1		1		4		1		4
		4		1		1		2		4		1		4		1		1	
	1		4		1		3		1		4		1		4		2		4
		1		1		2		1		3		3		3		3		4	
	1		2		1		1		2		2		2		3		1		2
		3		1		1		3		3		4		3		1		3	
	1		2		4		4		1		4		4		3		4		2

Escribe una X debajo de cada cuadrito que tenga un 2

	2		4		1		3		2		4		2		3		1		1
		3		2		4		1		1		3		2		3		3	
	4		3		2		2		2		2		1		2		4		3
		4		2		2		1		2		4		2		3		4	
	4		4		2		4		1		3		4		1		3		1
		2		4		1		4		3		2		4		1		1	
	3		4		3		4		3		3		3		4		2		3
		4		2		3		2		4		4		1		2		2	
	4		2		3		3		4		4		4		1		3		2

Escribe una X a la derecha de cada cuadrito que tenga un 1

	4		1		4		2		4		4		4		2		3		2
		3		2		2		2		2		4		1		2		1	
	2		1		1		4		2		3		2		3		3		1
		3		3		2		3		3		3		1		4		3	
	1		1		2		1		3		1		2		4		3		4
		2		3		1		1		1		1		3		4		4	
	2		1		3		1		1		4		3		4		1		2
		2		1		1		2		4		4		1		4		3	
	1		3		3		2		3		1		4		4		1		4

Escribe una X a la derecha de cada cuadrado que tenga un 3

	1		3		4		4		4		2		1		4		4		2
		3		4		4		2		4		4		1		2			
	2		4		3		4		2		4		1		3		4		2
		1		4		4		1		3		1		3		2		4	
	1		3		2		4		2		3		1		2		1		3
		2		1		2		2		3		3		2		1		1	
	3		1		4		3		4		3		2		3		3		4
		3		2		4		3		2		3		1		3		2	
	4		1		3		4		2		2		1		1		4		4

Escribe una X a la izquierda de cada cuadrado que tenga un 2

	3		1		3		3		1		2		2		2		3		3
		2		4		4		1		4		2		4		2		1	
	3		2		1		4		2		2		4		1		1		3
		4		4		3		3		1		4		1		3		3	
	3		3		4		1		2		3		3		1		2		3
		1		2		2		2		2		4		4		3		3	
	4		3		2		3		3		3		3		3		4		1
		2		2		4		2		3		1		2		4		3	
	1		1		3		3		1		4		3		1		2		2

Escribe una X encima de cada cuadrado que tenga un 1

	4		3		3		1		2		4		1		4		3		2
		2		4		1		4		4		1		3		3		4	
	3		1		2		1		2		4		3		4		1		2
		1		2		3		3		4		4		3		3		1	
	3		3		1		2		3		2		1		1		1		3
		1		3		4		4		1		2		3		3		3	
	2		4		2		3		4		2		4		4		2		1
		3		1		2		3		1		2		2		4		2	
	1		2		3		3		2		2		3		1		1		2

Escribe una X encima de cada cuadrado que tenga un 3

	2		4		3		1		4		2		2		1		4		1
		3		1		2		4		4		3		1		4		1	
	1		4		1		1		3		3		1		2		1		2
		4		1		3		1		4		4		3		3		2	
	2		2		2		3		1		4		2		2		3		3
		1		4		1		1		1		3		4		1		1	
	3		2		2		3		2		3		1		4		3		4
		3		4		2		1		3		1		4		1		2	
	2		3		4		3		3		2		4		3		3		1

Escribe una X debajo de cada cuadrado que tenga un 2

	4		4		1		3		2		3		2		4		3		4
		1		4		3		2		3		1		3		2		4	
	4		2		4		2		2		3		2		4		1		4
		1		1		2		1		2		4		1		2		2	
	3		2		4		4		3		3		4		4		1		3
		2		2		3		3		1		1		2		2		1	
	2		2		1		4		1		4		1		3		1		3
		4		3		4		2		1		4		3		3		2	
	1		4		1		3		1		3		2		4		1		4

Escribe una X a la derecha de cada cuadrado que tenga un 1

	3		2		3		1		2		4		4		1		2		4
		4		4		1		3		4		1		1		4		1	
	2		3		1		1		4		1		2		4		3		2
		4		2		3		2		3		1		4		2		1	
	4		3		3		1		1		4		3		4		4		2
		4		4		2		3		1		4		2		2		2	
	3		1		4		3		4		3		3		4		3		4
		1		1		3		2		3		2		4		2		1	
	1		3		4		1		4		2		1		4		1		1



Escribe en el recuadro que hay después de la flecha el número más grande

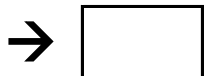
42	16	31	31
20	28	26	34
40	17	34	28



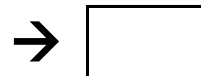
20	33	38	38
43	54	30	46
48	53	45	52



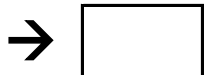
56	66	35	48
50	59	37	66
57	36	42	41



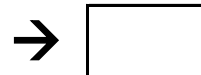
41	26	29	50
40	12	12	16
18	42	27	31



43	35	13	30
15	32	38	13
46	38	13	30



28	22	25	56
28	26	57	28
26	59	45	47



39	62	33	54
70	45	60	53
52	45	62	32



43	28	23	47
48	16	13	33
10	13	21	28




21	39	34	32
14	20	17	49
34	35	47	17




31	49	60	31
29	35	38	37
21	54	31	41



65	55	42	61
57	43	40	62
56	50	56	61



17	17	37	36
34	25	36	48
33	24	22	22



Escribe en el recuadro que hay después de la flecha el número más pequeño

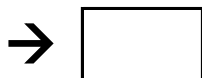
40	47	41	31
20	15	39	46
28	50	26	50



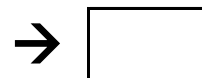
53	24	26	51
36	38	27	40
52	23	56	41



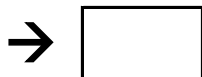
63	46	65	46
55	45	62	57
46	50	48	68



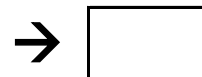
21	17	28	43
43	15	25	18
37	38	16	37



34	30	13	46
47	28	18	36
36	39	30	35




36	43	44	28
54	33	45	34
47	46	58	28




52	42	69	70
48	52	38	55
39	45	30	37



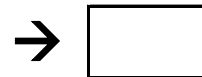
28	48	21	47
38	26	25	13
45	41	19	30




32	35	29	35
25	21	14	16
10	16	30	35




39	32	58	56
20	48	58	53
31	36	21	52



35	51	46	55
40	42	39	50
57	56	64	46



37	18	30	10
31	31	33	32
35	15	32	13




Escribe en el recuadro que hay después de la flecha el número más grande

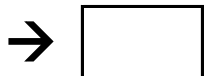
35	23	47	15
35	34	32	11
23	49	20	44



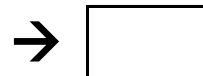
29	30	59	47
54	21	39	45
39	58	41	38



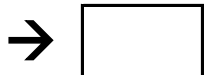
35	67	64	47
57	63	60	68
35	47	70	34



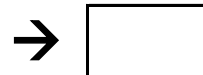
12	34	14	26
24	35	50	14
32	14	43	18



50	43	18	25
31	50	32	44
50	10	25	31



41	23	55	48
58	56	34	45
34	22	50	29



66	65	58	42
51	42	67	30
50	52	46	41



15	43	30	11
50	32	40	48
21	50	17	45



21	46	50	23
19	17	13	22
16	10	34	34



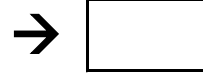
60	32	36	28
48	47	40	52
48	24	56	23



39	42	70	48
58	62	50	66
62	39	59	69



46	47	29	29
38	23	46	40
38	23	49	15




Escribe en el recuadro que hay después de la flecha el número más pequeño

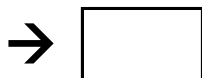
37	20	21	19
37	50	15	40
12	39	17	19



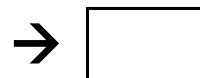
42	39	35	35
55	23	26	26
21	31	29	37



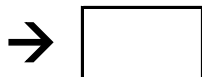
66	37	44	36
36	59	45	44
39	41	45	40



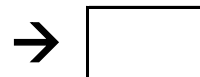
38	34	12	13
18	43	27	46
48	28	37	35



46	50	21	41
32	50	35	48
45	27	40	48




45	22	41	54
40	51	32	35
58	57	57	22




47	55	47	38
52	51	39	53
69	30	40	33



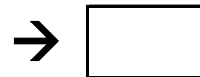
36	50	21	14
42	43	48	48
32	11	44	33




20	31	25	45
19	50	25	47
33	16	46	50



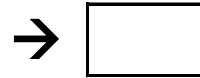
58	33	27	60
26	28	30	30
40	40	24	39



68	32	51	67
45	56	45	50
39	35	64	57



26	39	18	37
42	25	23	17
40	31	17	33




Escribe en el recuadro que hay después de la flecha el número más grande

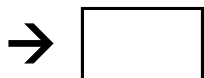
20	36	10	41
18	31	33	38
41	14	14	39



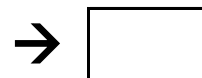
39	31	46	30
33	60	35	20
55	31	53	27



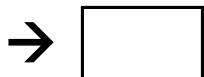
39	33	66	51
62	32	60	60
41	51	69	65



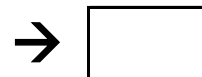
43	14	27	27
28	34	26	31
45	32	29	21



35	27	14	32
26	49	20	13
42	16	14	36



44	25	35	51
21	46	22	37
40	34	44	36




47	49	43	37
66	38	48	58
39	67	31	55



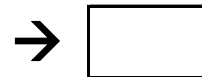
39	48	30	13
21	37	47	21
45	46	16	47




22	43	47	12
40	21	12	49
24	13	18	37



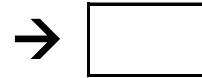
27	24	60	23
24	28	56	55
59	46	60	37



63	69	60	35
44	39	31	59
39	40	42	37



37	42	13	27
15	38	34	41
43	21	13	26



51	→	A6	96	→	F1	96	→	I7	67	→	D7	47	→	A10
85	→	G10	29	→	E10	73	→	C3	13	→	G1	37	→	A11
61	→	A10	40	→	D3	74	→	H11	39	→	A11	55	→	A8
52	→	C2	92	→	B5	15	→	A4	61	→	H3	19	→	B9
79	→	D8	22	→	G5	29	→	I5	52	→	D8	51	→	B2

	1	2	3	4	5	6	7	8	9	10	11	9	10	11
A														
B														
C														
D														
E														
F														
G														
H														
I														

42	→	G2	15	→	E5	61	→	H7	17	→	G3	75	→	F4
25	→	A5	11	→	G5	75	→	E10	74	→	H6	26	→	I9
27	→	D9	45	→	A8	57	→	D7	68	→	D3	87	→	E1
28	→	F3	26	→	F1	92	→	B11	42	→	I7	56	→	H9
11	→	H5	17	→	E8	98	→	C8	22	→	G11	63	→	B1

	1	2	3	4	5	6	7	8	9	10	11	9	10	11
A														
B														
C														
D														
E														
F														
G														
H														
I														

31	→	D8	24	→	A11	78	→	C2	92	→	B3	23	→	A4
30	→	G10	17	→	G2	20	→	G10	24	→	D5	90	→	G8
81	→	B1	36	→	A7	91	→	G4	21	→	C3	44	→	H11
94	→	C4	76	→	B10	20	→	I11	60	→	D9	41	→	F4
23	→	G8	40	→	B7	58	→	D3	45	→	F4	43	→	A4

	1	2	3	4	5	6	7	8	9	10	11	9	10	11
A														
B														
C														
D														
E														
F														
G														
H														
I														

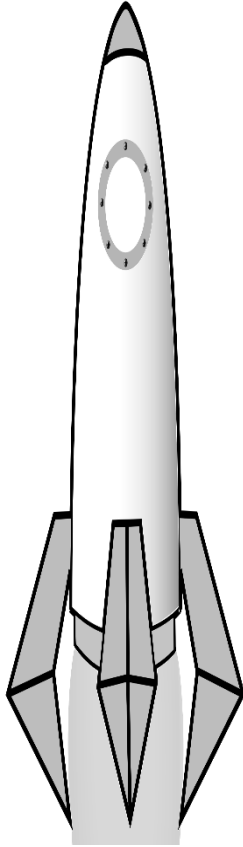


20	→	E5	28	→	C5	59	→	D2	81	→	H6	15	→	B9
87	→	E1	40	→	D2	12	→	D1	93	→	F3	72	→	I6
42	→	C9	24	→	B8	28	→	F6	71	→	B1	93	→	H2
80	→	B5	58	→	I11	19	→	G2	34	→	F10	88	→	H11
43	→	B6	63	→	E7	39	→	E10	99	→	F1	70	→	C1

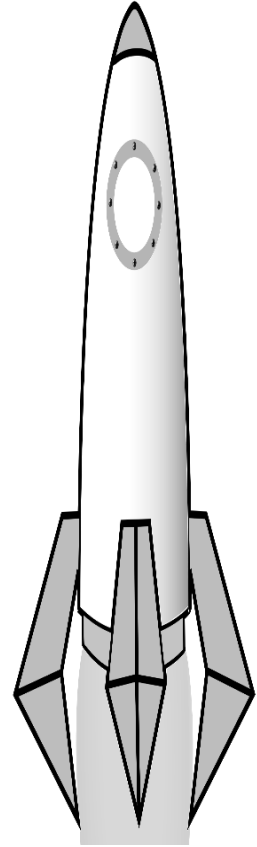
	1	2	3	4	5	6	7	8	9	10	11	9	10	11
A														
B														
C														
D														
E														
F														
G														
H														
I														

15 → B1	66 → C8	59 → D10	87 → E5	67 → F5
39 → D11	16 → C7	15 → F9	49 → G8	34 → C2
32 → B4	63 → I10	26 → H6	85 → E11	31 → A3
25 → A9	96 → B2	17 → D3	79 → F6	26 → I5
58 → A7	97 → C4	40 → I10	66 → G8	21 → E11

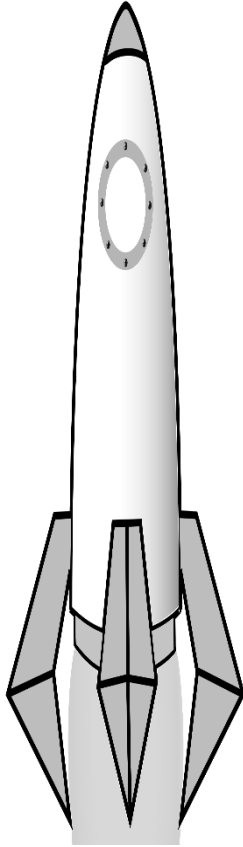
	1	2	3	4	5	6	7	8	9	10	11	9	10	11
A														
B														
C														
D														
E														
F														
G														
H														
I														



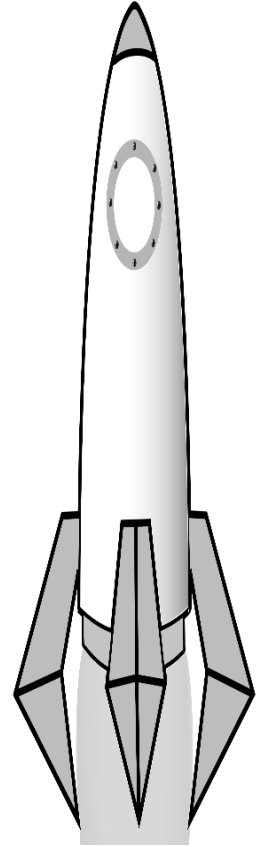
Escribe un 4 en la casilla G5  
Escribe un 6 en la casilla D7  
Escribe un 1 en la casilla C1  
Escribe un 5 en la casilla D2  
Escribe un 2 en la casilla F5  
Escribe un 1 en la casilla H7  
Escribe un 7 en la casilla H1  
Escribe un 9 en la casilla E2  
Escribe un 8 en la casilla A6  
Escribe un 3 en la casilla B10  
Escribe un 3 en la casilla C1  
Escribe un 9 en la casilla B2  
Escribe un 1 en la casilla A1  
Escribe un 7 en la casilla G7  
Escribe un 6 en la casilla I9  
Escribe un 2 en la casilla J8



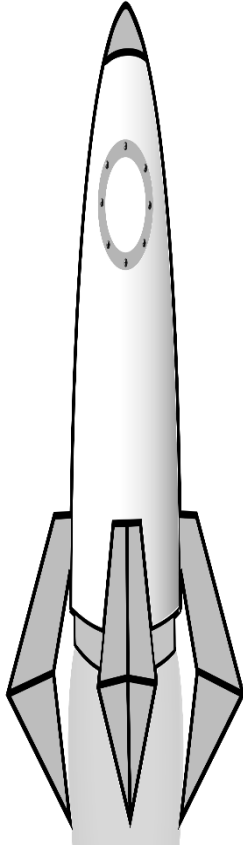
10										
9										
8										
7										
6										
5										
4										
3										
2										
1										
	A	B	C	D	E	F	G	H	I	J



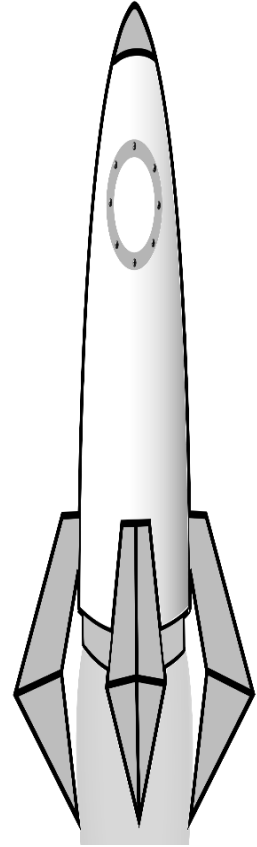
Escribe un 7 en la casilla H3  
Escribe un 1 en la casilla H2  
Escribe un 8 en la casilla A3  
Escribe un 3 en la casilla H8  
Escribe un 1 en la casilla A10  
Escribe un 1 en la casilla E5  
Escribe un 7 en la casilla I6  
Escribe un 3 en la casilla A6  
Escribe un 9 en la casilla I9  
Escribe un 1 en la casilla H10  
Escribe un 4 en la casilla C2  
Escribe un 7 en la casilla J3  
Escribe un 2 en la casilla G4  
Escribe un 5 en la casilla I1  
Escribe un 4 en la casilla J1  
Escribe un 6 en la casilla C7



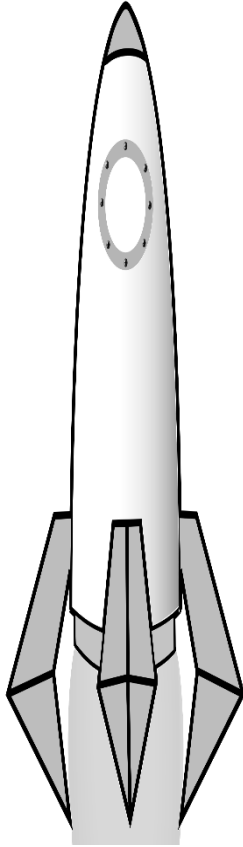
10										
9										
8										
7										
6										
5										
4										
3										
2										
1										
	A	B	C	D	E	F	G	H	I	J



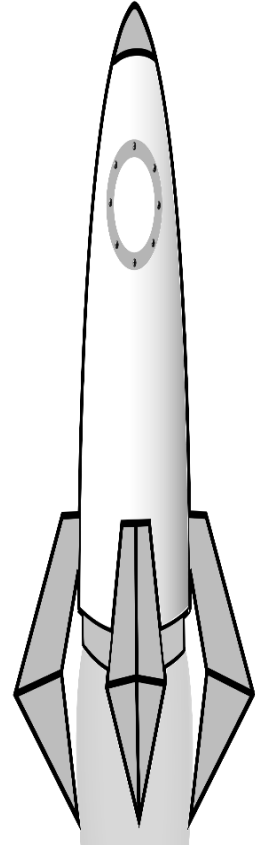
Escribe un 1 en la casilla G1  
Escribe un 5 en la casilla C6  
Escribe un 9 en la casilla G4  
Escribe un 1 en la casilla D1  
Escribe un 7 en la casilla C7  
Escribe un 9 en la casilla F8  
Escribe un 8 en la casilla G4  
Escribe un 1 en la casilla D8  
Escribe un 1 en la casilla F9  
Escribe un 3 en la casilla E10  
Escribe un 5 en la casilla H1  
Escribe un 9 en la casilla F7  
Escribe un 2 en la casilla H1  
Escribe un 3 en la casilla J9  
Escribe un 4 en la casilla C3  
Escribe un 4 en la casilla F7



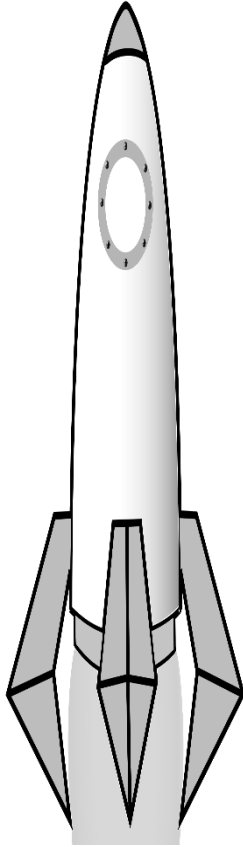
10										
9										
8										
7										
6										
5										
4										
3										
2										
1										
	A	B	C	D	E	F	G	H	I	J



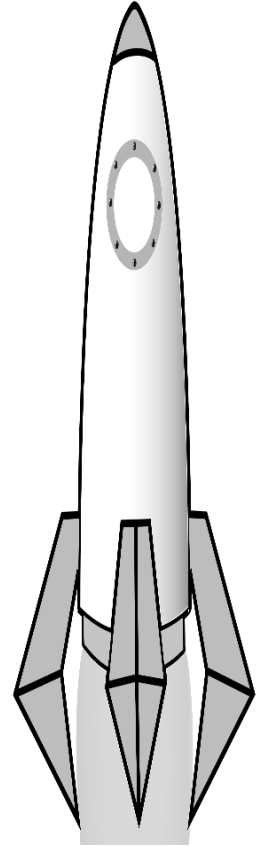
Escribe un 1 en la casilla C5  
Escribe un 8 en la casilla I6  
Escribe un 5 en la casilla H7  
Escribe un 8 en la casilla B7  
Escribe un 9 en la casilla B3  
Escribe un 7 en la casilla A7  
Escribe un 1 en la casilla I5  
Escribe un 8 en la casilla J3  
Escribe un 2 en la casilla G2  
Escribe un 6 en la casilla C10  
Escribe un 5 en la casilla G6  
Escribe un 3 en la casilla A2  
Escribe un 9 en la casilla I5  
Escribe un 8 en la casilla F5  
Escribe un 8 en la casilla A10  
Escribe un 7 en la casilla J8




10										
9										
8										
7										
6										
5										
4										
3										
2										
1										
	A	B	C	D	E	F	G	H	I	J



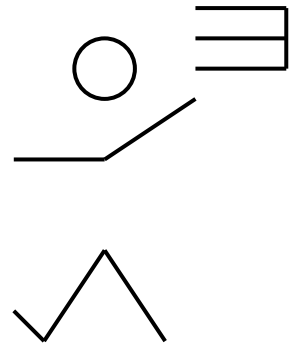
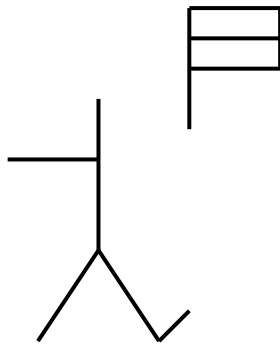

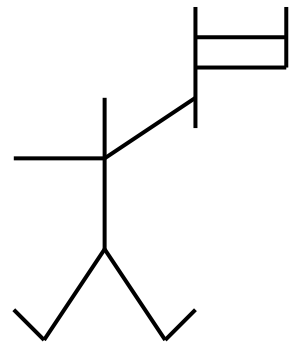



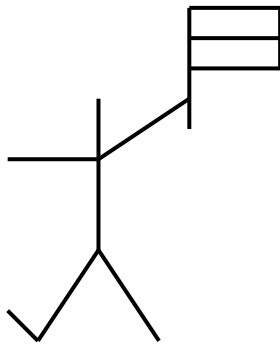

Escribe un 4 en la casilla H3  
Escribe un 9 en la casilla H5  
Escribe un 1 en la casilla A3  
Escribe un 2 en la casilla E9  
Escribe un 5 en la casilla B7  
Escribe un 7 en la casilla E8  
Escribe un 3 en la casilla G5  
Escribe un 5 en la casilla C3  
Escribe un 1 en la casilla J5  
Escribe un 1 en la casilla B4  
Escribe un 6 en la casilla I9  
Escribe un 2 en la casilla E4  
Escribe un 6 en la casilla C8  
Escribe un 1 en la casilla J5  
Escribe un 7 en la casilla C8  
Escribe un 7 en la casilla C6



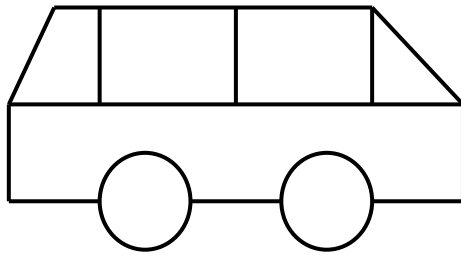
10										
9										
8										
7										
6										
5										
4										
3										
2										
1										
	A	B	C	D	E	F	G	H	I	J



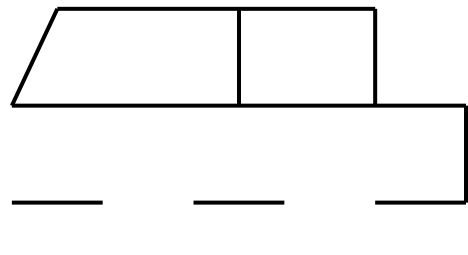
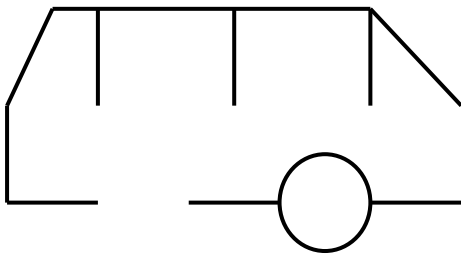
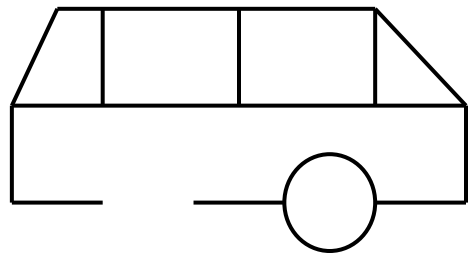
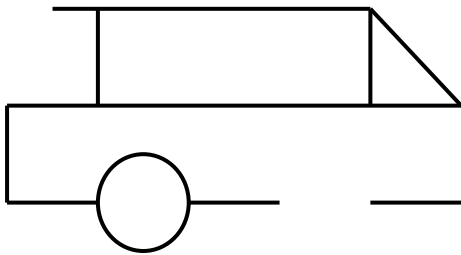
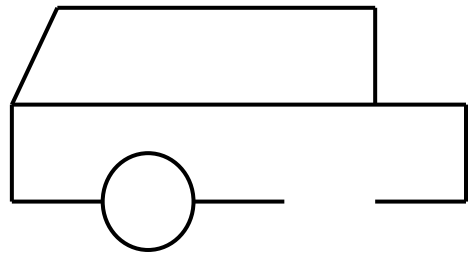
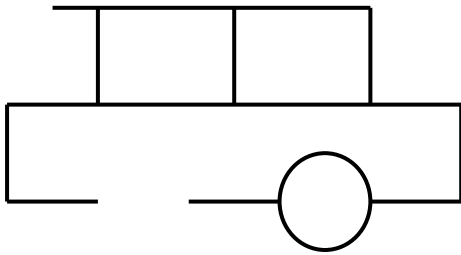
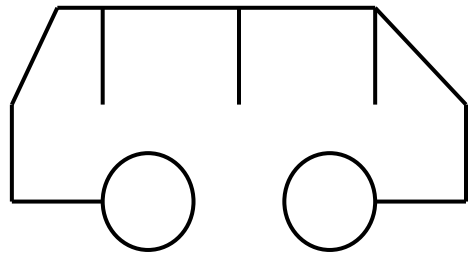
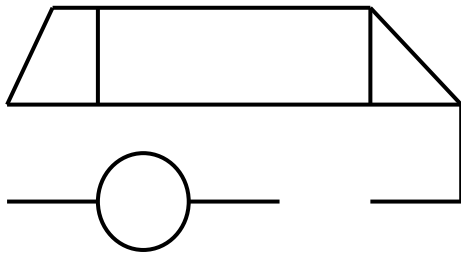
Completa las figuras como la de arriba:

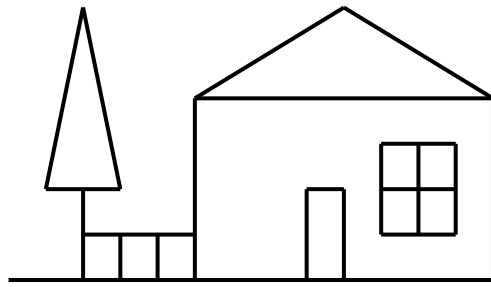




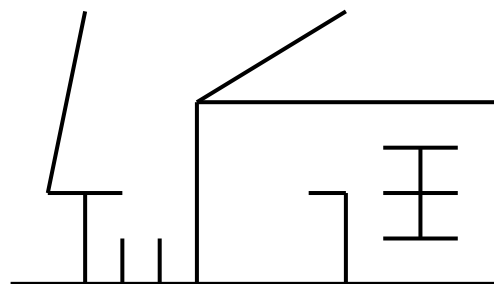
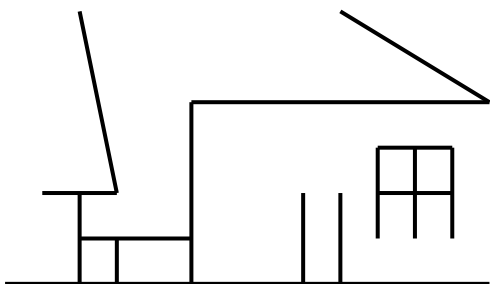
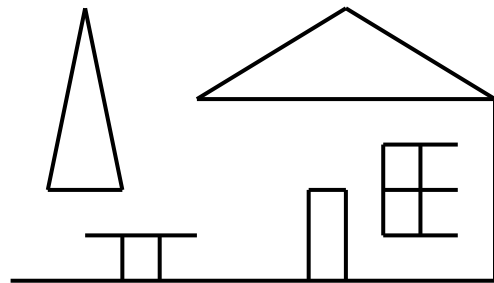
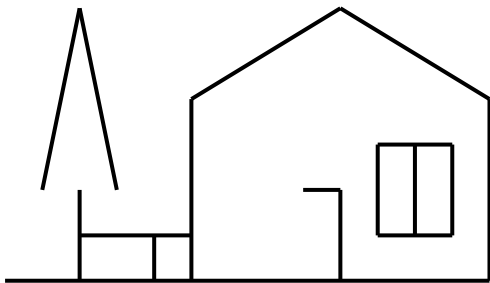
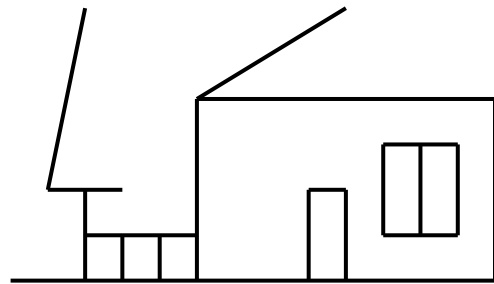
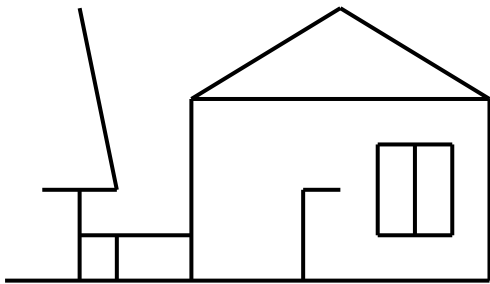



Completa las figuras como la de arriba:








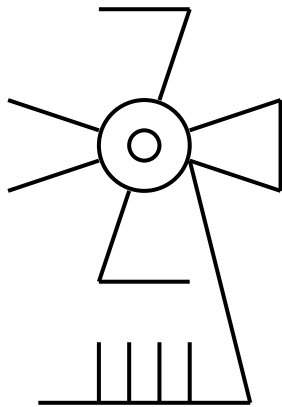

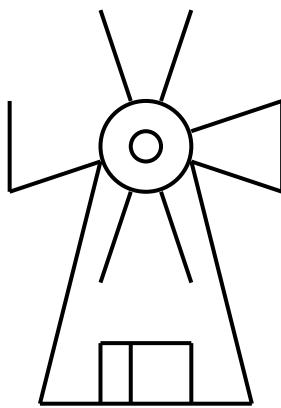




Completa las figuras como la de arriba:





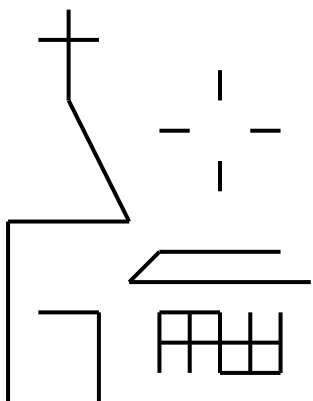
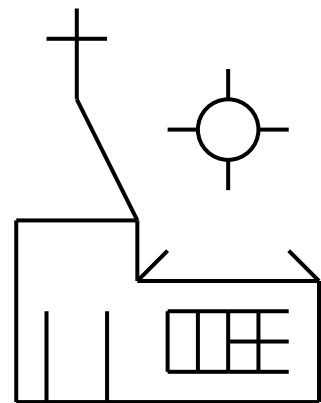
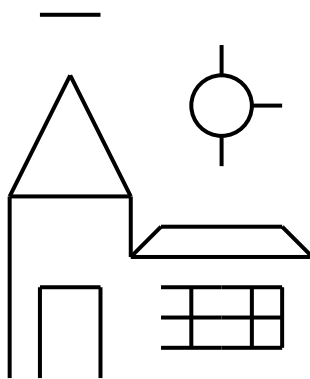
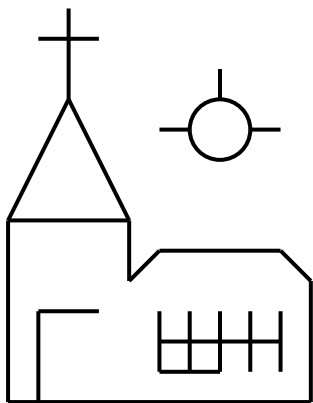
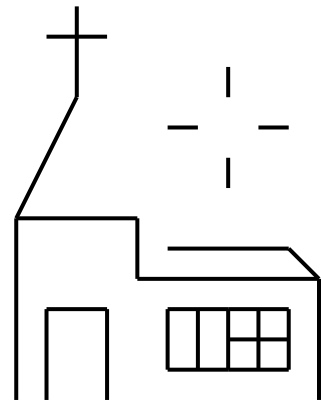
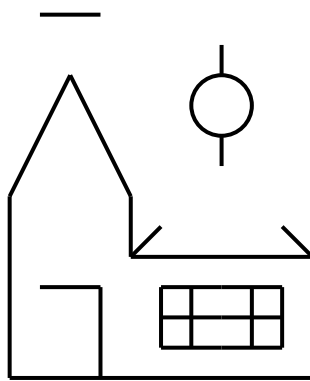




Completa las figuras como la de arriba:



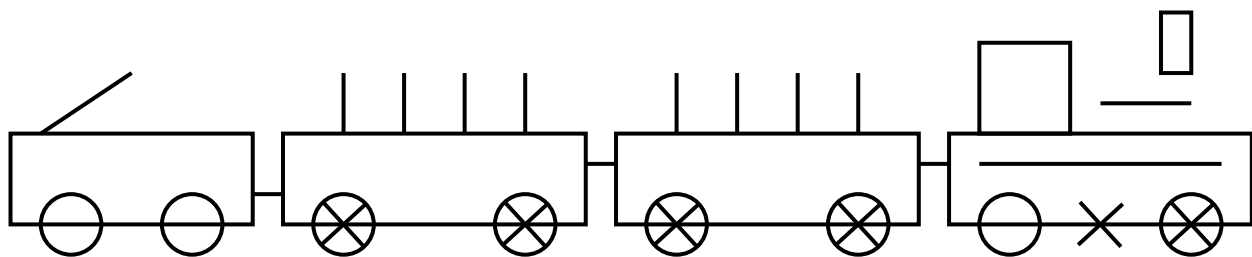
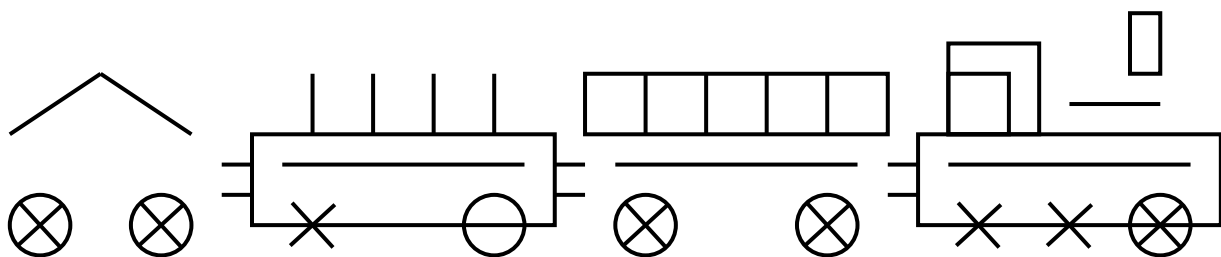
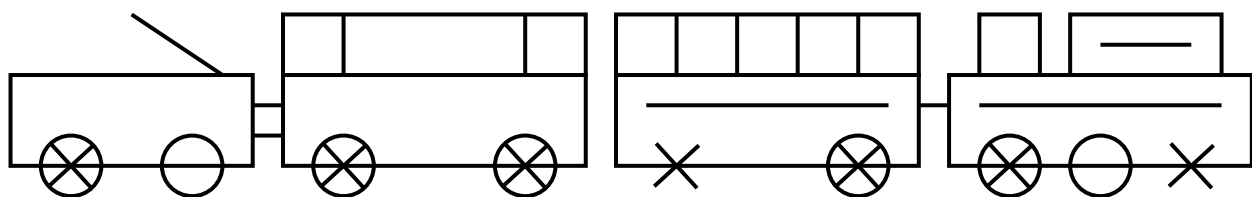



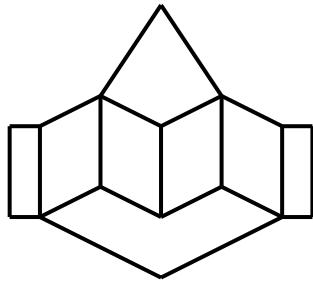
Completa las figuras como la de arriba:



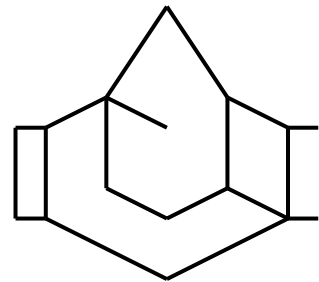
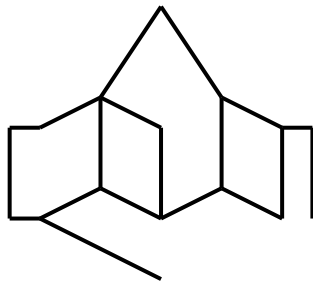
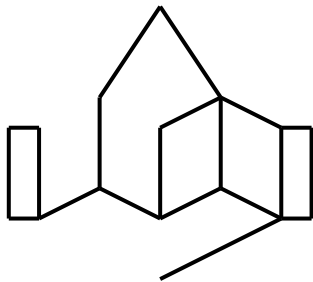
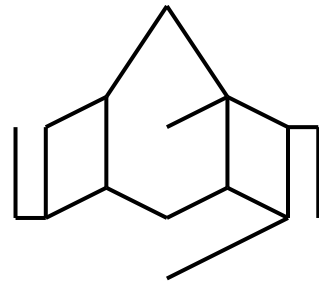
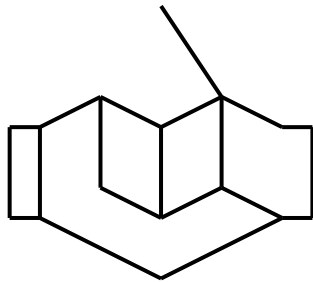
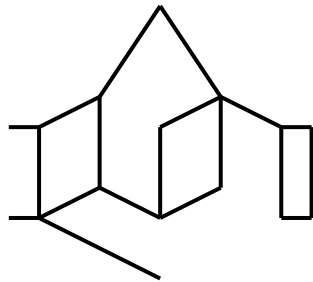
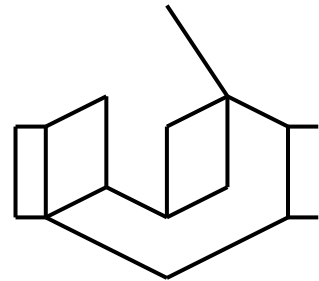
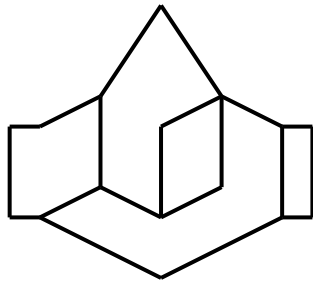
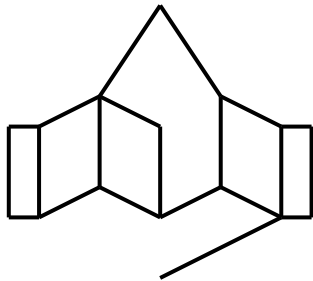


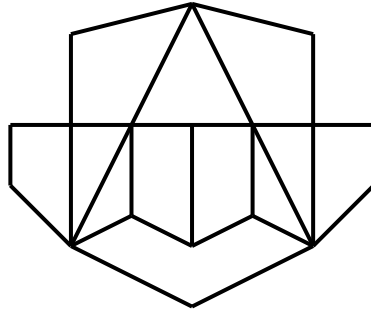
Completa las figuras como la de arriba:



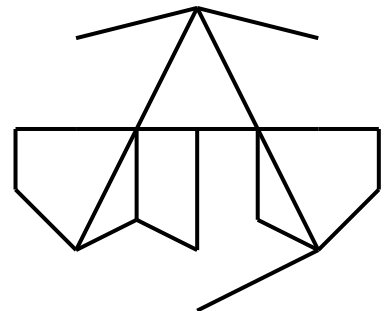
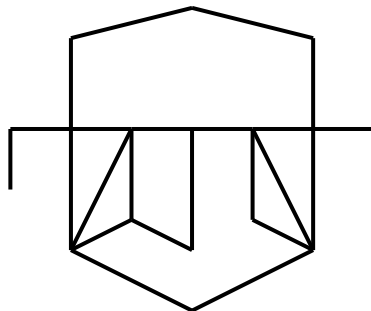
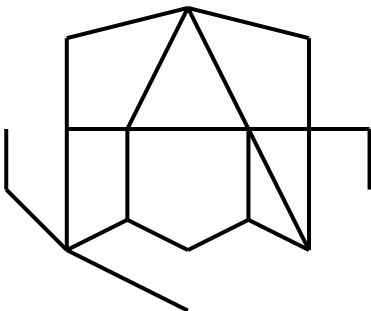
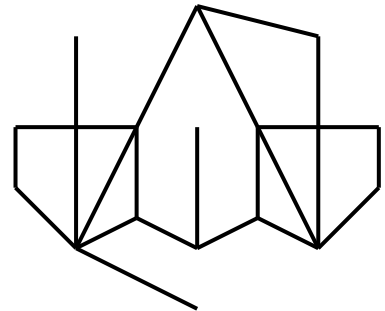
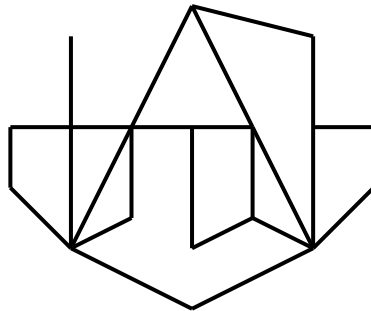
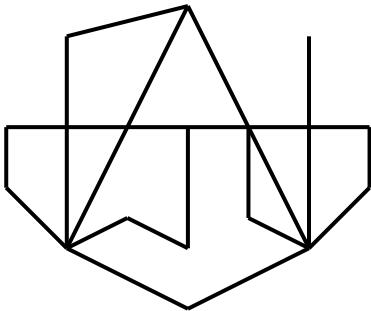
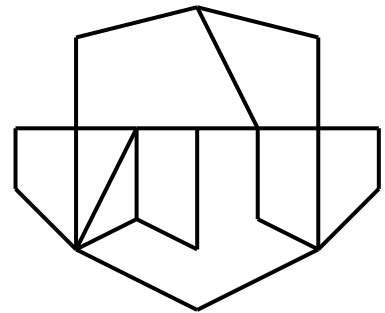
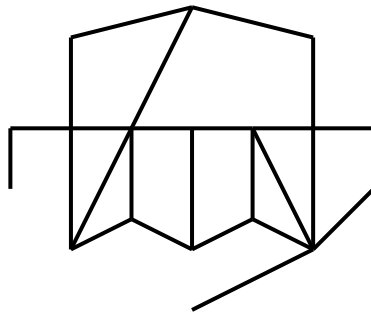
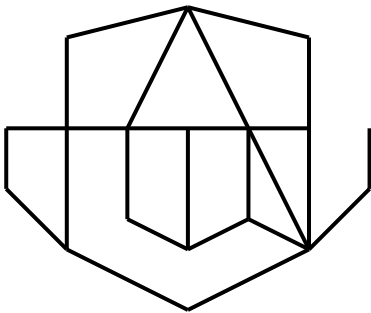


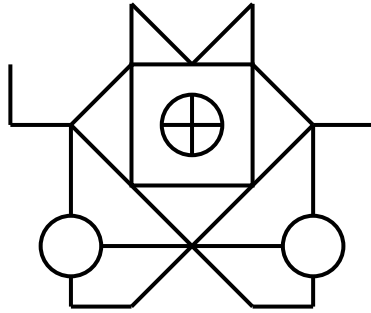
Completa las figuras como la de arriba:



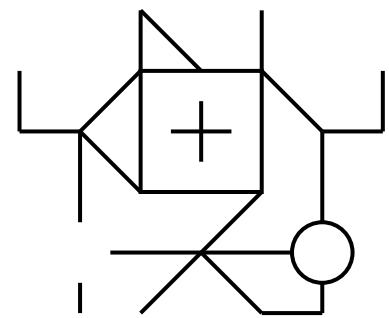
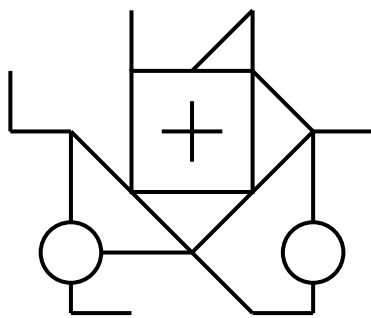
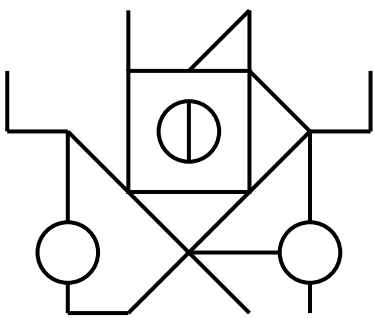
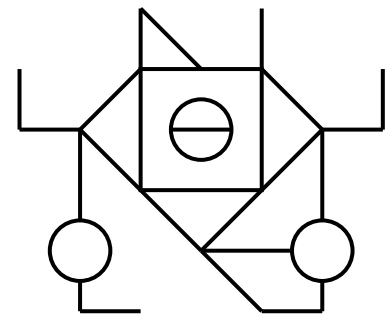
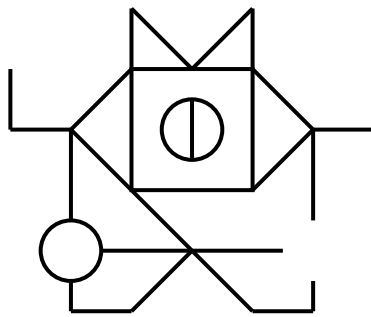
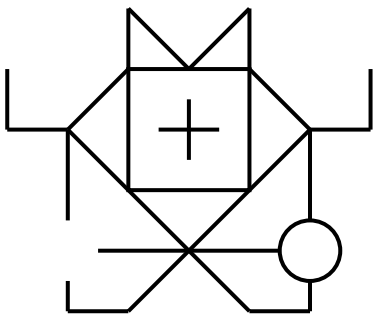
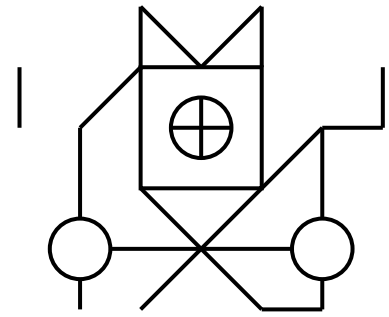
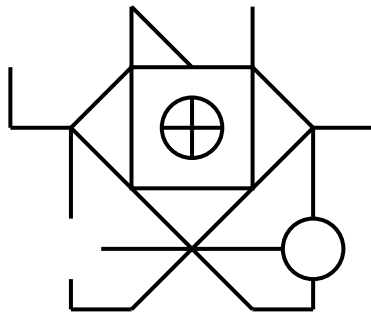
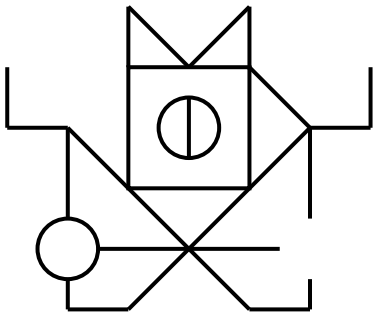


Completa las figuras como la de arriba:

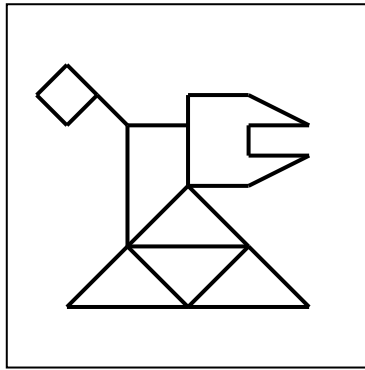





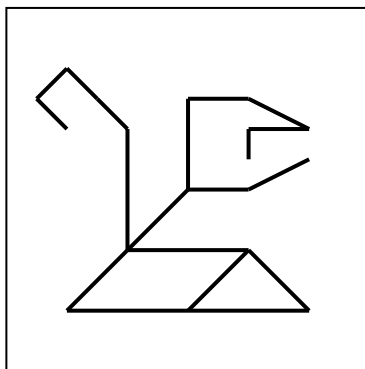
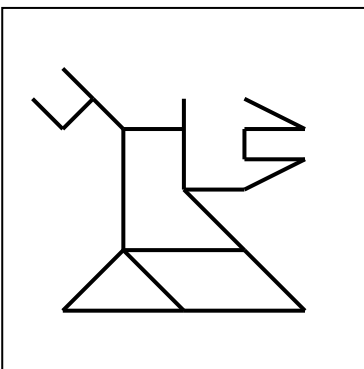
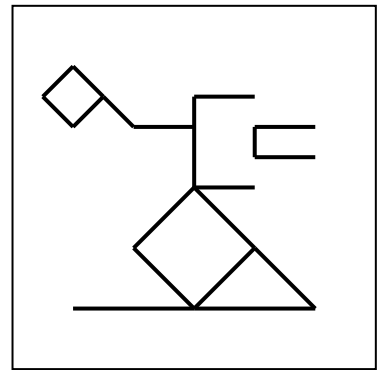
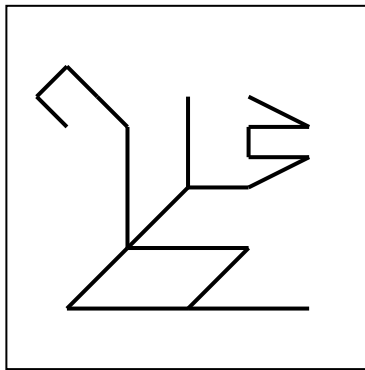
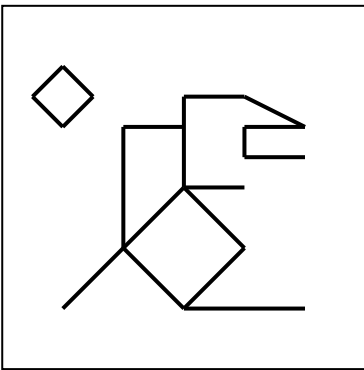
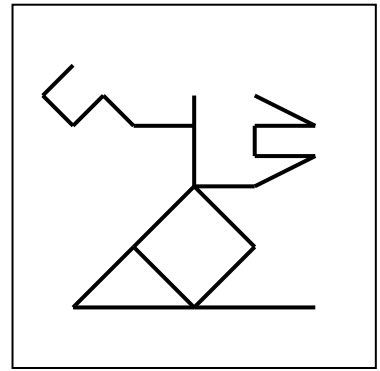

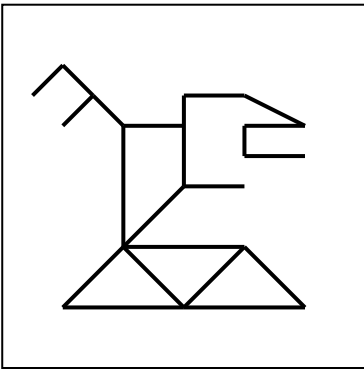
Completa las figuras como la de arriba:

















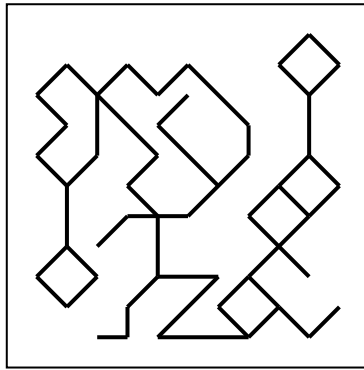
Completa las figuras como la de arriba:




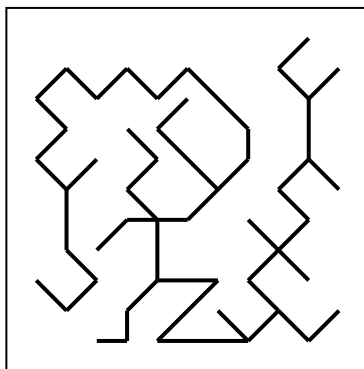




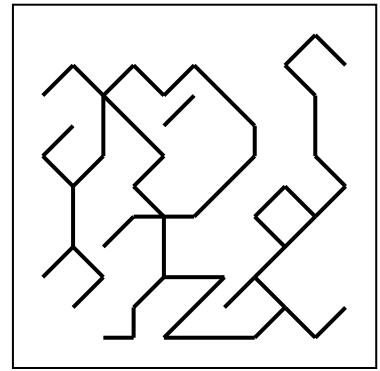
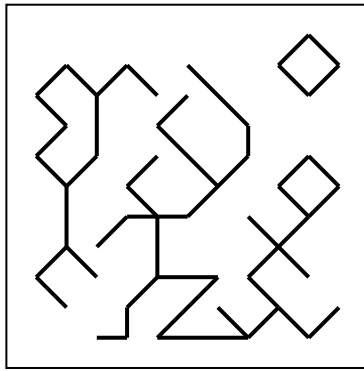




Completa las figuras como la de arriba:















Completa las figuras como la de arriba:








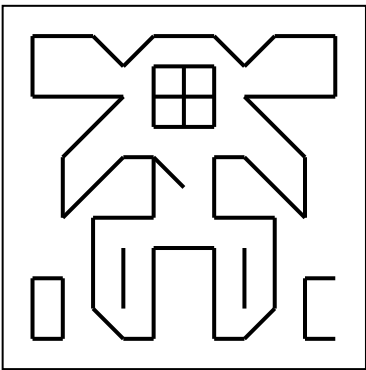
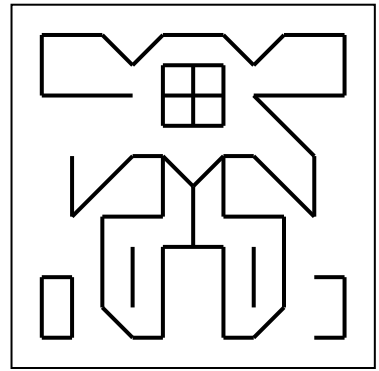

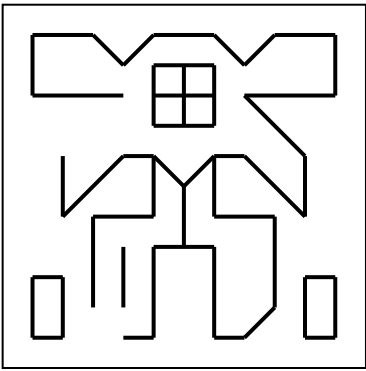


Completa las figuras como la de arriba:





Completa las figuras como la de arriba:



1	2	3	4	5	6	7	8

Completa los números en las fichas de abajo siguiendo el modelo de las de arriba








1	2	3	4	5	6	7	8

Completa los números en las fichas de abajo siguiendo el modelo de las de arriba








1	2	3	4	5	6	7	8

Completa los números en las fichas de abajo siguiendo el modelo de las de arriba


















1	2	3	4	5	6	7	8

Completa los números en las fichas de abajo siguiendo el modelo de las de arriba
















































							
1	2	3	4	5	6	7	8











Completa los números en las fichas de abajo siguiendo el modelo de las de arriba











									











									

୧	୨	୩	୪	୫	୬	୭	୮
1	2	3	4	5	6	7	8

Completa los números en las fichas de abajo siguiendo el modelo de las de arriba

୩	୨	୧	୩	୨	୩	୩	୧

୬	୬	୩	୩	୬	୧	୧	୬

୬	୬	୩	୬	୩	୧	୩	୬

୩	୬	୬	୩	୩	୬	୬	୩

୬	୬	୬	୩	୬	୩	୩	୧

୩	୬	୬	୬	୧	୬	୬	୧

୬	୧	୬	୬	୧	୬	୬	୩

1	2	3	4	5	6	7	8
---	---	---	---	---	---	---	---

Completa los números en las fichas de abajo siguiendo el modelo de las de arriba

1	2	3	4	5	6	7	8
---	---	---	---	---	---	---	---

1	2	3	4	5	6	7	8
---	---	---	---	---	---	---	---

1	2	3	4	5	6	7	8
---	---	---	---	---	---	---	---

1	2	3	4	5	6	7	8
---	---	---	---	---	---	---	---

1	2	3	4	5	6	7	8
---	---	---	---	---	---	---	---

1	2	3	4	5	6	7	8
---	---	---	---	---	---	---	---

1	2	3	4	5	6	7	8
---	---	---	---	---	---	---	---

1	2	3	4	5	6	7	8
---	---	---	---	---	---	---	---

Completa los números en las fichas de abajo siguiendo el modelo de las de arriba

1	2	3	4	5	6	7	8

1	2	3	4	5	6	7	8

1	2	3	4	5	6	7	8

1	2	3	4	5	6	7	8

1	2	3	4	5	6	7	8

1	2	3	4	5	6	7	8

1	2	3	4	5	6	7	8

୧	୨	୩	୪	୫	୬	୭	୮
1	2	3	4	5	6	7	8

Completa los números en las fichas de abajo siguiendo el modelo de las de arriba

୨	୯	୩	୪	୩	୫	୬	୫

୯	୯	୯	୩	୩	୪	୯	୯

୫	୬	୬	୩	୩	୬	୬	୬

୫	୯	୬	୬	୫	୩	୯	୩

୬	୬	୩	୬	୯	୩	୬	୬

୬	୬	୫	୬	୯	୬	୯	୯

୫	୯	୬	୩	୩	୩	୯	୬

1	2	3	4	5	6	7	8
---	---	---	---	---	---	---	---

Completa los números en las fichas de abajo siguiendo el modelo de las de arriba

1	2	3	4	5	6	7	8
---	---	---	---	---	---	---	---

1	2	3	4	5	6	7	8
---	---	---	---	---	---	---	---

1	2	3	4	5	6	7	8
---	---	---	---	---	---	---	---

1	2	3	4	5	6	7	8
---	---	---	---	---	---	---	---

1	2	3	4	5	6	7	8
---	---	---	---	---	---	---	---

1	2	3	4	5	6	7	8
---	---	---	---	---	---	---	---

1	2	3	4	5	6	7	8
---	---	---	---	---	---	---	---

၄	၈	၃	၉	၇	၆	၅	၂
1	2	3	4	5	6	7	8

Completa los números en las fichas de abajo siguiendo el modelo de las de arriba

၄	၃	၅	၆	၈	၉	၂	၇

၅	၃	၆	၂	၇	၄	၈	၉

၈	၅	၆	၉	၃	၅	၆	၉

၆	၃	၅	၈	၆	၉	၃	၉

၈	၆	၆	၃	၃	၅	၉	၉

၈	၈	၆	၈	၉	၃	၅	၅

၄	၉	၈	၅	၆	၉	၈	၃



a	b	c	d	e	f	g	h	i	j
1	2	3	4	5	6	7	8	9	10

Completa los números en las fichas de abajo siguiendo el modelo de las de arriba

a	g	j	e	e	e	i	g	g	i

g	g	h	f	f	f	f	i	f	g

d	a	a	a	e	g	c	d	b	d

a	f	d	h	e	b	f	e	g	i

g	j	g	i	i	j	i	a	e	i

a	b	g	g	d	i	e	h	f	a

i	g	h	f	a	f	i	a	j	g

j	a	b	c	d	e	f	g	h	i
1	2	3	4	5	6	7	8	9	10

Completa los números en las fichas de abajo siguiendo el modelo de las de arriba

c	i	b	g	c	g	j	c	j	g

j	i	c	c	h	g	c	c	e	f

f	h	b	g	a	d	d	e	a	g

e	a	i	j	h	i	e	c	d	i

b	g	d	e	j	i	i	f	g	c

c	d	d	e	a	d	c	e	a	e

h	c	b	h	h	h	d	h	i	a

i	j	a	b	c	d	e	f	g	h
1	2	3	4	5	6	7	8	9	10

Completa los números en las fichas de abajo siguiendo el modelo de las de arriba

g	e	j	f	e	j	h	b	c	a

c	a	e	c	d	g	c	b	a	f

b	d	f	c	d	h	g	e	g	b

h	b	i	i	f	f	f	d	e	i

j	b	i	c	h	d	b	f	h	b

d	b	e	j	a	i	f	f	f	g

c	j	a	h	f	e	j	f	f	h

h	i	j	a	b	c	d	e	f	g
1	2	3	4	5	6	7	8	9	10

Completa los números en las fichas de abajo siguiendo el modelo de las de arriba

d	e	i	b	b	a	h	i	b	b

c	i	c	e	h	h	e	c	f	d

c	d	c	g	c	j	f	d	f	c

g	j	f	b	e	c	d	a	a	i

f	h	d	j	e	d	g	d	i	a

e	f	g	h	c	f	g	b	h	e

g	g	b	e	e	f	h	a	i	c

g	h	i	j	a	b	c	d	e	f
1	2	3	4	5	6	7	8	9	10

Completa los números en las fichas de abajo siguiendo el modelo de las de arriba

b	e	b	i	b	f	i	c	e	d

i	d	e	f	f	d	j	i	e	d







c	i	g	c	g	d	a	g	f	h

f	b	d	i	f	a	c	b	d	a











e	a	a	g	c	f	b	d	a	h











a	d	f	i	j	e	b	h	c	j











a	j	a	i	g	h	d	f	g	d











					
1	2	3	4	5	6











Completa los números en las fichas de abajo siguiendo el modelo de las de arriba











									







									











									











									











									











					
1	2	3	4	5	6











Completa los números en las fichas de abajo siguiendo el modelo de las de arriba











									







									











									











									











									











					
1	2	3	4	5	6











Completa los números en las fichas de abajo siguiendo el modelo de las de arriba











									







									











									











									























					
1	2	3	4	5	6











Completa los números en las fichas de abajo siguiendo el modelo de las de arriba











									







									











									











									











									











					
1	2	3	4	5	6











Completa los números en las fichas de abajo siguiendo el modelo de las de arriba











									

En el recuadro B están todos los números del recuadro A menos uno, escribe en el hueco el que falta

A						
56	51	60	43	51	66	26
24	64	73	75	76	45	42
52	22	25	55	47	22	21
21	64	66	28	67	20	63

B						
22	51	63	66	25	47	21
26	45	73	42	76	22	52
64	55	20	75	64	67	43
24	28	66	56	51	21	

A						
64	22	80	64	58	66	21
41	63	39	78	66	62	70
71	39	64	45	46	64	45
26	50	50	59	30	35	72

B						
66	39	46	35	21	50	63
59	22	58	64	45	64	39
64	80	41	62	71	26	72
30	50	70	78	64	45	

A						
54	51	36	21	34	33	57
23	24	73	67	52	40	29
46	68	70	52	47	59	74
23	25	59	71	69	62	80

B						
54	33	69	59	46	23	71
24	47	74	34	73	67	57
62	21	59	70	51	25	36
29	80	40	68	23	52	

A						
22	59	76	65	48	20	69
27	29	67	40	55	51	69
32	57	51	76	76	67	31
40	55	64	65	67	36	30

B						
29	57	65	76	51	36	69
69	51	40	59	30	67	20
22	64	67	40	76	55	76
48	31	67	55	27	65	

A						
64	42	51	23	52	59	23
37	67	80	43	77	22	23
62	50	72	20	29	35	72
24	32	39	62	60	21	61

B						
59	23	72	32	62	20	43
21	77	35	80	50	62	23
39	64	24	60	22	72	51
61	42	23	67	52	29	

En el recuadro B están todos los números del recuadro A menos uno, escribe en el hueco el que falta

A						
54	75	47	75	39	62	36
71	79	64	20	43	24	57
28	66	65	60	42	32	77
30	70	43	38	21	53	26

B						
26	53	64	70	32	43	21
36	43	75	39	79	28	54
65	57	20	77	66	75	42
30	38	71	60	47	24	

A						
31	66	69	69	26	24	63
62	75	60	65	37	28	35
59	21	50	61	63	48	29
62	32	56	50	21	34	31

B						
63	31	35	28	21	48	59
50	21	50	61	32	62	29
60	75	31	56	66	24	69
26	37	65	69	62	34	

A						
21	77	45	26	48	71	58
26	45	23	35	71	62	68
42	32	43	67	44	75	30
49	41	48	29	49	61	20

B						
48	30	67	49	42	23	71
26	43	75	32	71	61	48
58	20	49	68	44	26	35
29	77	41	62	21	45	

A						
53	72	23	24	25	37	80
71	62	62	44	74	48	25
63	67	26	29	65	67	25
50	68	30	59	25	38	39

B						
25	53	63	74	39	29	68
71	44	30	59	25	65	23
24	62	67	37	72	48	80
38	25	67	50	25	62	

A						
46	30	68	49	50	80	27
48	63	47	27	20	75	40
57	61	78	58	47	47	57
75	27	20	31	52	39	75

B						
57	27	75	40	61	20	48
20	78	46	80	49	63	30
47	68	31	57	27	75	50
58	47	27	75	52	39	

En el recuadro B están todos los números del recuadro A menos uno, escribe en el hueco el que falta

A						
23	24	27	58	21	43	29
62	39	51	64	28	63	52
71	52	32	35	72	48	67
77	36	24	32	64	48	48

B						
24	48	58	64	29	43	23
32	39	71	35	77	27	48
62	51	21	72	63	67	36
28	32	64	52	48	24	

A						
25	37	47	39	79	56	45
77	20	45	27	50	64	53
31	45	56	59	38	33	78
69	65	72	35	51	31	72

B						
65	35	45	31	20	45	53
50	25	47	56	38	64	33
56	79	37	51	72	27	77
31	45	72	78	59	39	

A						
27	65	62	39	65	53	29
57	54	57	58	80	64	72
31	66	42	75	26	45	29
48	80	59	39	55	63	34

B						
57	39	65	62	48	29	72
29	53	80	39	75	64	58
63	26	59	66	54	31	42
34	80	45	65	27	55	

A						
73	43	62	26	77	35	53
59	25	36	77	26	69	43
26	77	72	51	43	69	67
60	44	22	47	54	66	66

B						
26	59	66	77	47	43	72
73	51	43	60	26	67	22
25	62	69	43	77	53	77
44	35	69	54	26	66	

A						
42	60	62	35	39	50	64
75	49	36	40	65	35	69
60	42	52	43	58	61	69
76	38	72	48	51	24	44

B						
60	38	69	42	62	24	50
35	75	43	76	51	64	39
48	65	40	60	35	72	52
61	49	36	69	58	42	

En el recuadro B están todos los números del recuadro A menos uno, escribe en el hueco el que falta

A						
30	30	66	74	42	30	20
48	39	33	61	48	25	53
37	39	40	27	24	21	38
50	71	66	25	30	79	61

B						
25	39	50	61	30	38	21
30	37	71	30	79	25	40
53	42	20	74	61	66	33
27	30	66	48	39	24	

A						
61	73	53	48	41	72	23
65	29	73	68	42	57	56
66	59	67	30	36	79	63
54	68	36	27	43	36	79

B						
68	36	48	36	23	54	61
57	27	56	65	42	67	36
63	79	41	59	73	29	73
30	53	72	79	66	43	

A						
43	45	65	50	62	32	70
28	38	56	44	46	66	59
73	22	34	77	43	80	61
22	25	45	75	43	57	48

B						
50	38	66	59	44	25	73
28	45	77	43	75	62	56
61	22	57	70	45	32	43
34	80	43	65	22	46	

A						
72	77	62	75	38	31	21
41	74	55	20	68	33	64
41	64	67	53	55	38	28
69	63	37	51	28	25	64

B						
28	55	64	75	41	37	69
72	51	38	62	28	64	20
21	63	67	38	74	53	77
41	31	68	55	25	64	

A						
26	61	75	27	42	78	76
74	40	32	48	76	59	76
47	56	55	30	33	24	67
43	57	26	44	54	69	22

B						
57	27	76	40	67	22	48
24	76	42	78	54	69	30
44	74	32	59	26	76	55
61	47	26	75	56	33	

En el recuadro B están todos los números del recuadro A menos uno, escribe en el hueco el que falta

A						
34	55	46	48	30	32	68
27	37	74	53	67	52	52
24	48	20	41	54	58	57
54	50	59	48	76	46	44

B						
30	50	54	58	37	48	24
41	48	68	46	76	32	52
55	52	20	74	57	67	46
34	44	59	53	48	27	

A						
78	57	34	78	35	21	77
29	48	59	48	70	73	76
33	58	25	33	62	40	24
54	27	47	80	46	60	26

B						
70	33	40	27	21	47	57
48	24	48	59	34	62	29
58	80	33	54	77	25	78
26	46	76	78	60	35	

A						
66	57	63	31	56	33	57
57	29	63	22	55	70	30
73	25	46	57	60	32	51
80	52	68	76	44	30	76

B						
57	32	68	60	51	29	73
30	52	76	33	76	63	57
63	22	57	70	55	30	44
31	80	46	66	25	56	





A						
63	77	80	62	68	24	48
21	50	62	66	27	35	44
29	54	58	29	74	43	63
22	57	70	25	63	71	50

B						
25	58	63	77	50	35	70
71	50	43	62	27	63	21
22	62	66	44	74	54	80
48	29	68	57	24	63	

A						
50	59	38	60	29	64	43
24	32	47	73	31	73	20
77	33	55	45	31	49	26
21	42	56	50	64	75	43


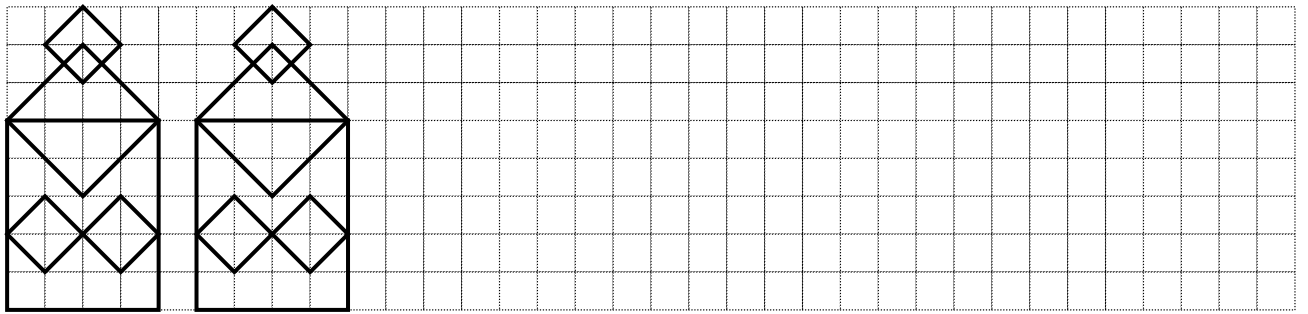


B						
50	29	73	33	59	20	45
21	75	38	77	47	60	31
43	64	31	55	24	73	49
56	43	26	64	50	32	

Continúa la serie de dibujos









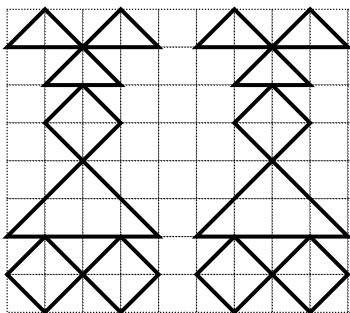
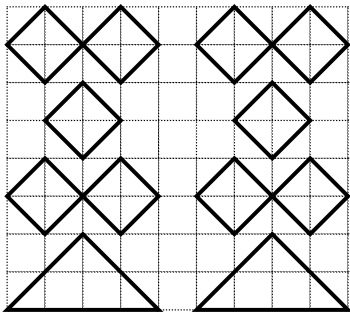
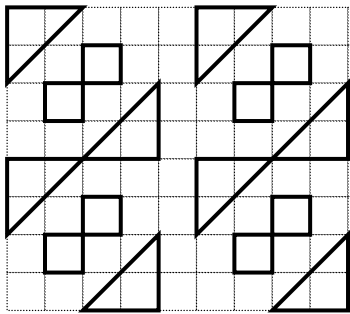
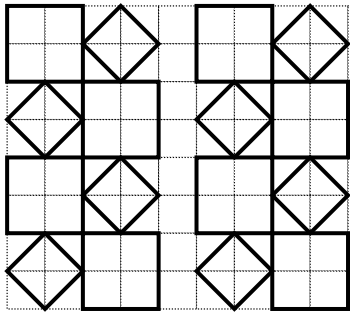
Continúa la serie de dibujos







Continúa la serie de dibujos



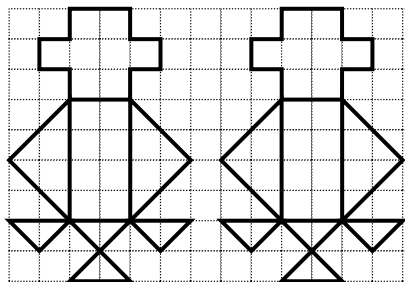
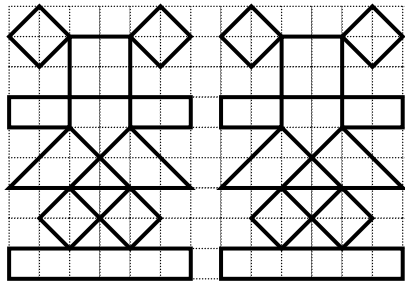
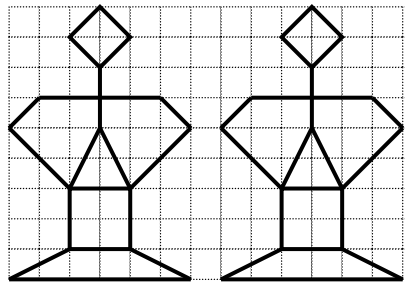
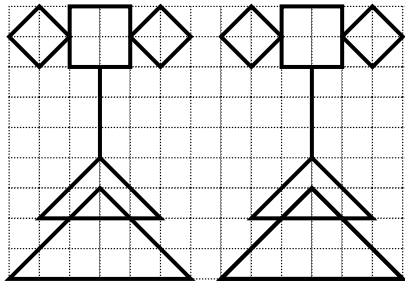
Continúa la serie de dibujos







Continúa la serie de dibujos







Continúa la serie de dibujos







Continúa la serie de dibujos



Continúa la serie de dibujos







Continúa la serie de dibujos

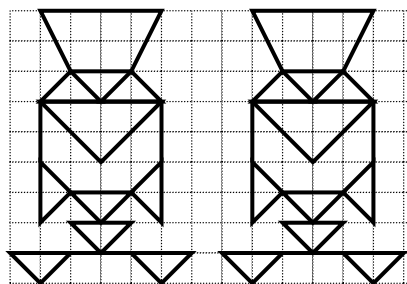
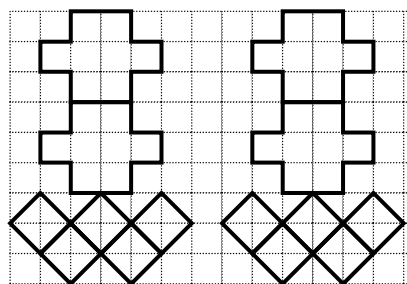
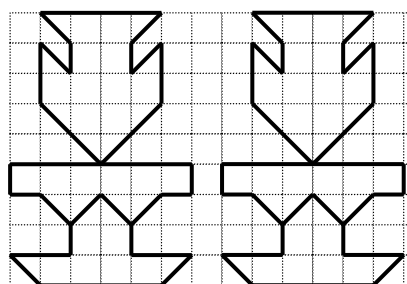
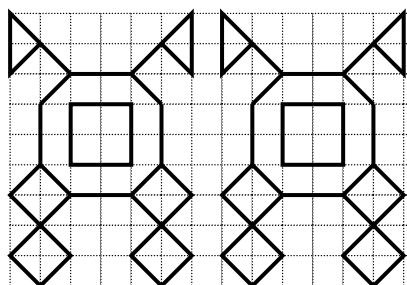




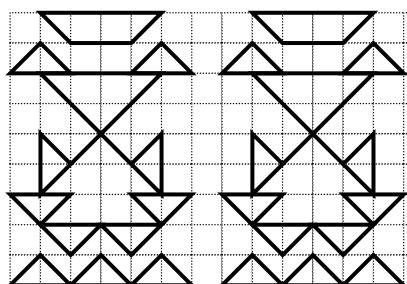
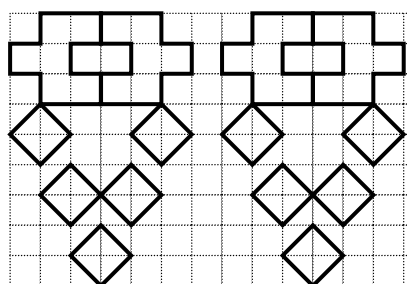
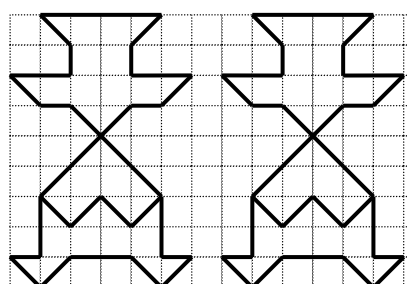
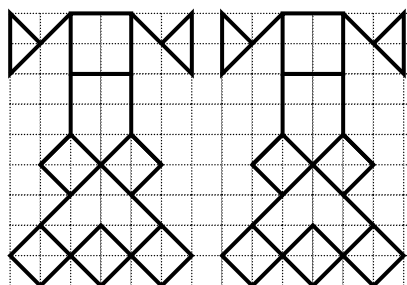
Continúa la serie de dibujos



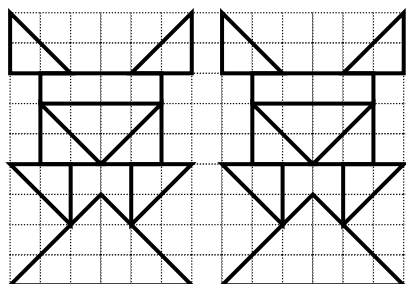
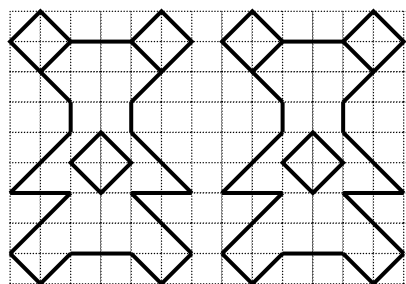
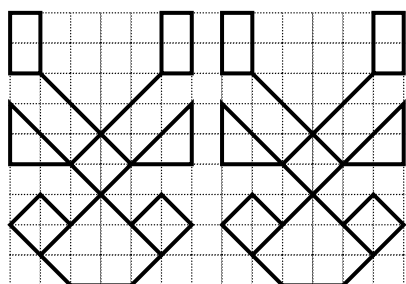
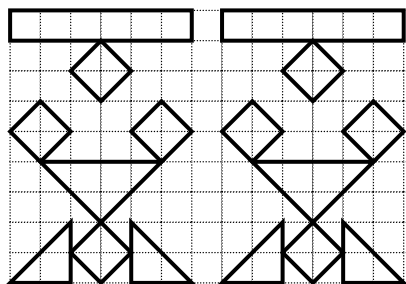
Continúa la serie de dibujos



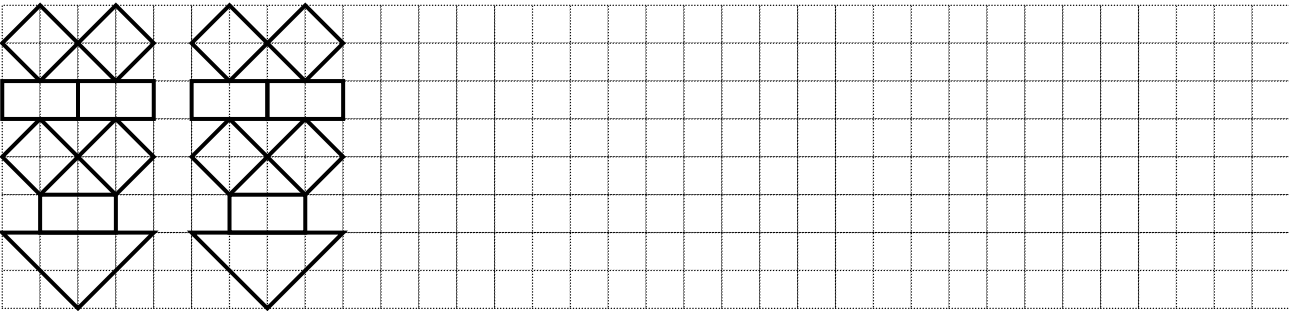
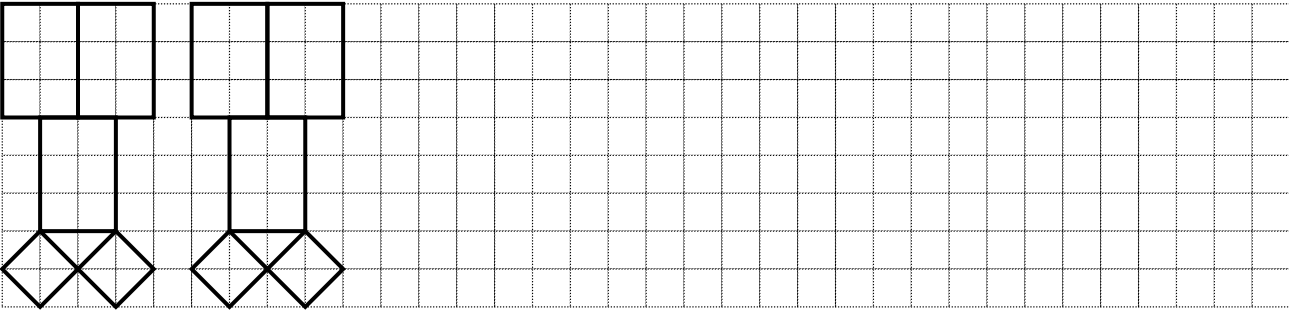

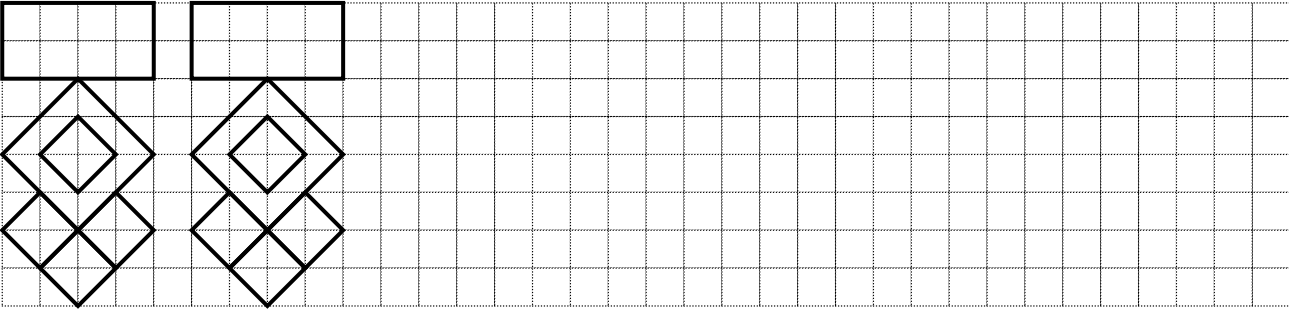
Continúa la serie de dibujos







Continúa la serie de dibujos







Continúa la serie de dibujos




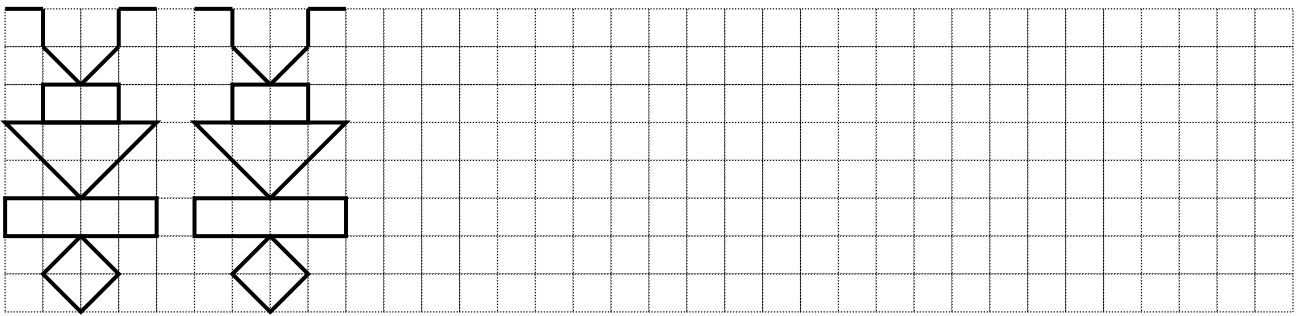
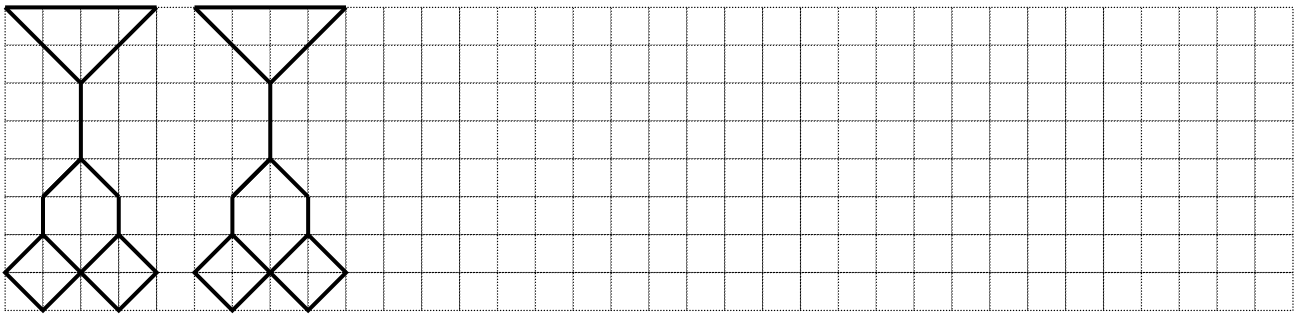

Continúa la serie de dibujos



Continúa la serie de dibujos

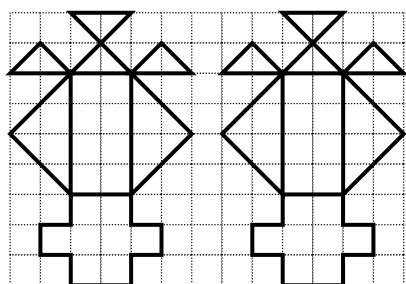
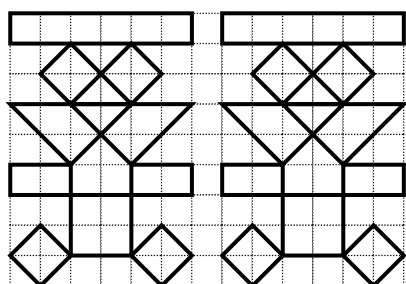
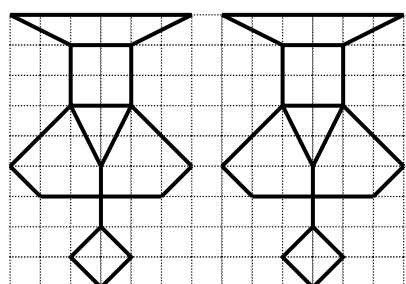
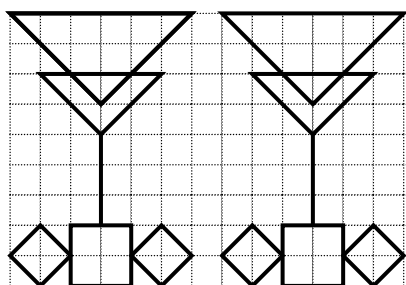


Continúa la serie de dibujos









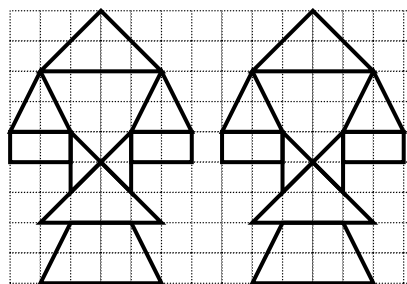
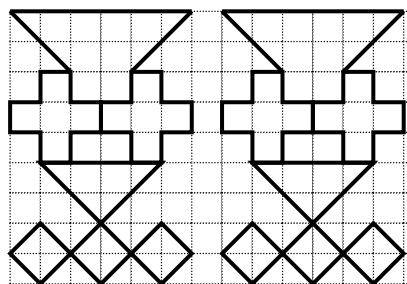
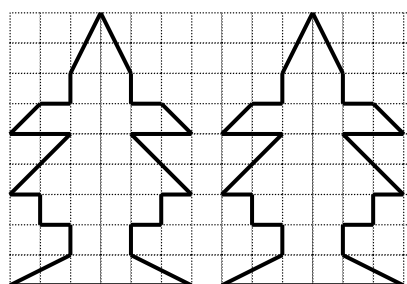
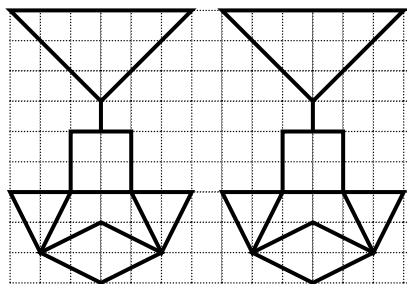
Continúa la serie de dibujos



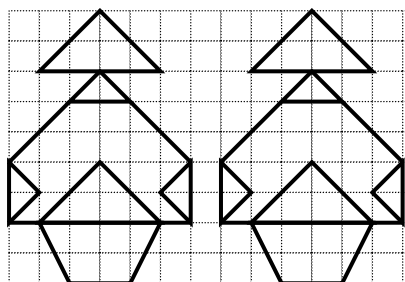
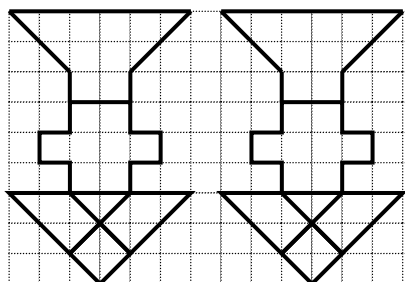
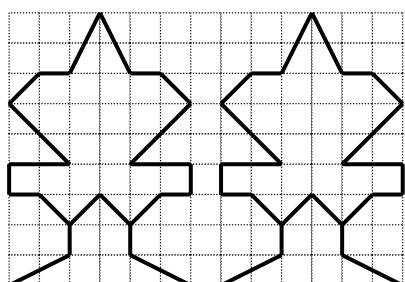
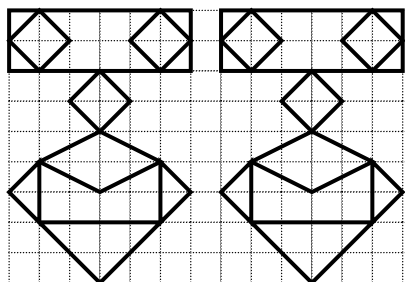
Continúa la serie de dibujos







Continúa la serie de dibujos



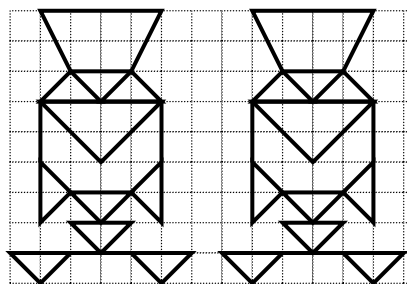
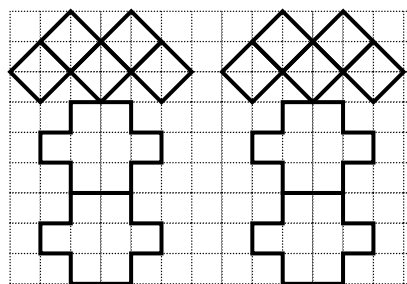
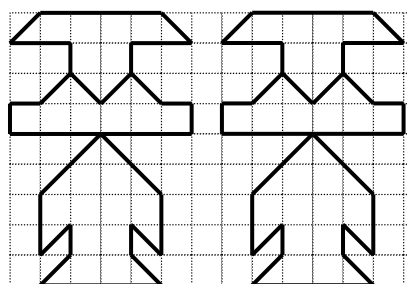
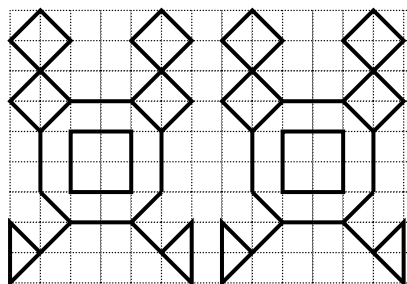
Continúa la serie de dibujos



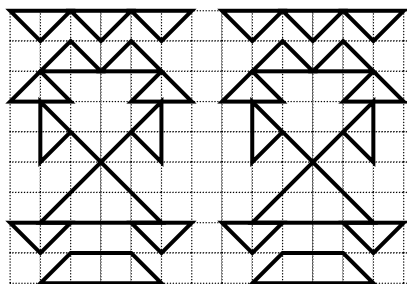
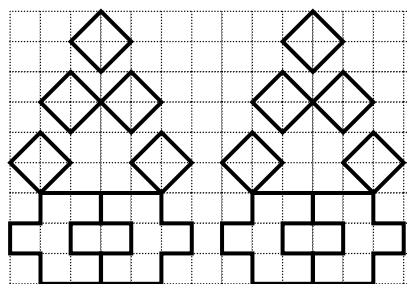
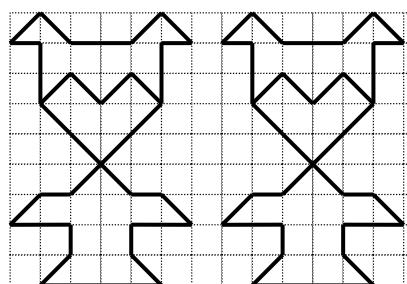

Continúa la serie de dibujos



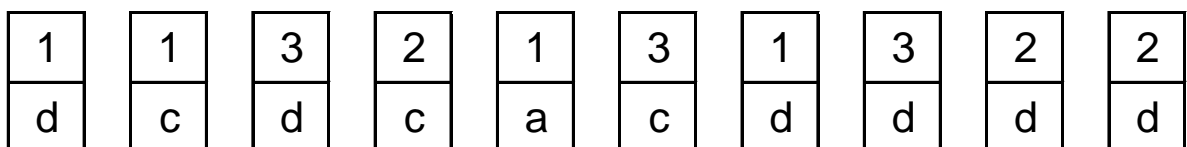
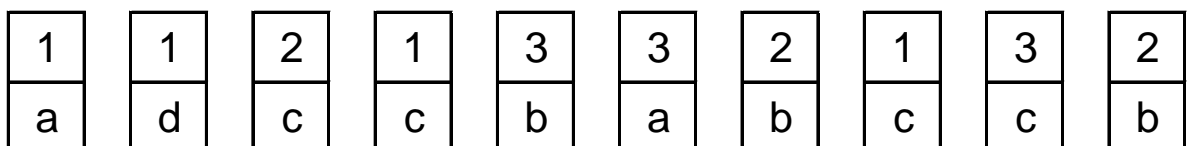
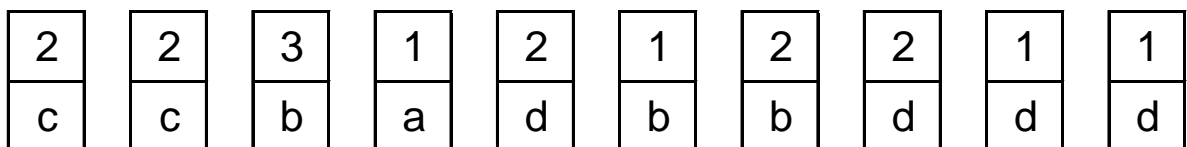
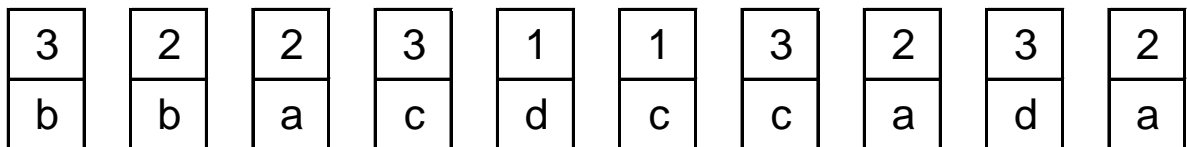
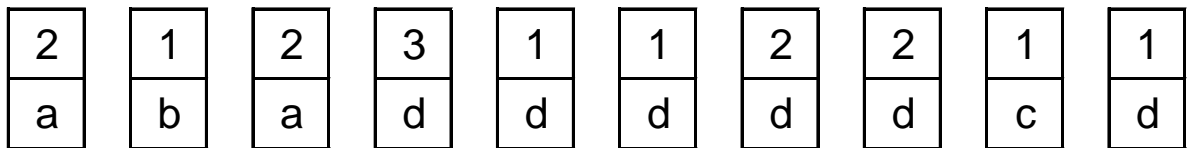
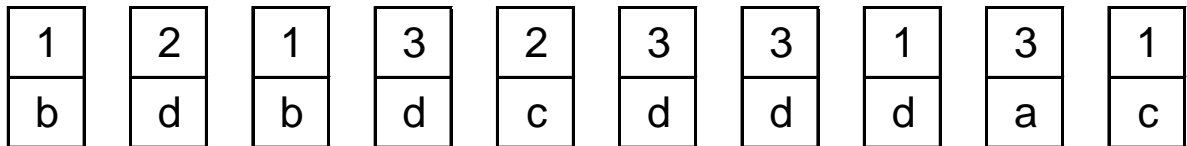
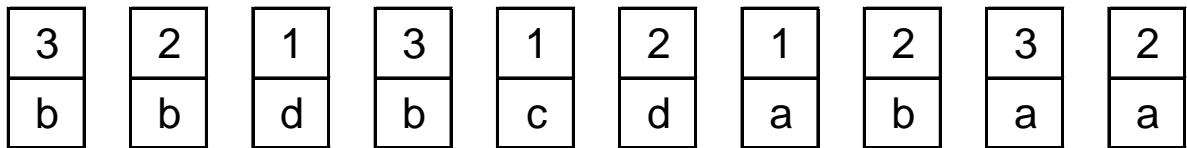
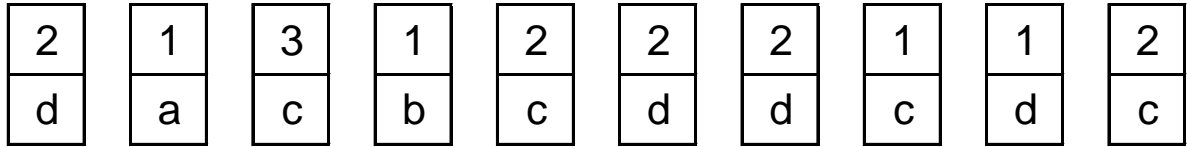

Continúa la serie de dibujos



Continúa la serie de dibujos

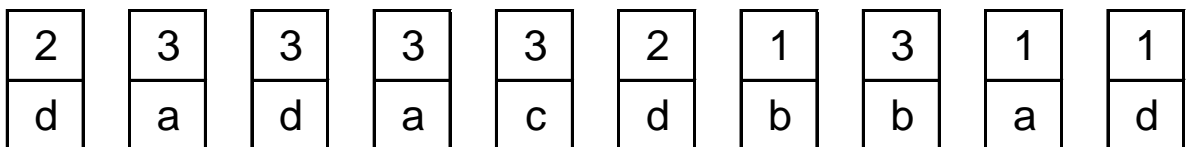
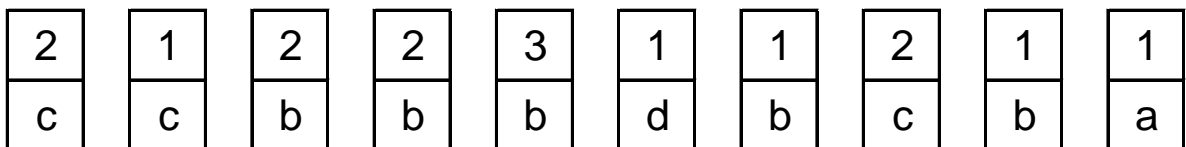
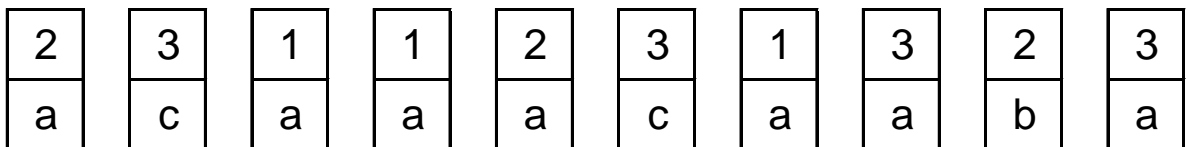
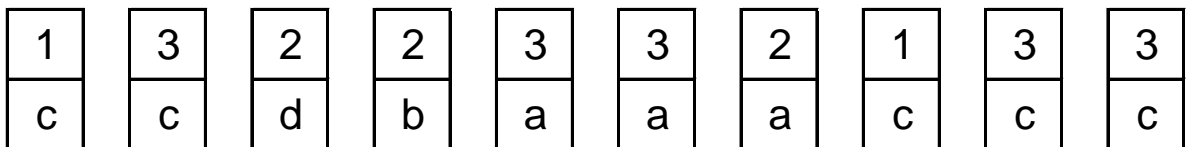
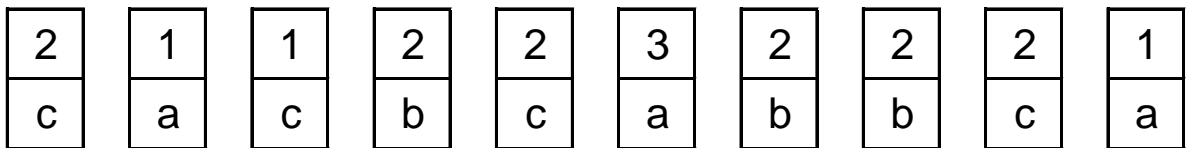
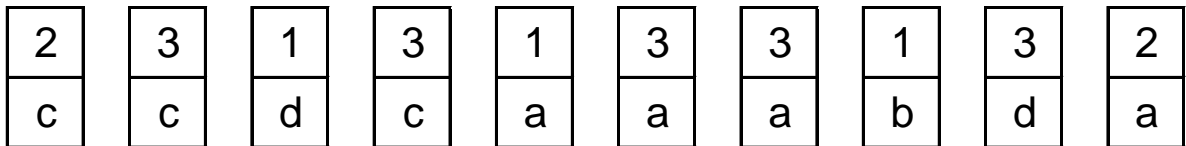
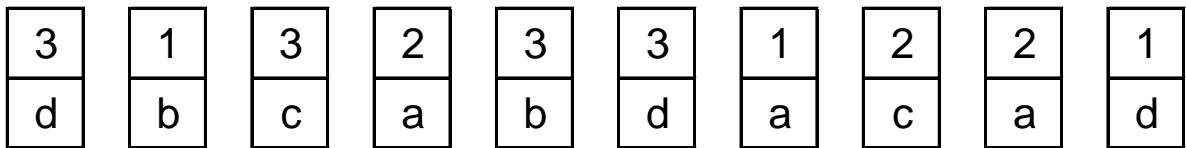
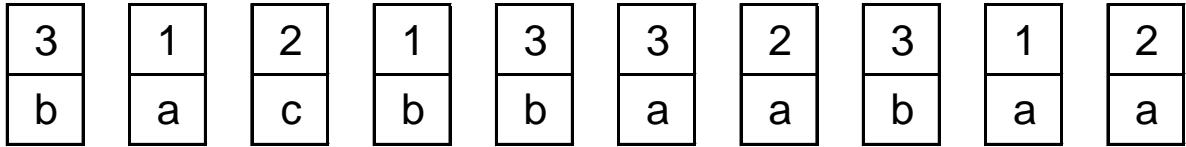



Tacha todas las fichas que sean como esta:

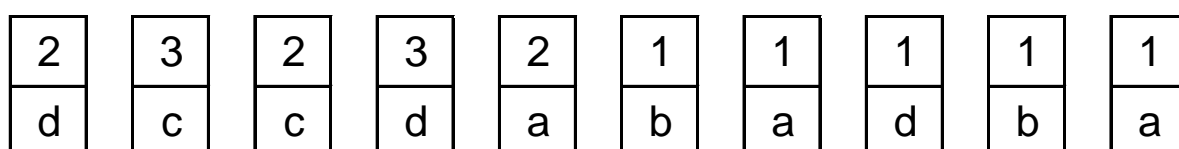
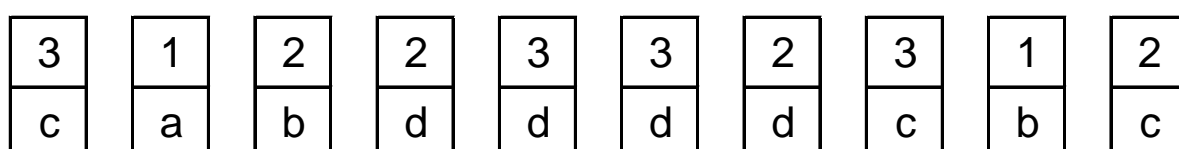
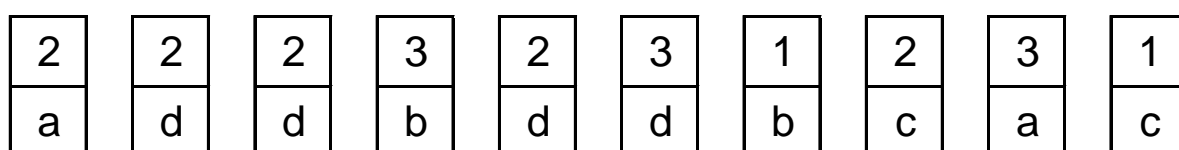
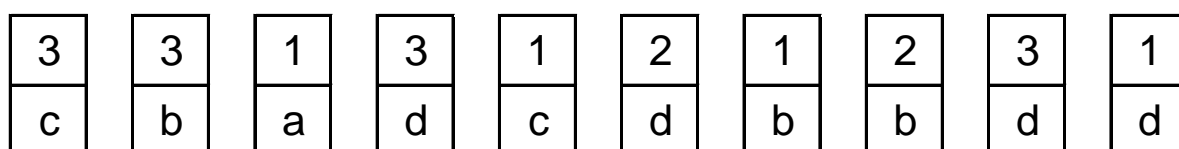
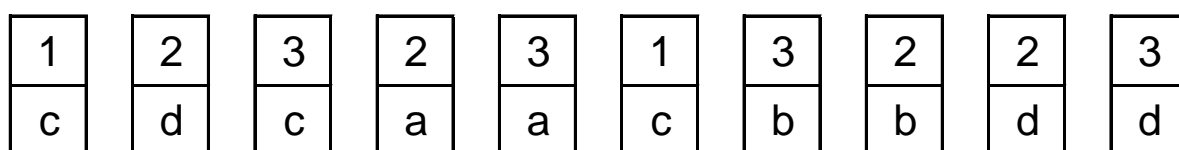
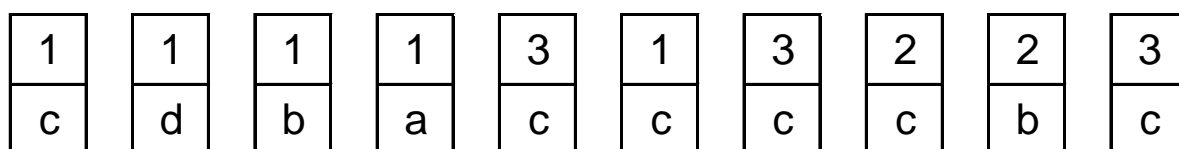
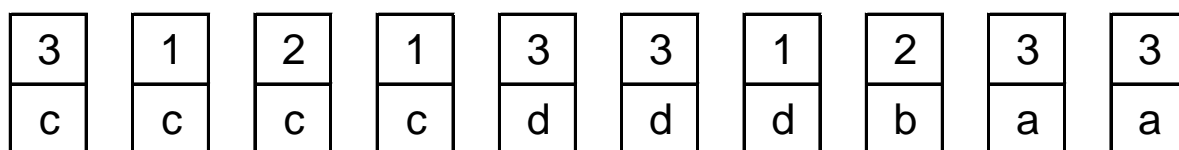
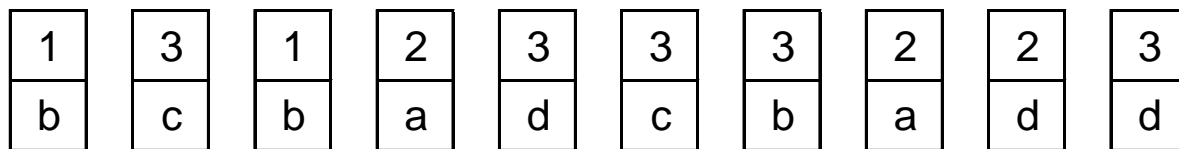




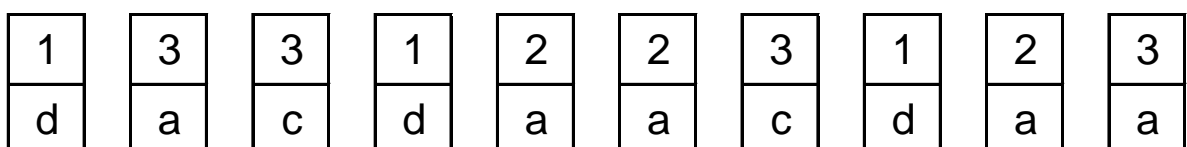
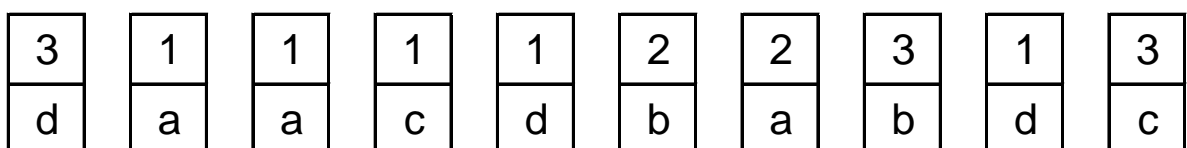
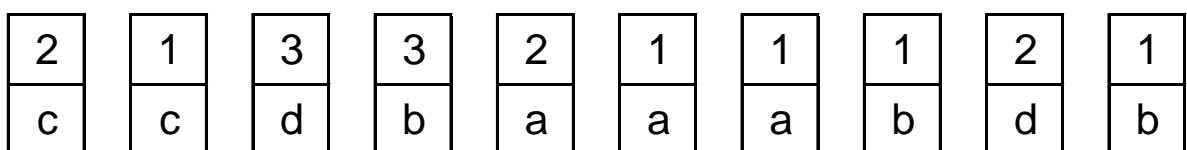
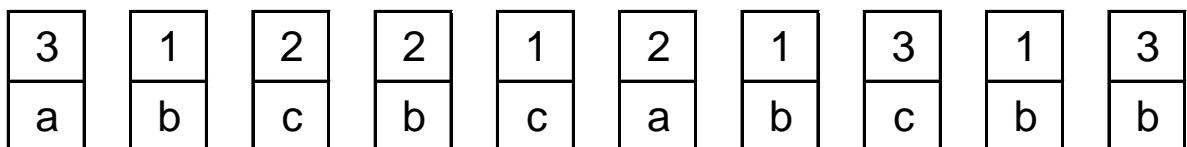
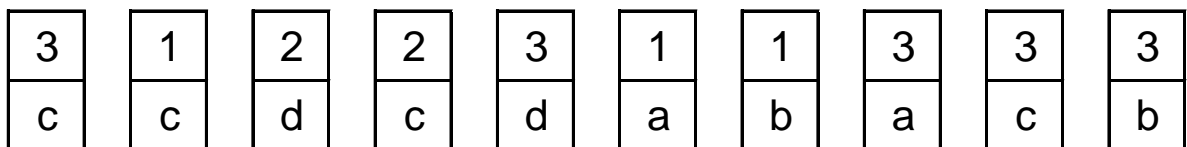
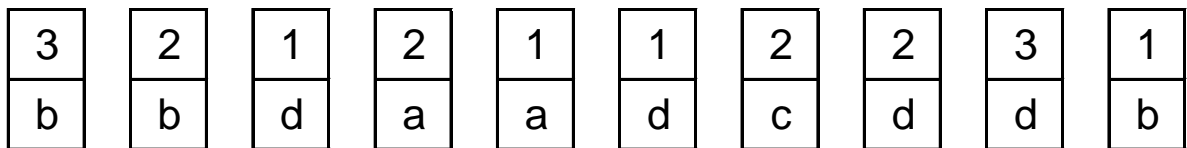
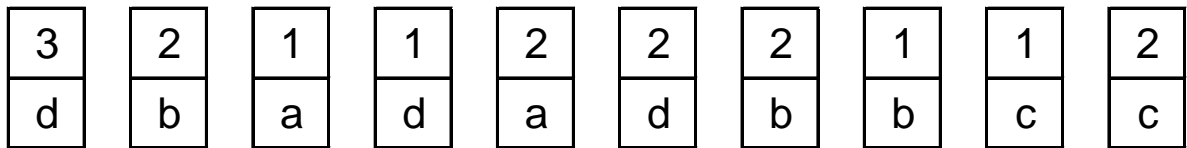
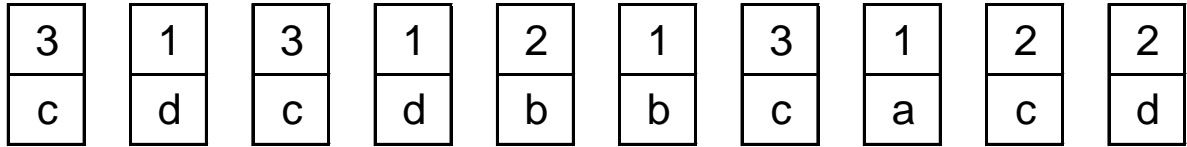

Tacha todas las fichas que sean como esta:



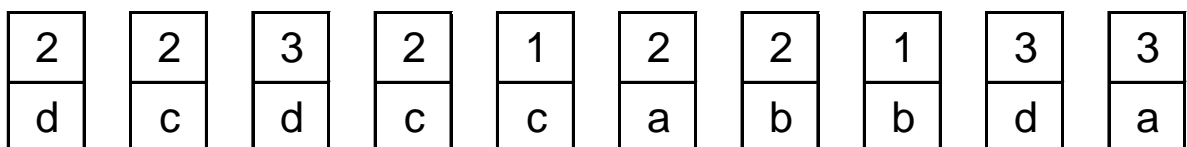
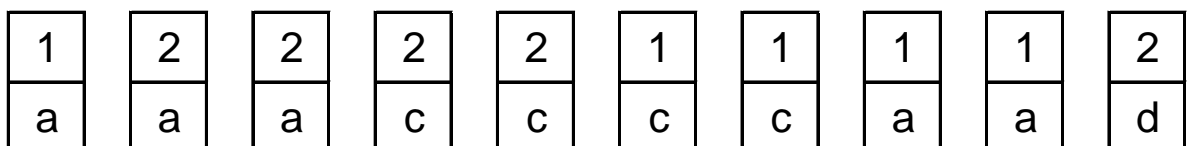
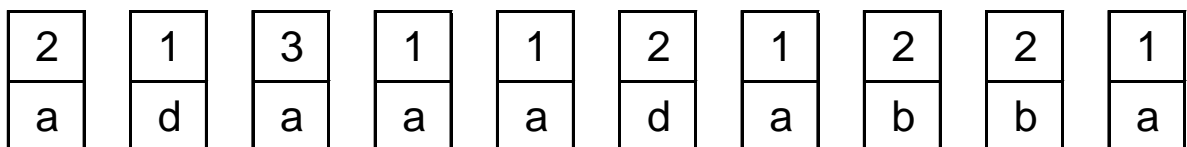
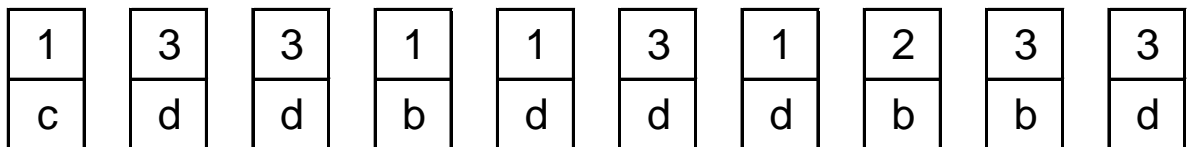
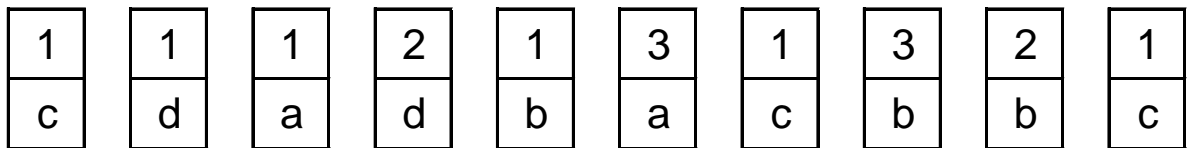
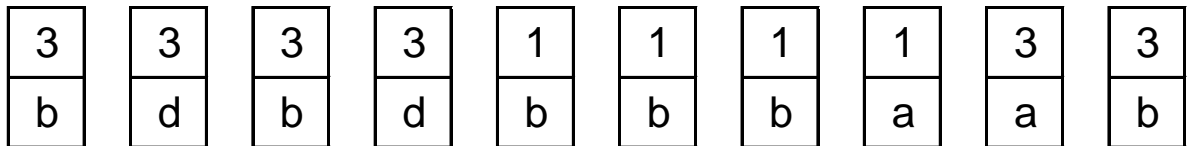
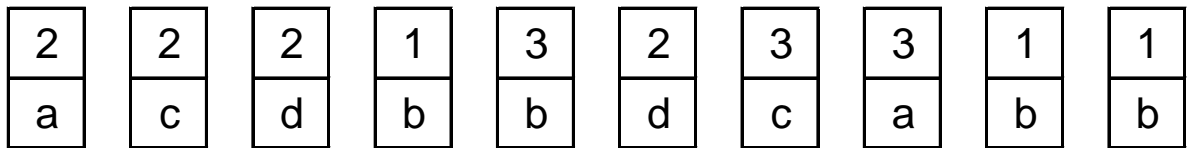
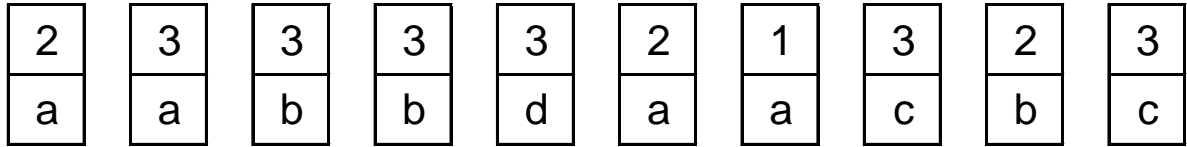
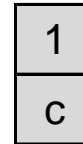
Tacha todas las fichas que sean como esta:



Tacha todas las fichas que sean como esta:



Tacha todas las fichas que sean como esta:



Tacha todos los 56

55	58	57	57	55	59	55	54	56	53	55	54	55	58
54	57	55	54	54	57	55	59	55	55	54	58	57	57
59	55	55	53	56	57	58	55	58	55	53	58	55	58
53	56	57	57	57	57	56	54	56	57	56	56	54	55
58	57	53	55	54	59	53	55	58	57	55	59	57	56
58	57	55	56	53	55	57	54	54	56	57	57	54	55

Tacha todos los 71

73	72	70	73	72	70	74	68	72	71	73	74	69	69
71	74	71	70	74	72	69	72	68	74	73	71	73	71
68	70	69	71	71	70	70	74	70	71	74	72	70	70
71	70	69	72	70	71	74	68	72	72	72	73	71	70
71	72	70	71	69	69	69	69	74	74	69	70	68	70
70	69	70	69	69	71	70	69	70	72	70	68	70	71

Tacha todos los 76

75	75	74	77	73	79	76	74	74	75	77	79	75	73
74	75	77	78	79	74	76	78	77	75	76	78	77	79
75	76	73	75	73	77	74	75	73	73	78	76	74	79
79	77	74	79	79	78	74	79	76	74	76	78	77	76
77	73	79	78	76	78	73	77	76	75	75	74	78	75
77	79	75	75	77	74	75	77	78	76	75	78	74	76

Tacha todos los 28

30	30	30	27	31	28	25	26	27	31	26	26	26	27
28	26	30	29	27	30	26	28	25	27	31	28	29	31
30	25	27	28	31	31	27	31	31	26	27	27	31	31
31	29	25	28	27	30	31	25	28	28	31	28	30	29
30	28	28	28	25	26	26	29	30	30	30	30	26	25
26	30	26	25	25	27	27	26	25	27	26	27	28	27

Tacha todos los 64

66	67	64	66	66	62	64	65	63	65	65	66	61	66
63	61	66	65	65	63	62	61	66	64	66	61	66	63
66	62	65	65	61	67	64	64	61	61	66	67	67	63
65	66	65	67	67	62	67	67	64	61	66	64	64	65
65	67	64	65	61	65	63	67	62	64	66	62	64	61
63	66	65	62	67	63	61	67	64	64	67	64	63	61

Tacha todos los 73

73	73	75	74	76	73	76	73	76	72	72	72	74	75
70	76	74	70	76	75	76	76	73	72	71	71	72	71
73	72	72	76	75	76	72	71	76	72	75	70	70	72
71	72	74	75	74	71	71	74	70	74	72	73	73	75
71	76	73	75	73	72	72	76	73	75	74	76	76	70
73	70	76	70	71	74	73	75	74	75	71	71	73	71

Tacha todos los 49

46	46	50	48	51	47	47	52	46	51	46	46	48	50
48	49	51	48	50	50	50	50	49	50	46	46	46	47
50	51	50	47	50	52	46	51	46	50	51	49	51	52
47	47	51	46	48	52	49	46	46	48	51	49	49	50
49	52	49	51	46	46	46	48	46	50	50	49	52	48
51	50	51	52	48	46	49	50	50	47	47	46	46	49

Tacha todos los 63

62	66	60	60	61	61	60	66	64	63	63	63	63	63
63	63	60	60	65	62	62	64	65	61	65	65	60	64
60	65	64	63	65	61	63	61	60	64	60	64	63	61
64	62	66	66	63	61	64	61	66	66	61	63	61	60
64	61	61	63	64	63	64	60	60	63	60	61	61	60
62	65	63	65	65	64	62	66	60	66	61	61	63	62

Tacha todos los 39

37	39	36	38	39	38	42	40	40	42	41	40	41	42
39	38	41	41	36	38	36	37	42	42	41	42	42	37
39	40	36	41	41	39	38	38	38	37	42	36	41	42
38	37	36	36	39	36	36	41	37	40	41	42	42	37
40	40	40	36	36	38	39	38	39	38	42	41	42	39
41	36	36	37	41	41	41	38	37	39	36	41	38	42

Tacha todos los 29

29	27	31	28	30	27	30	27	26	27	26	32	30	31
26	32	29	27	32	30	26	31	29	31	29	31	29	27
26	28	29	28	29	27	31	30	32	29	29	27	26	30
31	26	26	29	28	27	28	28	31	32	26	31	27	32
32	26	31	28	31	28	31	31	31	26	27	31	29	26
30	26	29	31	30	26	32	28	28	26	28	29	28	28

Tacha todos los 71

74	70	69	73	71	70	71	69	71	68	71	68	69	70
69	71	71	72	68	73	74	71	69	74	68	70	71	74
72	70	70	71	72	73	71	70	73	74	69	73	69	70
69	68	74	73	70	68	71	74	70	74	73	74	73	68
71	73	72	73	69	69	68	72	70	68	70	72	70	69
74	72	69	72	69	73	73	73	74	72	71	72	73	73

Tacha todos los 55

52	56	54	56	56	58	55	58	52	52	56	58	55	55
55	53	54	58	55	54	53	53	58	58	54	53	56	52
53	58	52	52	55	55	55	58	56	56	58	58	54	55
54	54	55	53	55	52	53	54	54	57	56	54	56	52
55	56	54	53	58	52	57	53	56	54	58	55	54	58
54	58	52	56	54	52	56	52	54	52	55	53	53	54



Tacha todos los 68

67	68	70	69	70	68	68	68	66	68	71	65	71	67
68	68	65	68	69	65	66	70	68	68	66	70	71	66
68	71	65	65	70	65	65	70	68	65	67	66	65	66
71	68	69	70	71	67	68	68	70	67	68	71	67	70
68	68	66	69	65	68	70	67	65	71	66	67	68	66
66	71	66	71	69	71	69	69	68	67	71	66	68	66

Tacha todos los 30

33	27	28	31	29	31	27	33	31	30	29	27	27	28
28	28	32	28	31	32	29	30	31	27	30	33	30	27
27	28	32	31	29	33	30	30	28	27	28	28	32	32
32	28	30	33	29	31	30	33	27	31	32	31	32	33
33	31	28	27	32	30	32	32	33	28	31	30	32	31
30	29	29	31	33	32	27	30	33	27	28	31	33	28

Tacha todos los 48

46	51	46	47	47	51	47	51	48	45	45	51	50	51
48	45	47	45	47	51	46	45	45	45	49	48	45	49
45	47	50	47	46	49	46	45	45	46	50	48	49	51
47	49	45	48	51	49	49	47	51	45	48	46	45	45
51	47	46	47	45	51	47	51	51	49	50	51	49	45
51	49	51	46	46	49	47	49	51	47	51	45	45	51

☾	☯	ॐ	☸	♈	♉	♊	♋	♌	♍
1	2	3	4	5	6	7	8	9	10

Completa los números en las fichas de abajo siguiendo el modelo de las de arriba

♌	♊	☾	☾	♍	♊	☯	♉	♌	☯	♊	♊	♉

♌	☸	♌	♈	♍	♋	ॐ	☸	♌	♈	♊	♉	☯











☾	♈	♋	♋	ॐ	♈	♈	☯	♌	♌	♊	♌	☸

♈	♊	♉	♈	♌	♈	☾	♈	ॐ	♉	☸	♍	♈














♊	☸	☾	♉	♉	♊	☯	♉	♍	☯	ॐ	ॐ	♊

♈	♌	♌	♋	♍	☾	♉	ॐ	☾	♍	♋	♉	♈














ॐ	♋	☯	☾	☸	☯	ॐ	☯	♍	☸	♊	ॐ	♊














									
1	2	3	4	5	6	7	8	9	10

Completa los números en las fichas de abajo siguiendo el modelo de las de arriba














												










												

☾	♌	♍	☾	☯	ॐ	☸	♈	♉	♊
1	2	3	4	5	6	7	8	9	10

Completa los números en las fichas de abajo siguiendo el modelo de las de arriba

☾	♈	☸	ॐ	ॐ	☾	♍	♍	☯	♈	♉	♉	☾

♈	☸	☾	☾	♈	☾	☾	☾	♌	♉	☯	♉	♈

☾	♍	♈	☸	ॐ	♍	☯	♌	ॐ	ॐ	☯	♈	☾

☯	♍	♉	♍	☾	♈	♍	☯	ॐ	ॐ	☾	☸	ॐ

☾	♌	♈	☾	♈	♉	☾	☸	☸	☯	☸	♊	♌

☾	ॐ	♊	♍	☾	♍	♈	♍	♌	♌	♍	♈	♌

♌	ॐ	♍	♊	♉	ॐ	☯	♌	☯	☸	☾	♍	☾

II	☮	☯	♎	☾	☯	ॐ	☸	♏	♏
1	2	3	4	5	6	7	8	9	10

Completa los números en las fichas de abajo siguiendo el modelo de las de arriba

II	ॐ	☯	☾	☸	♏	II	☯	ॐ	♎	☮	☯	☯

ॐ	☮	ॐ	♎	♏	☯	☯	II	☮	♏	☯	♏	♏

ॐ	II	♏	☮	☸	☸	ॐ	♎	ॐ	ॐ	☯	☯	☸

☮	II	♏	♎	ॐ	☯	☸	☯	♎	♏	☯	♎	♏

♏	☸	II	☾	☮	♎	♏	☸	☯	ॐ	ॐ	☯	☯

♎	☾	ॐ	☯	☯	ॐ	☮	☯	♎	♏	♏	☯	II

♏	☯	♏	♏	☮	☮	ॐ	♎	♏	♎	II	♎	☯

♈	♉	♊	♋	♌	♍	♎	☯	ॐ	☸
1	2	3	4	5	6	7	8	9	10

Completa los números en las fichas de abajo siguiendo el modelo de las de arriba

♎	☸	♍	♊	♋	ॐ	ॐ	♌	♌	♊	♊	♋	♎

♊	♌	♍	☸	☸	♉	♌	♌	♎	♊	ॐ	♍	♋

☸	♋	♈	♍	♊	ॐ	♌	♊	♋	♈	♍	♉	♍


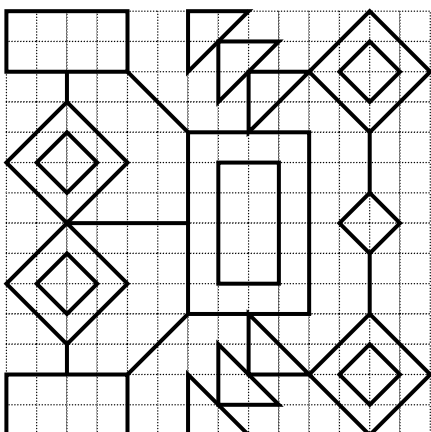



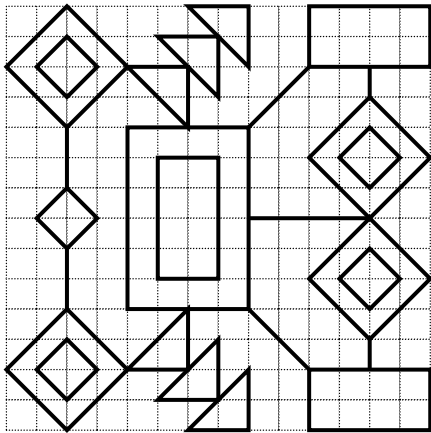


♈	♌	ॐ	♈	♌	♊	♉	♊	☸	☯	♊	☸	☯

♎	♋	♍	☸	♍	♎	♎	♎	♉	☯	ॐ	♈	♌


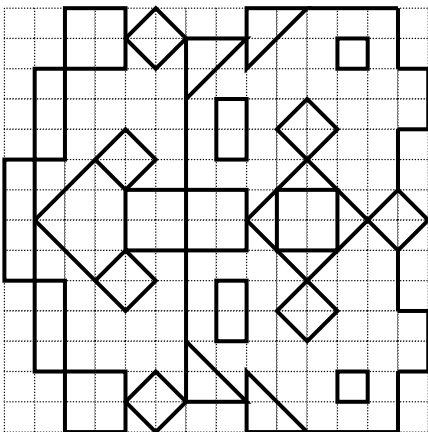

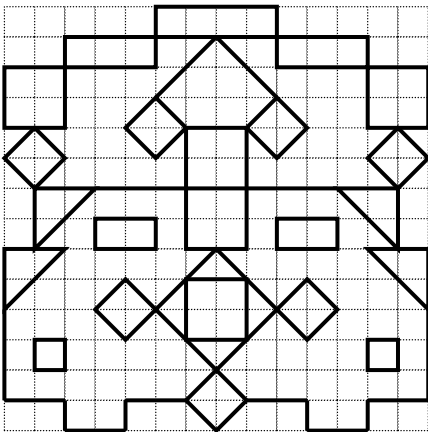

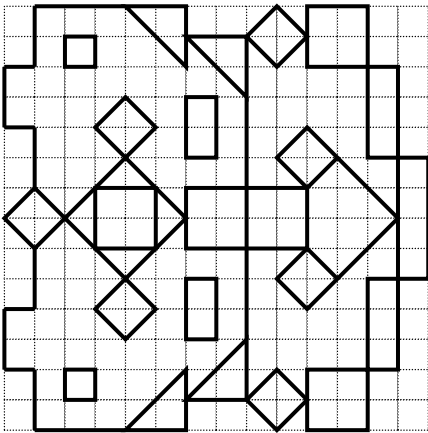

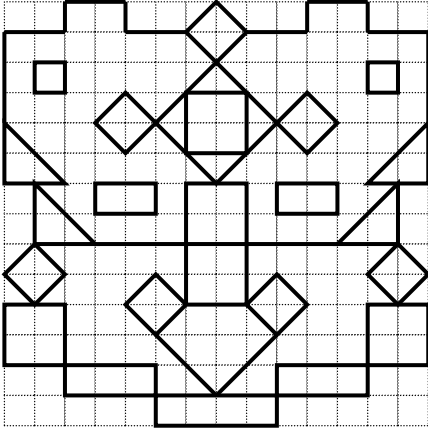
♉	☯	♉	☸	♋	♈	☯	☯	ॐ	☯	☸	♎	♊

ॐ	☸	♍	♈	☯	♋	☸	♍	♌	♌	♉	ॐ	♍

**Copia la figura de la izquierda en el recuadro de la derecha**


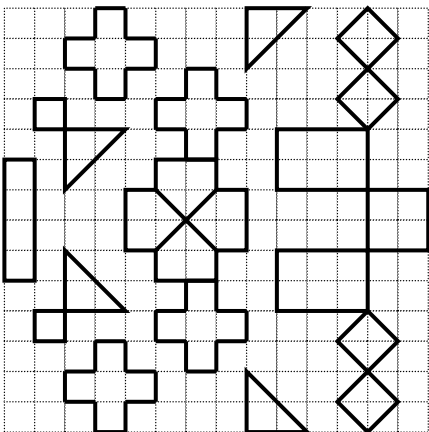

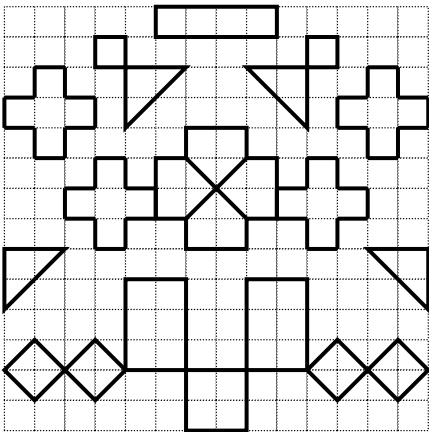

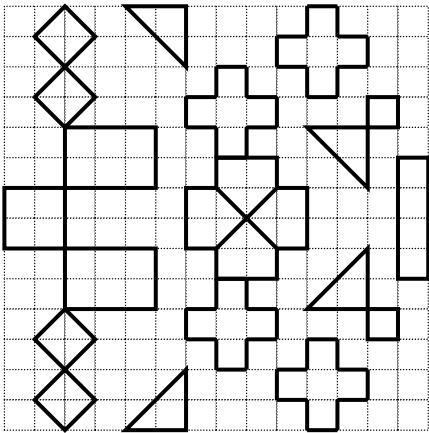

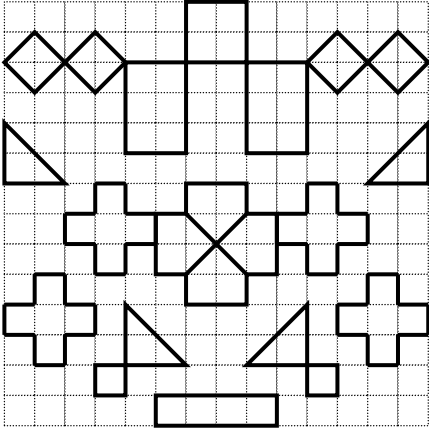


**Copia la figura de la izquierda en el recuadro de la derecha**








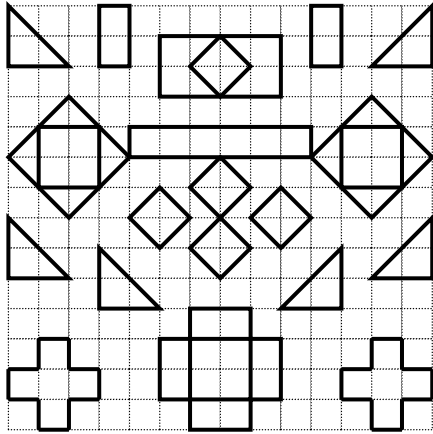





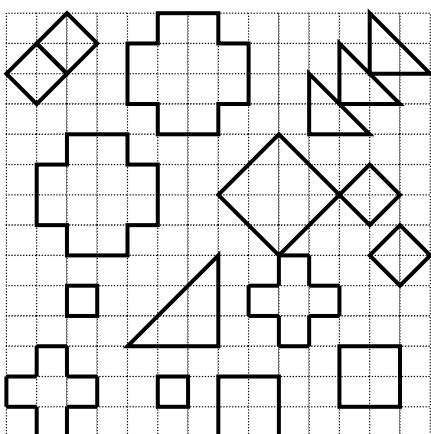

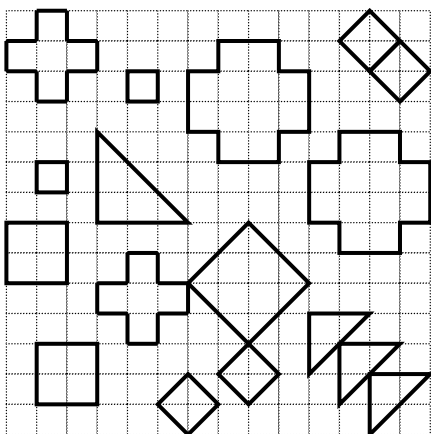

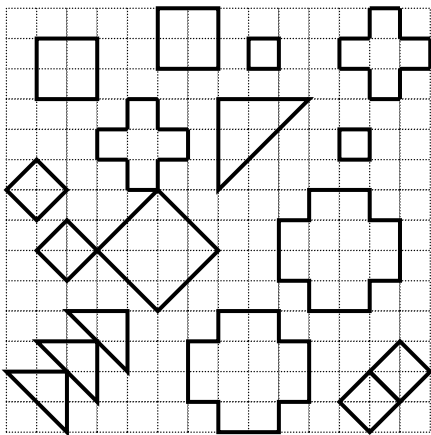

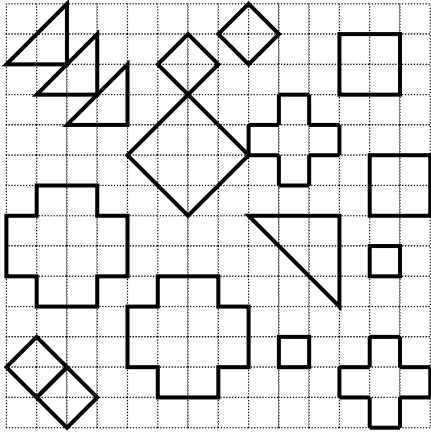
**Copia la figura de la izquierda en el recuadro de la derecha**



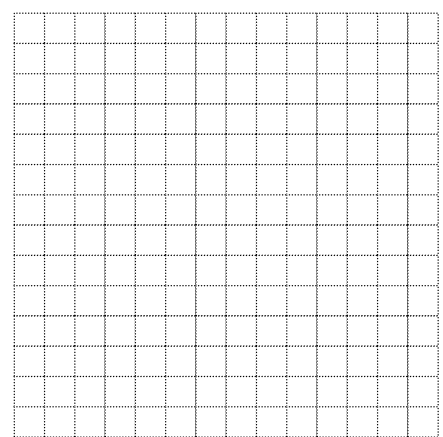
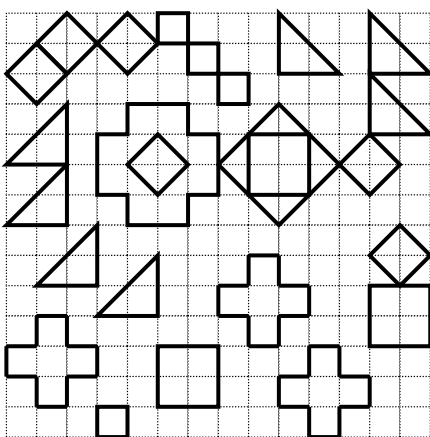

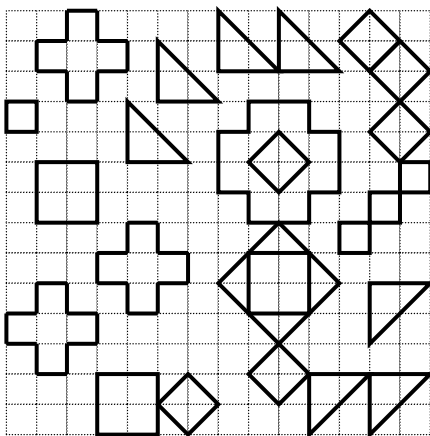

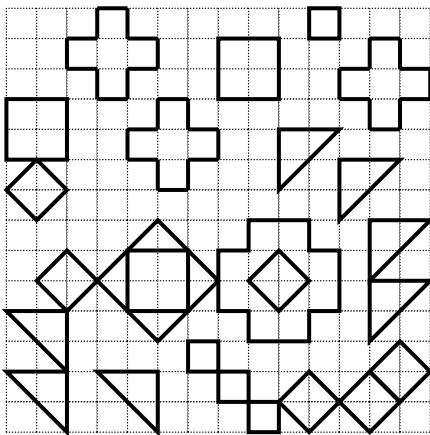

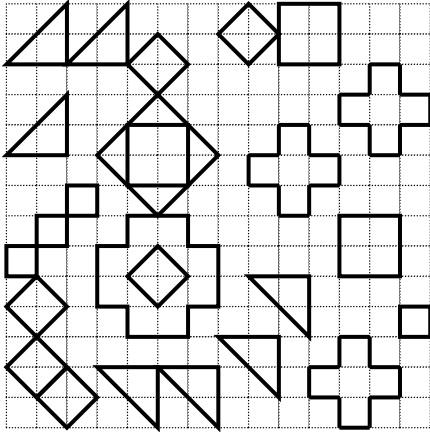
**Copia la figura de la izquierda en el recuadro de la derecha**






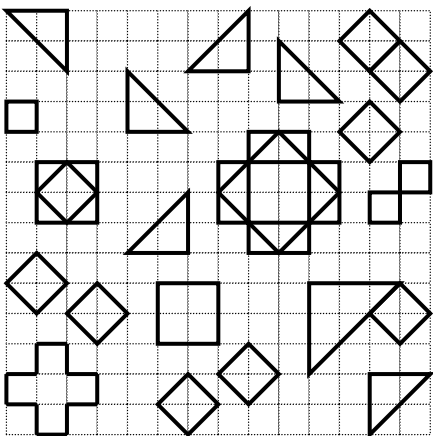

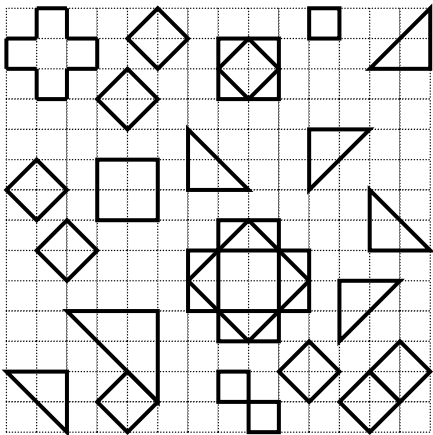

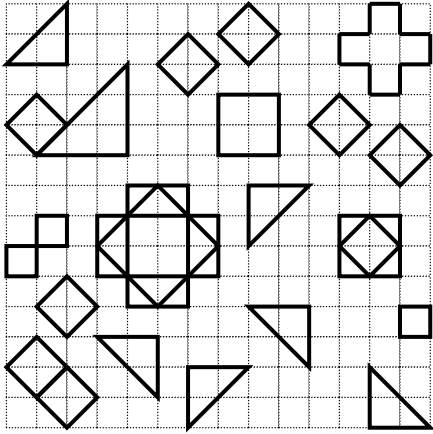
**Copia la figura de la izquierda en el recuadro de la derecha**




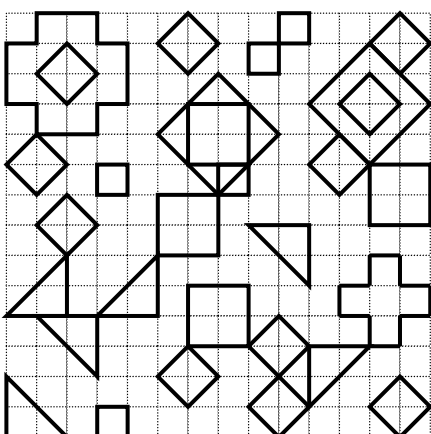

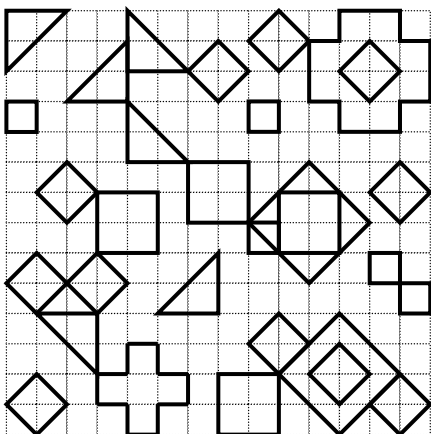

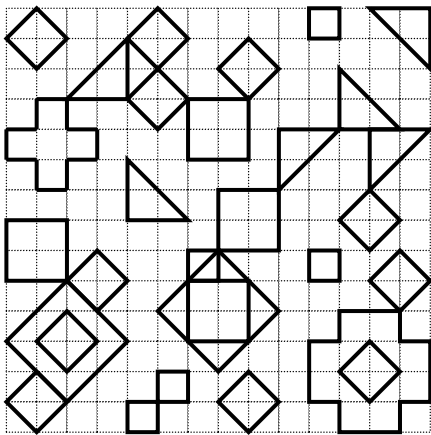

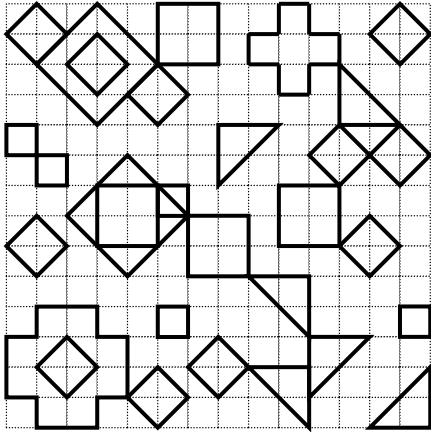
**Copia la figura de la izquierda en el recuadro de la derecha**



**Copia la figura de la izquierda en el recuadro de la derecha**


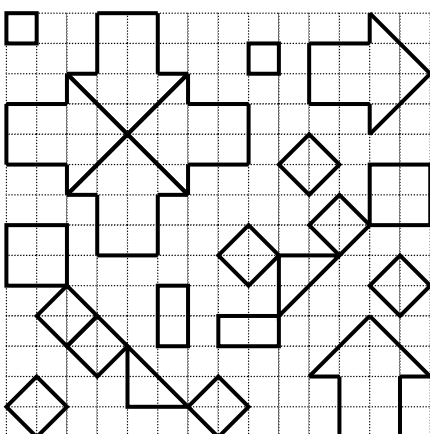

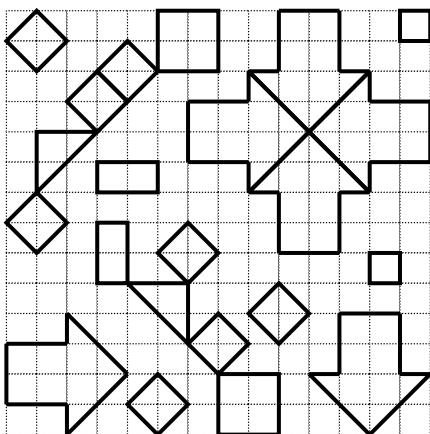

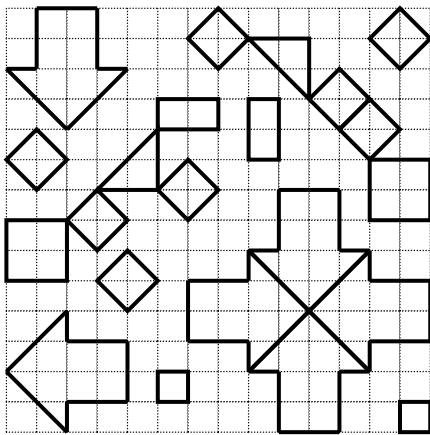

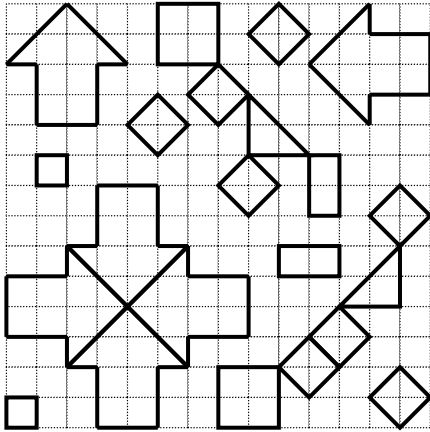


**Copia la figura de la izquierda en el recuadro de la derecha**




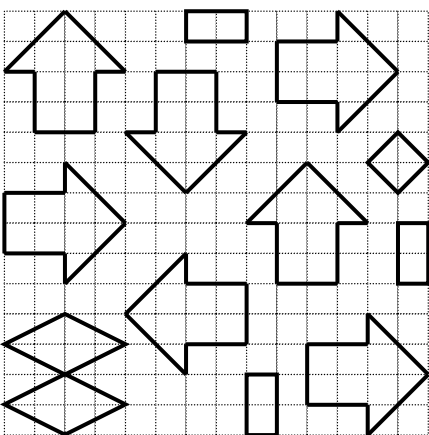



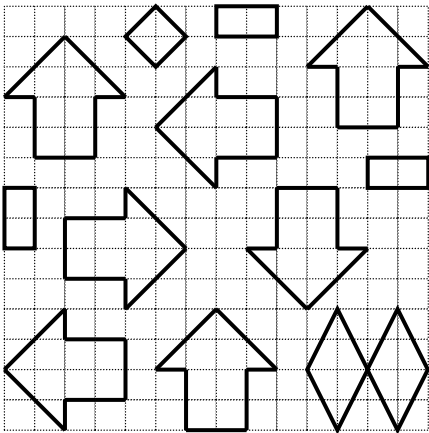

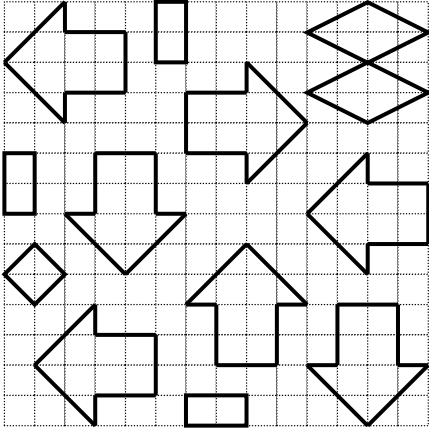


**Copia la figura de la izquierda en el recuadro de la derecha**


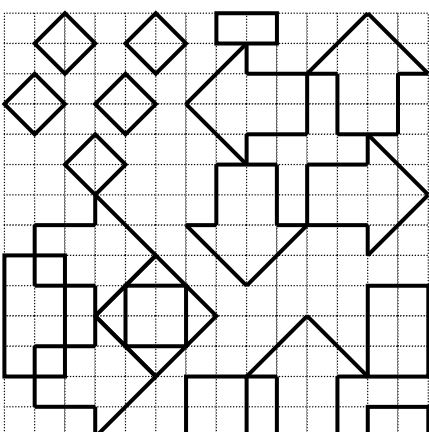

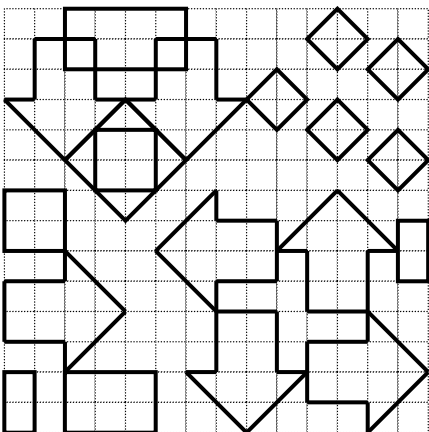

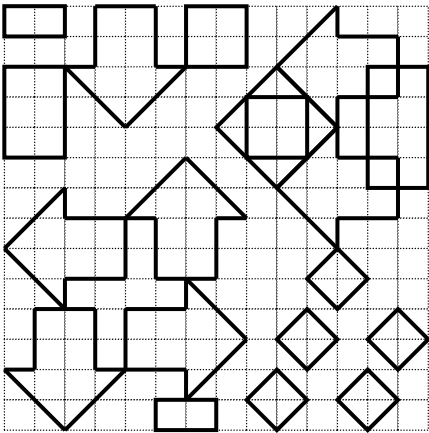

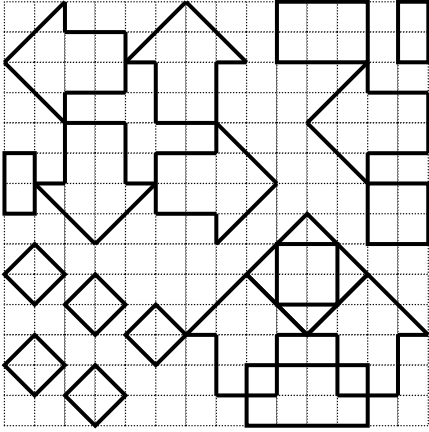





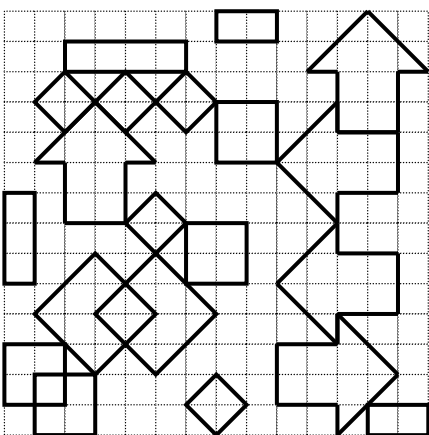

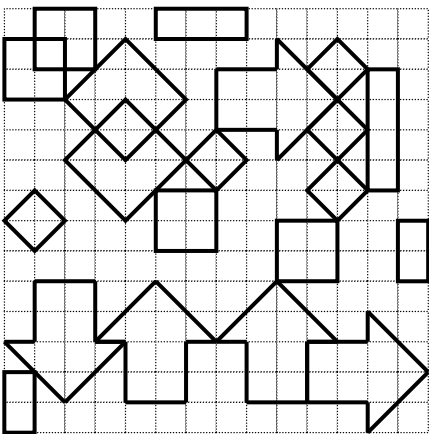

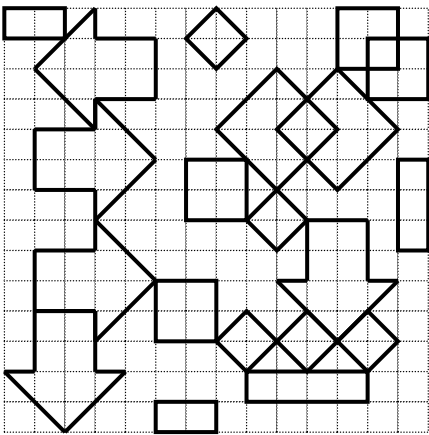

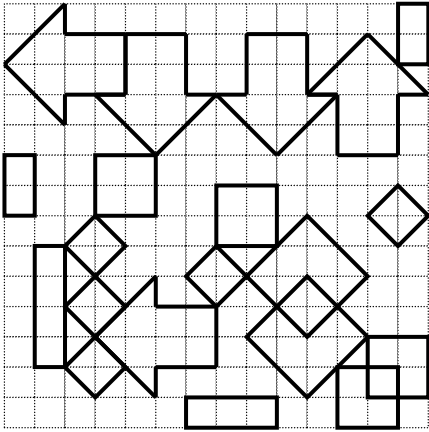
**Copia la figura de la izquierda en el recuadro de la derecha**




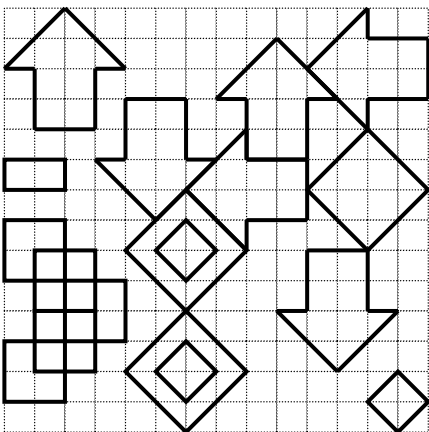

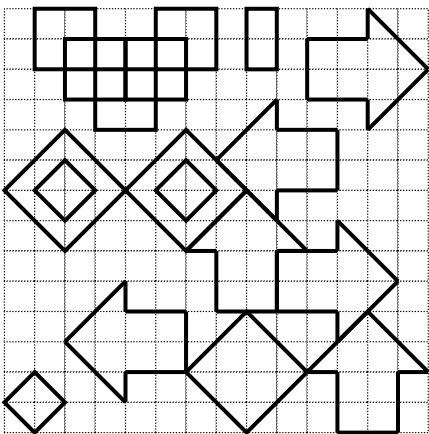

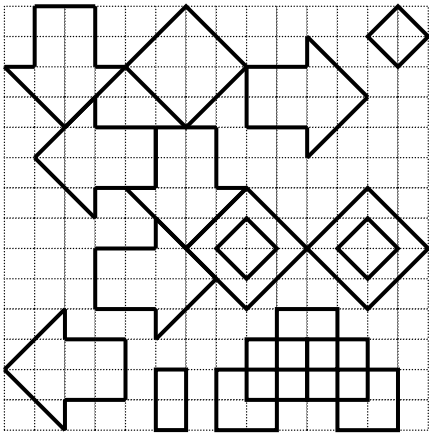

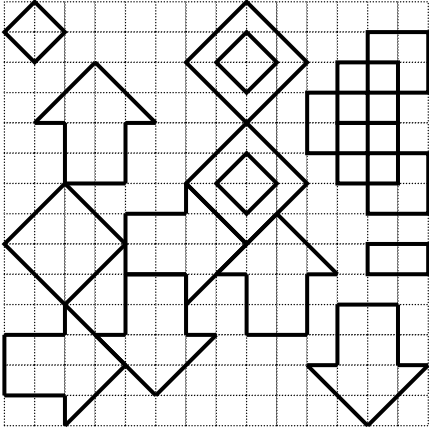
**Copia la figura de la izquierda en el recuadro de la derecha**




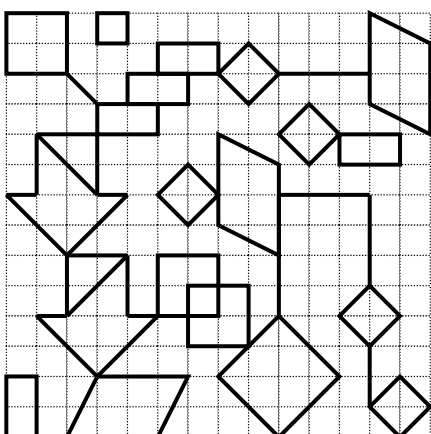

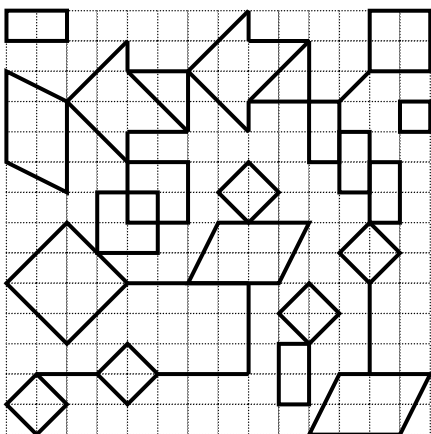

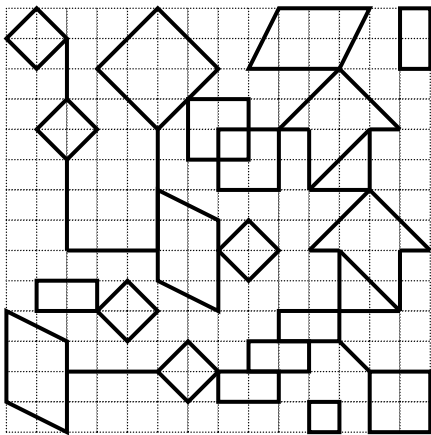

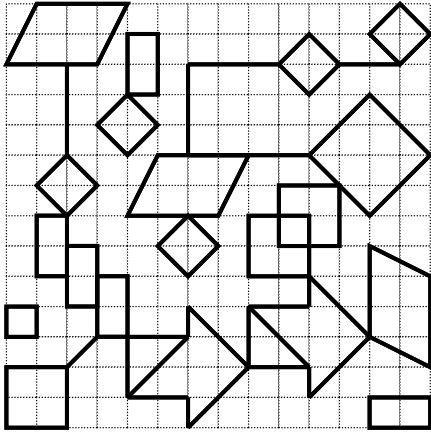
**Copia la figura de la izquierda en el recuadro de la derecha**




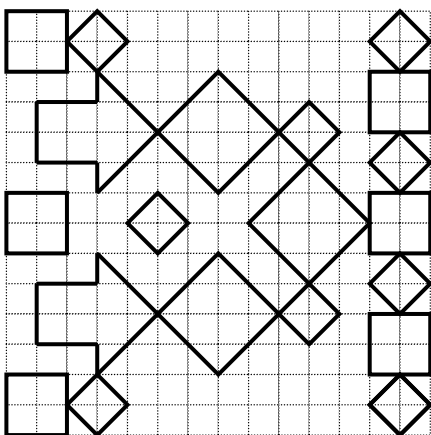

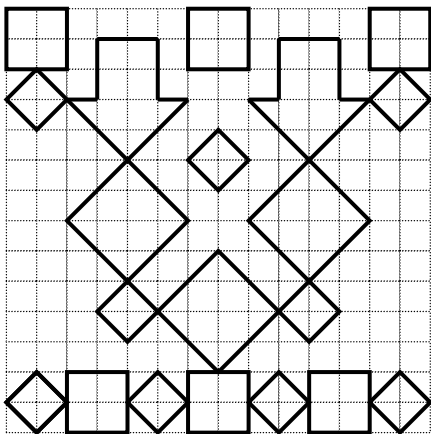

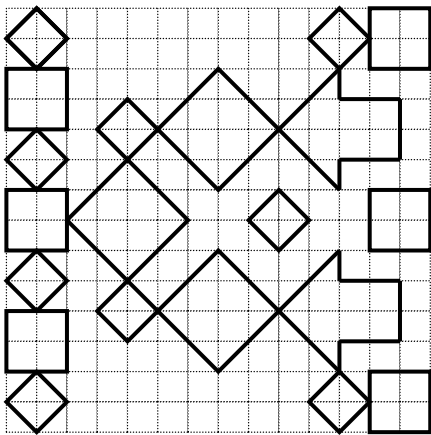

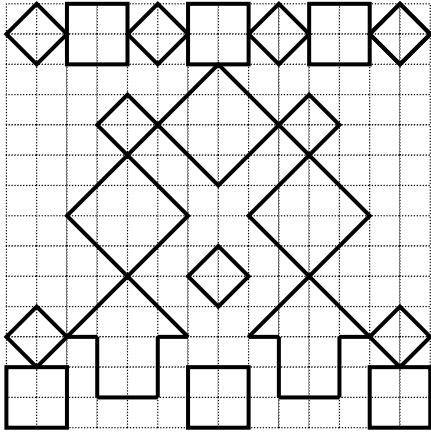
**Copia la figura de la izquierda en el recuadro de la derecha**




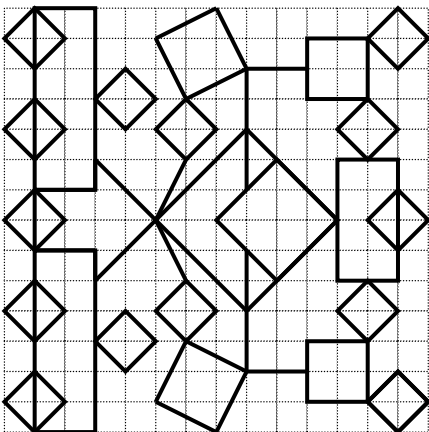

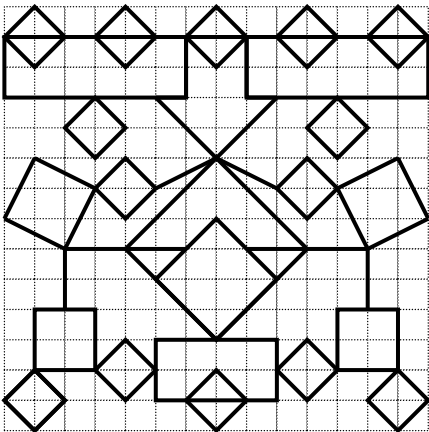

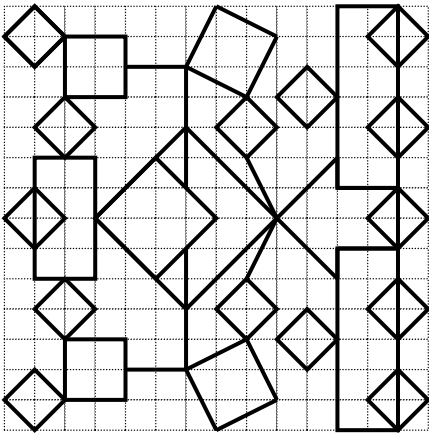

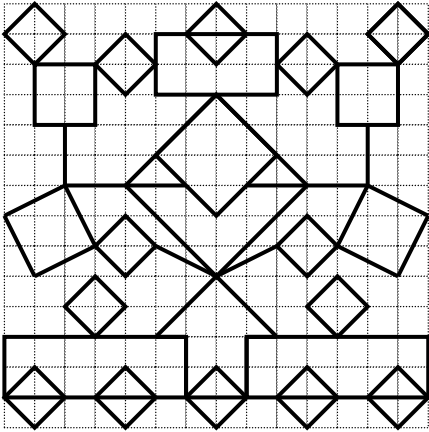
**Copia la figura de la izquierda en el recuadro de la derecha**




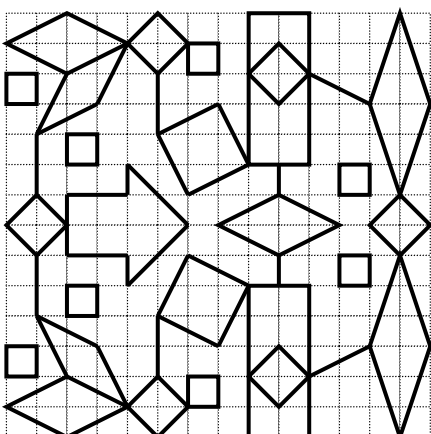

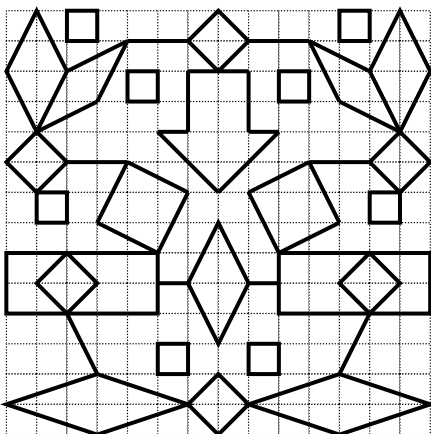

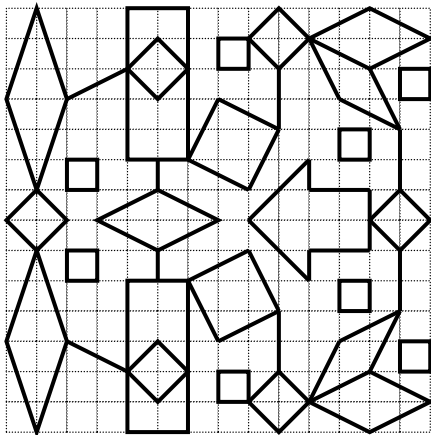

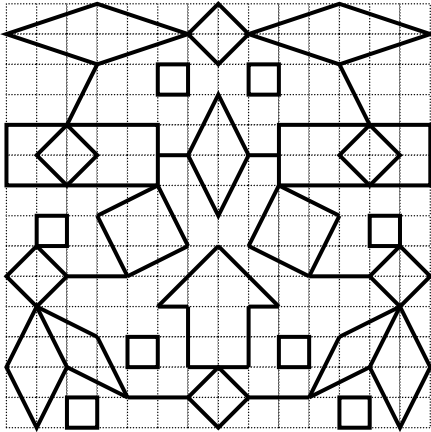
**Copia la figura de la izquierda en el recuadro de la derecha**



**Copia la figura de la izquierda en el recuadro de la derecha**


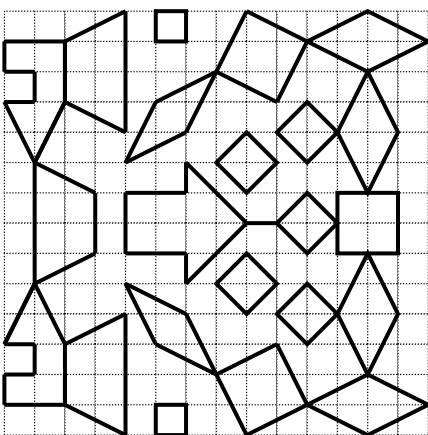

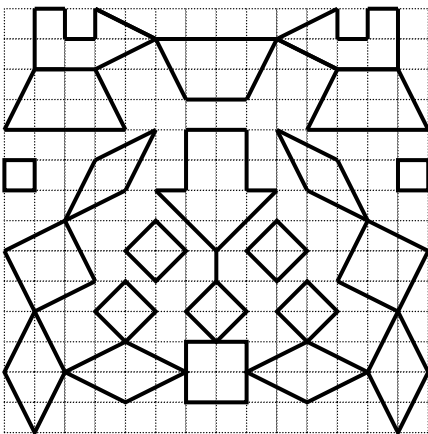

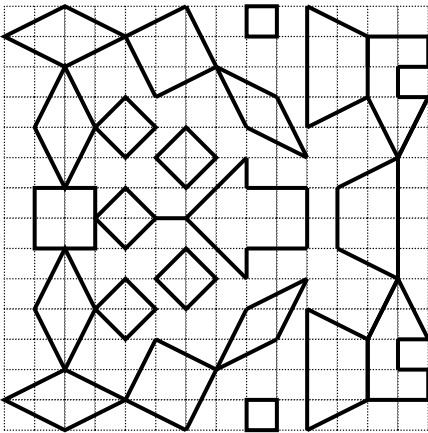

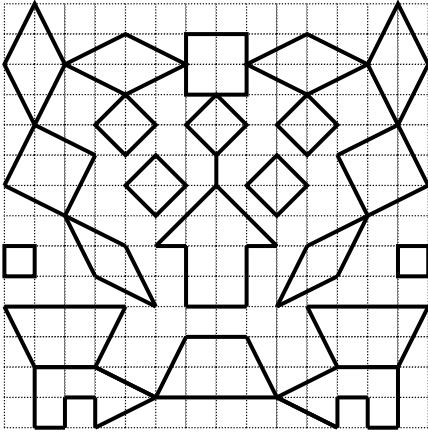


**Copia la figura de la izquierda en el recuadro de la derecha**


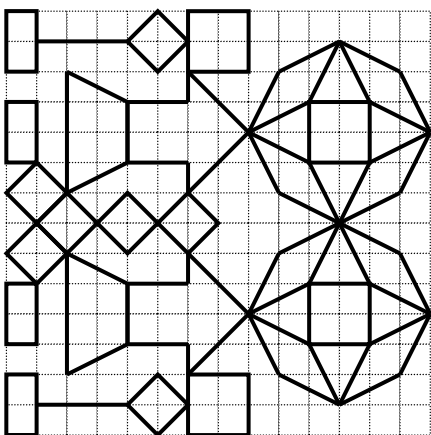

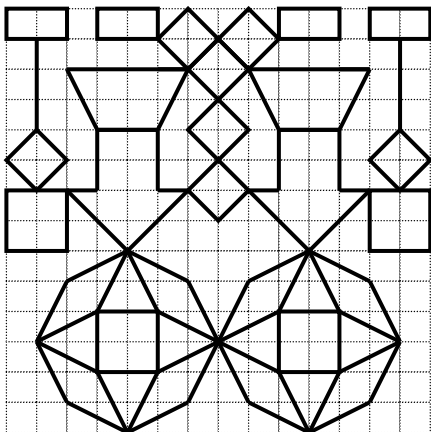

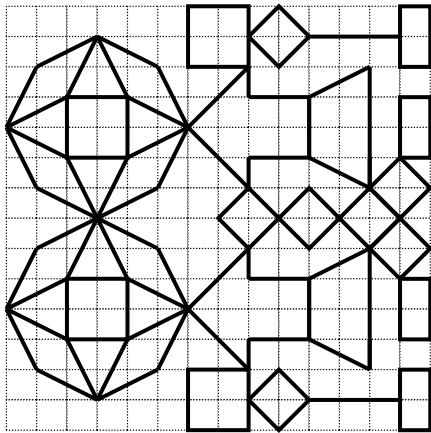

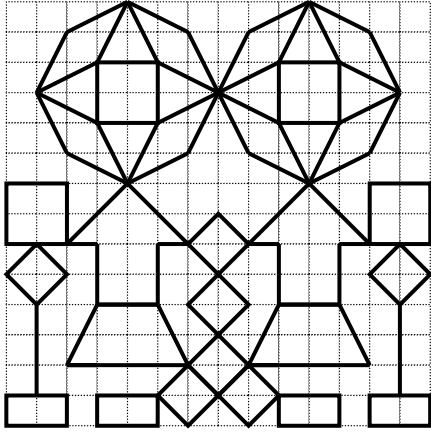





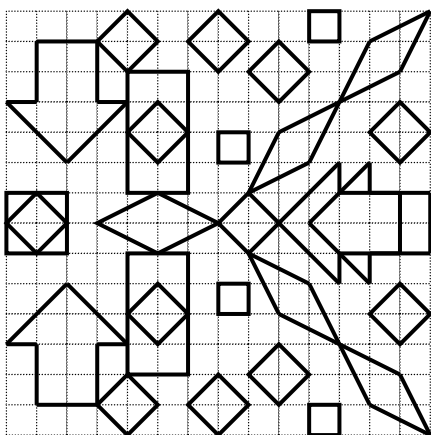



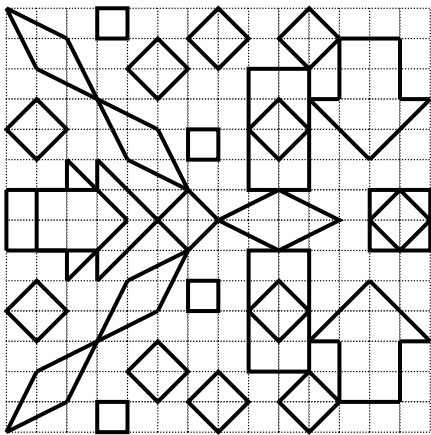


**Copia la figura de la izquierda en el recuadro de la derecha**




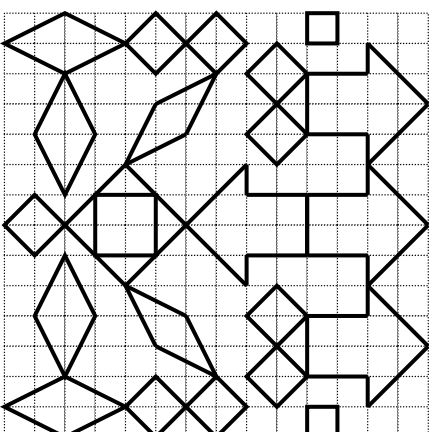

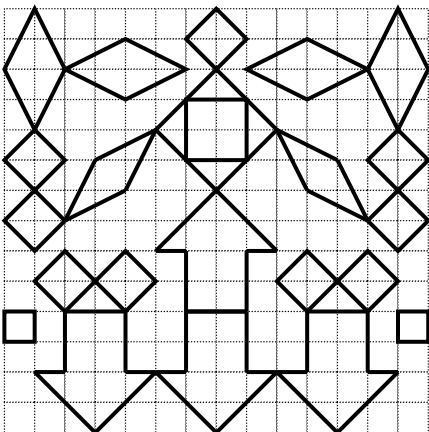




**Copia la figura de la izquierda en el recuadro de la derecha**




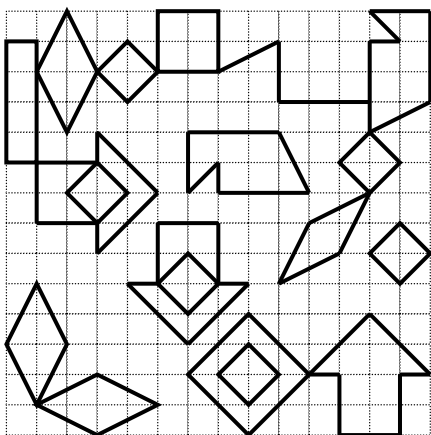

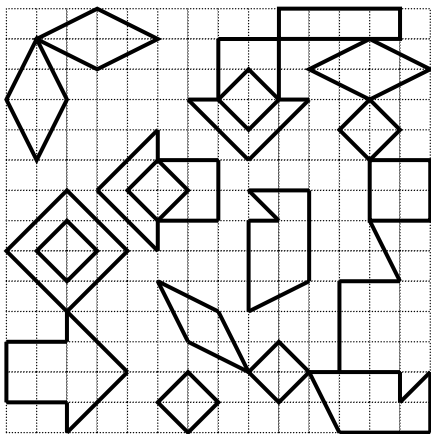

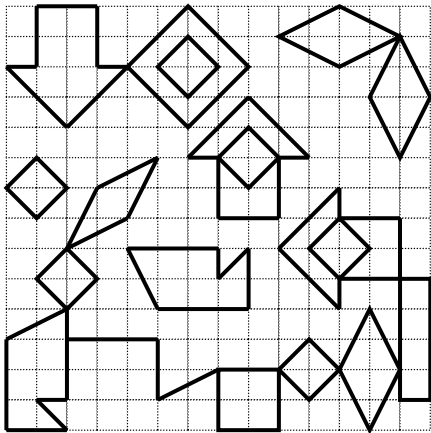

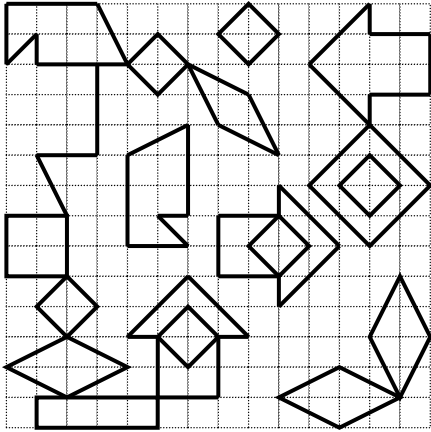
**Copia la figura de la izquierda en el recuadro de la derecha**



**Copia la figura de la izquierda en el recuadro de la derecha**



**Copia la figura de la izquierda en el recuadro de la derecha**



**Copia la figura de la izquierda en el recuadro de la derecha**

